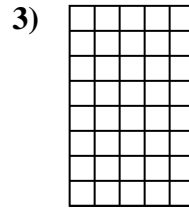
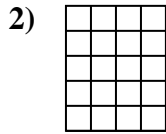
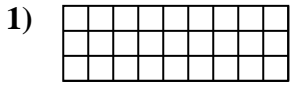




Determine the area. Each **SVGREPLACE** = 1 square unit ( $u^2$ ).


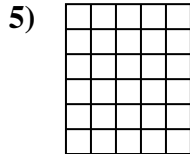
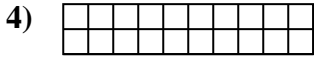
**Answers**



1. \_\_\_\_\_

2. \_\_\_\_\_

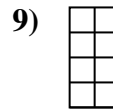
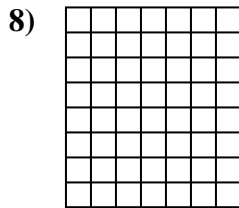
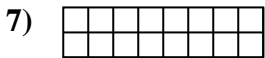
3. \_\_\_\_\_



4. \_\_\_\_\_

5. \_\_\_\_\_

6. \_\_\_\_\_



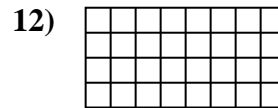
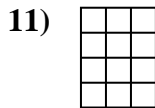
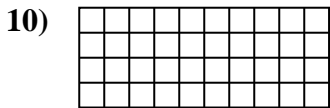
7. \_\_\_\_\_

8. \_\_\_\_\_

9. \_\_\_\_\_

10. \_\_\_\_\_

11. \_\_\_\_\_

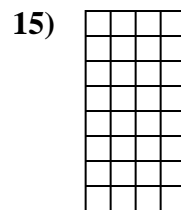
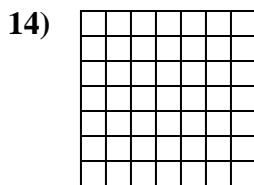



12. \_\_\_\_\_

13. \_\_\_\_\_

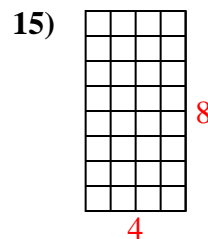
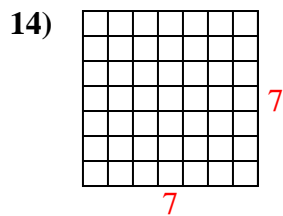
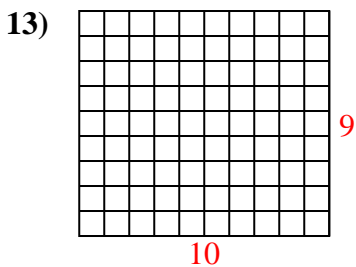
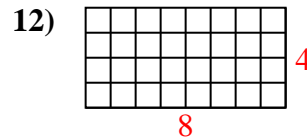
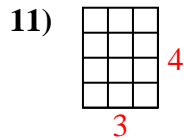
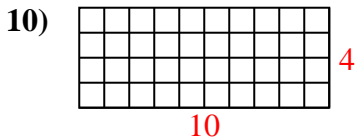
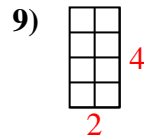
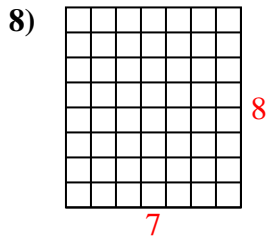
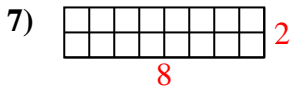
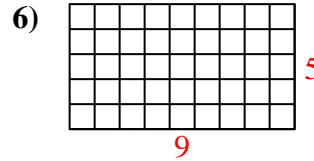
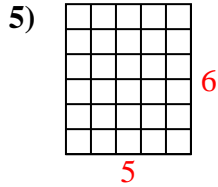
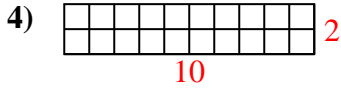
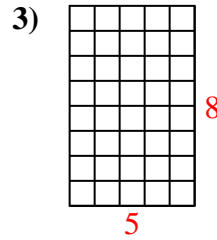
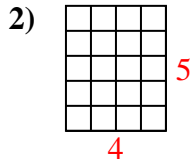
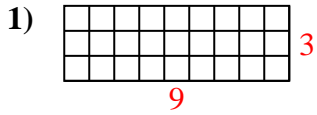
14. \_\_\_\_\_

15. \_\_\_\_\_





Determine the area. Each **SVGREPLACE** = 1 square unit ( $u^2$ ).



Answers

1. 27  $u^2$

2. 20  $u^2$

3. 40  $u^2$

4. 20  $u^2$

5. 30  $u^2$

6. 45  $u^2$

7. 16  $u^2$

8. 56  $u^2$

9. 8  $u^2$

10. 40  $u^2$

11. 12  $u^2$

12. 32  $u^2$

13. 90  $u^2$

14. 49  $u^2$

15. 32  $u^2$