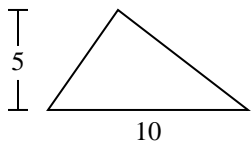


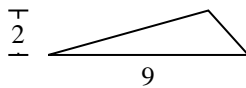


Find the area of the triangle. Round your answer to the nearest 10th.

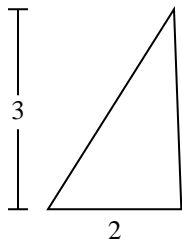
1)



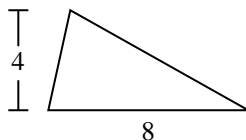
2)



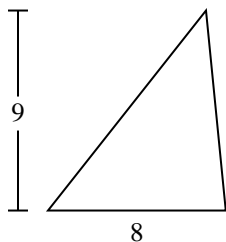
3)



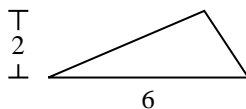
4)



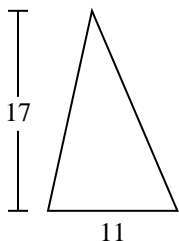
5)



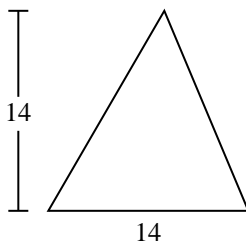
6)



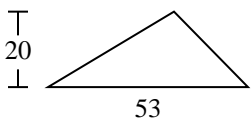
7)



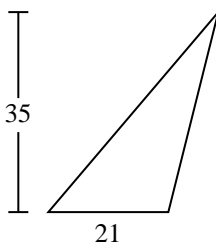
8)



9)



10)



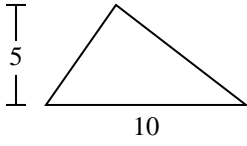
Answers

- 1. _____
- 2. _____
- 3. _____
- 4. _____
- 5. _____
- 6. _____
- 7. _____
- 8. _____
- 9. _____
- 10. _____

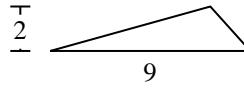


Find the area of the triangle. Round your answer to the nearest 10th.

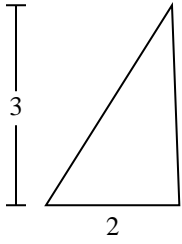
1)



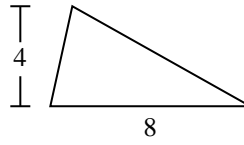
2)



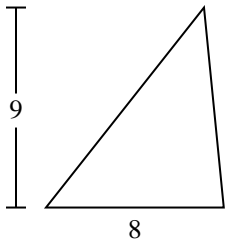
3)



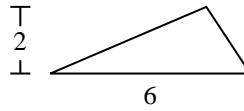
4)



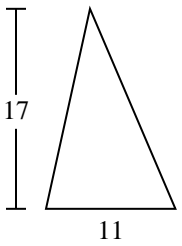
5)



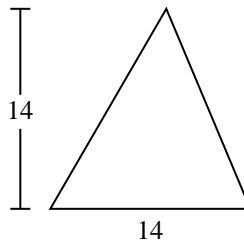
6)



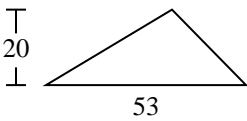
7)



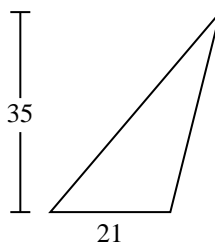
8)



9)



10)



Answers

1. 25

2. 9

3. 3

4. 16

5. 36

6. 6

7. 93.5

8. 98

9. 530

10. 367.5



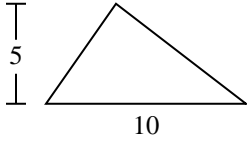
Find the area of the triangle. Round your answer to the nearest 10th.

93.5	98	530	25	9
6	36	16	3	

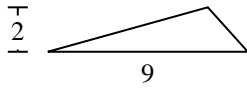
Answers

1. _____
2. _____
3. _____
4. _____
5. _____
6. _____
7. _____
8. _____
9. _____

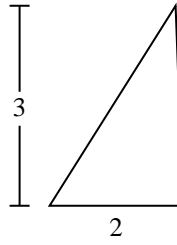
1)



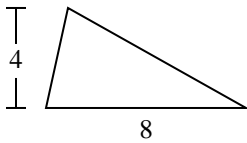
2)



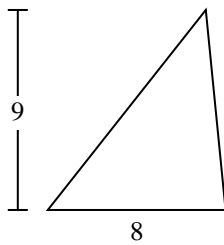
3)



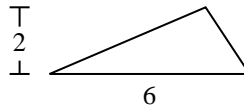
4)



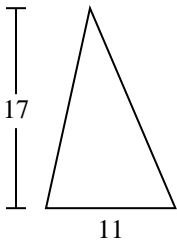
5)



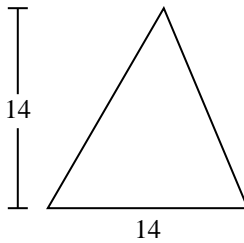
6)



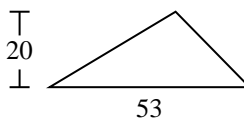
7)



8)



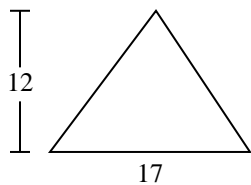
9)



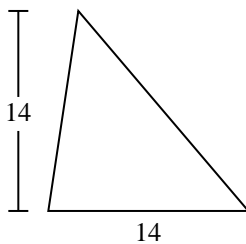


Find the area of the triangle. Round your answer to the nearest 10th.

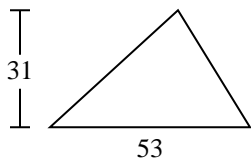
1)



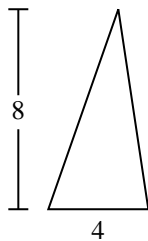
2)



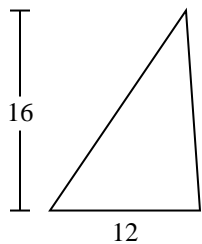
3)



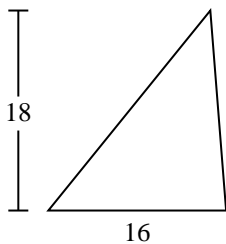
4)



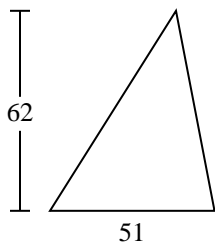
5)



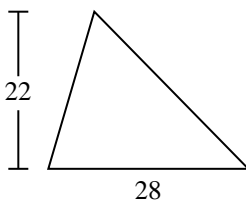
6)



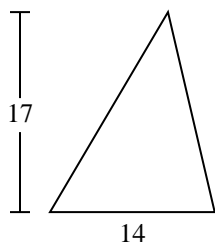
7)



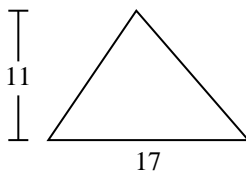
8)



9)



10)



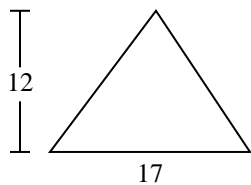
Answers

- 1. _____
- 2. _____
- 3. _____
- 4. _____
- 5. _____
- 6. _____
- 7. _____
- 8. _____
- 9. _____
- 10. _____

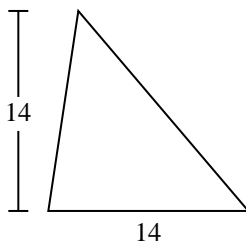


Find the area of the triangle. Round your answer to the nearest 10th.

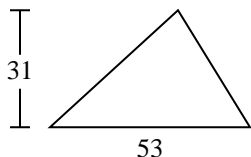
1)



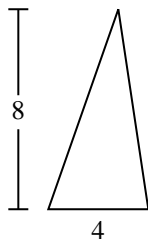
2)



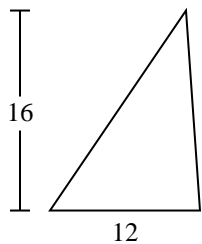
3)



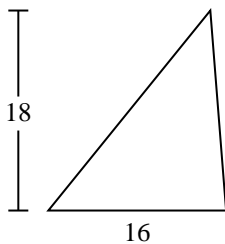
4)



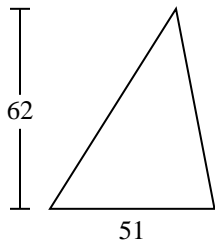
5)



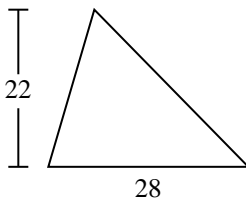
6)



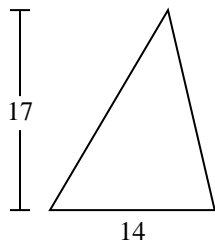
7)



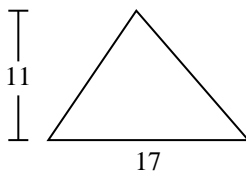
8)



9)



10)



Answers

1. 102

2. 98

3. 821.5

4. 16

5. 96

6. 144

7. 1,581

8. 308

9. 119

10. 93.5

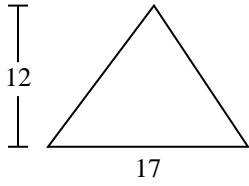


Find the area of the triangle. Round your answer to the nearest 10th.

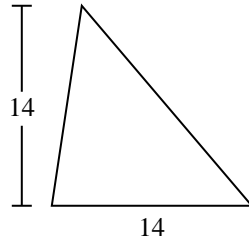
102	1,581	308	144	16
119	821.5	98	96	

Answers

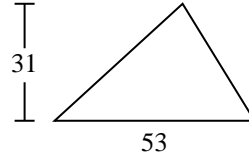
1)



2)



3)



1. _____

2. _____

3. _____

4. _____

5. _____

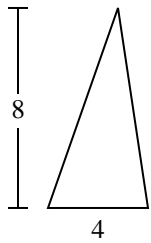
6. _____

7. _____

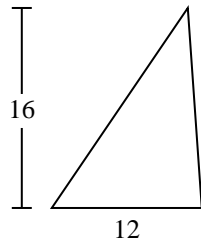
8. _____

9. _____

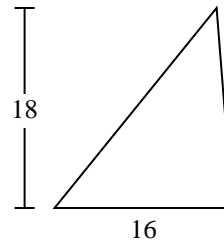
4)



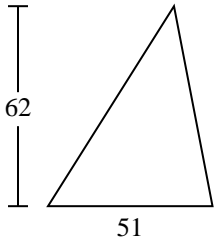
5)



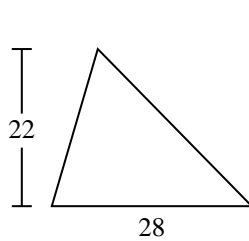
6)



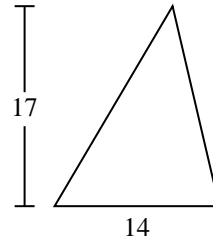
7)



8)

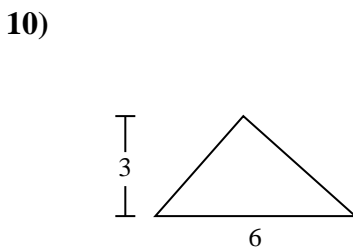
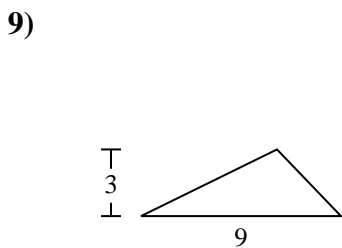
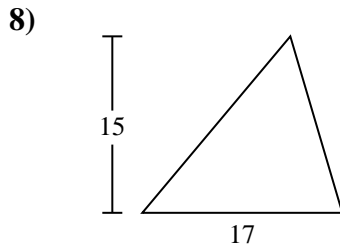
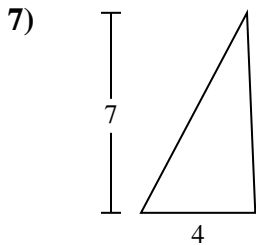
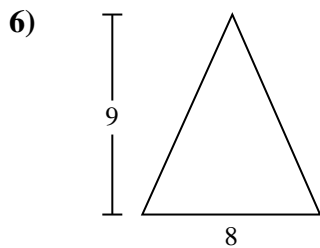
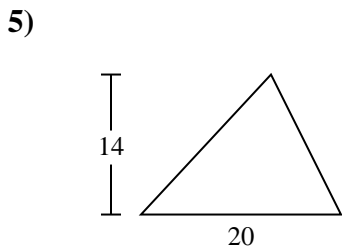
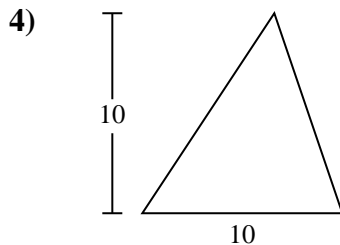
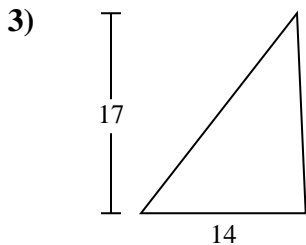
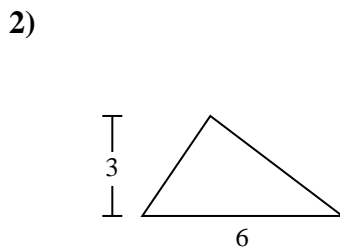
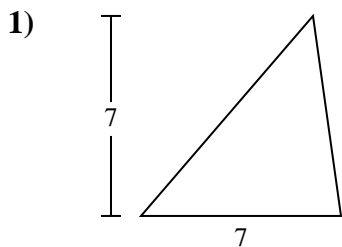


9)





Find the area of the triangle. Round your answer to the nearest 10th.

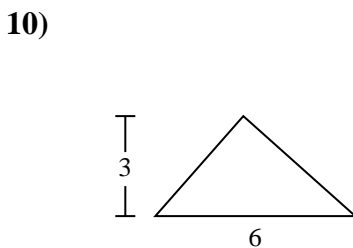
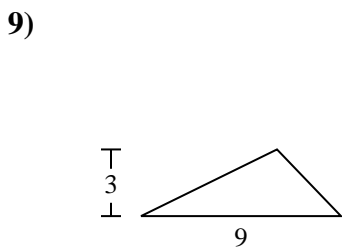
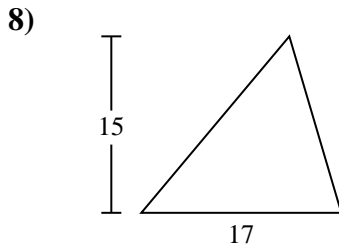
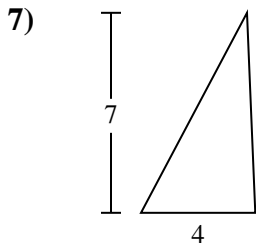
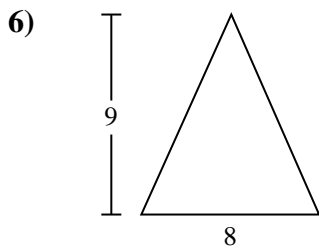
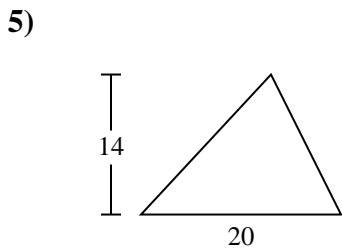
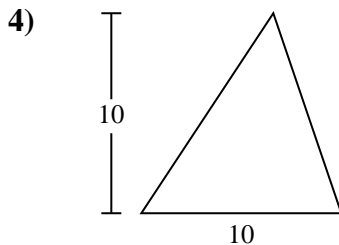
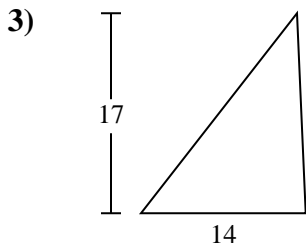
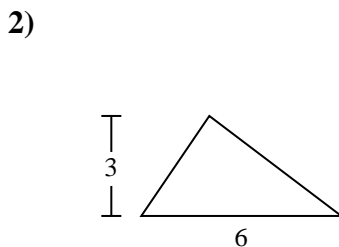
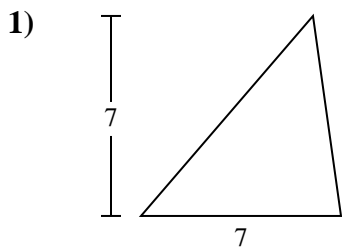


Answers

- 1. _____
- 2. _____
- 3. _____
- 4. _____
- 5. _____
- 6. _____
- 7. _____
- 8. _____
- 9. _____
- 10. _____



Find the area of the triangle. Round your answer to the nearest 10th.



Answers

- 1. 24.5
- 2. 9
- 3. 119
- 4. 50
- 5. 140
- 6. 36
- 7. 14
- 8. 127.5
- 9. 13.5
- 10. 9



Find the area of the triangle. Round your answer to the nearest 10th.

127.5

13.5

119

140

14

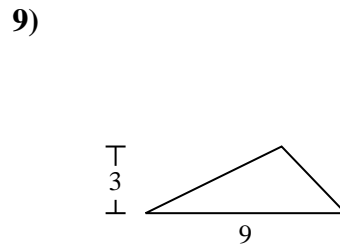
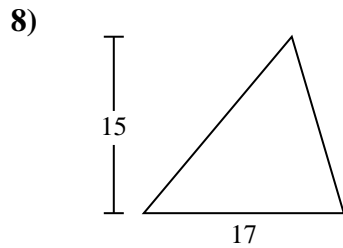
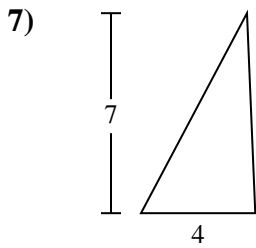
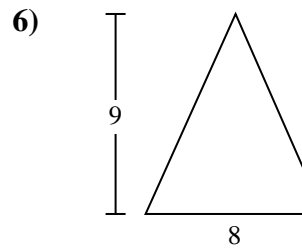
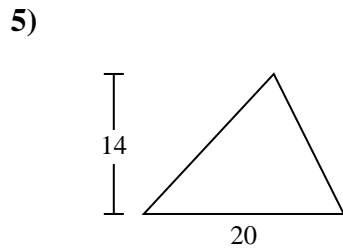
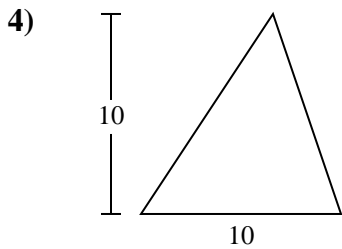
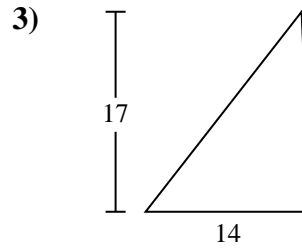
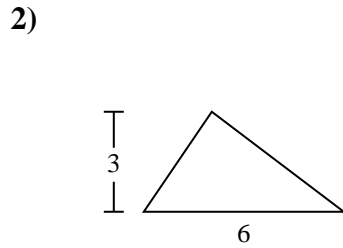
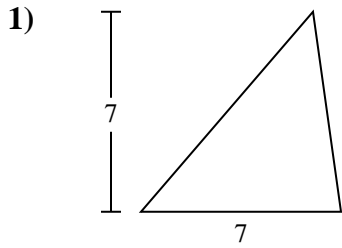
24.5

9

36

50

Answers

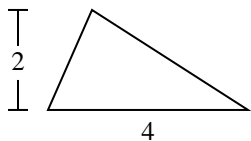


1. _____
2. _____
3. _____
4. _____
5. _____
6. _____
7. _____
8. _____
9. _____

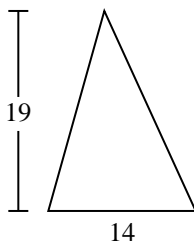


Find the area of the triangle. Round your answer to the nearest 10th.

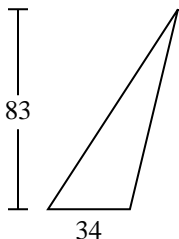
1)



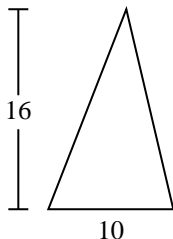
2)



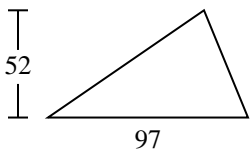
3)



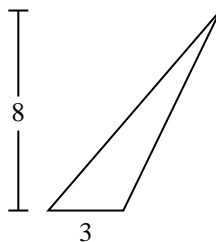
4)



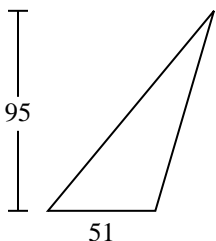
5)



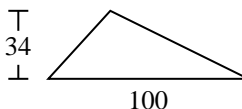
6)



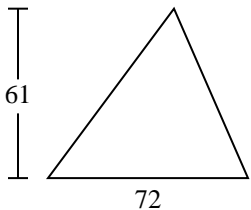
7)



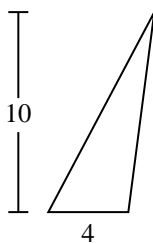
8)



9)



10)



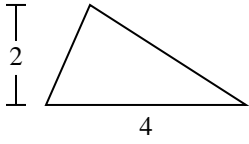
Answers

1. _____
2. _____
3. _____
4. _____
5. _____
6. _____
7. _____
8. _____
9. _____
10. _____

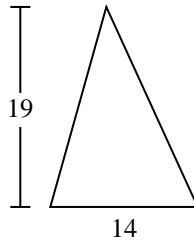


Find the area of the triangle. Round your answer to the nearest 10th.

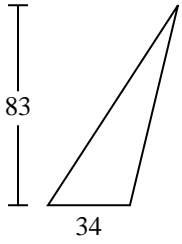
1)



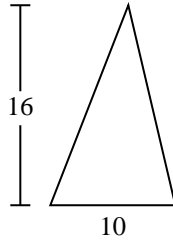
2)



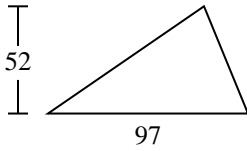
3)



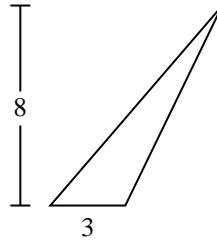
4)



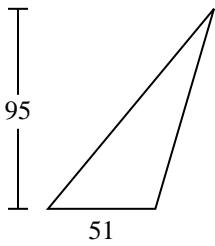
5)



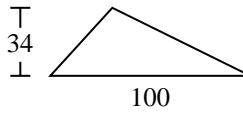
6)



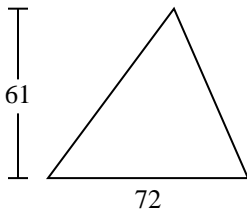
7)



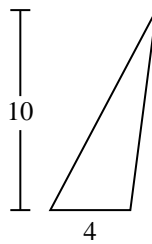
8)



9)



10)



Answers

1. 4

2. 133

3. 1,411

4. 80

5. 2,522

6. 12

7. 2,422.5

8. 1,700

9. 2,196

10. 20



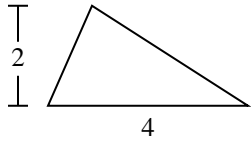
Find the area of the triangle. Round your answer to the nearest 10th.

133	4	1,411	2,522	2,196
1,700	2,422.5	80	12	

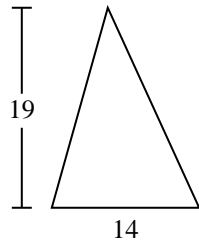
Answers

1. _____
2. _____
3. _____
4. _____
5. _____
6. _____
7. _____
8. _____
9. _____

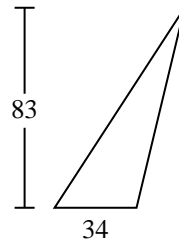
1)



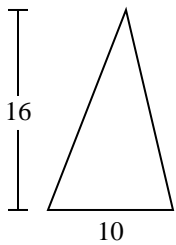
2)



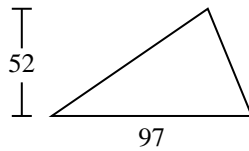
3)



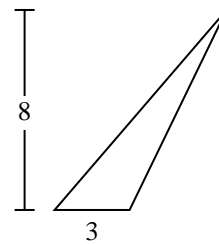
4)



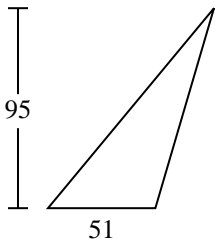
5)



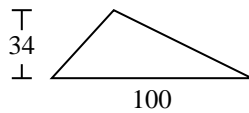
6)



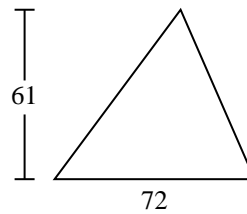
7)



8)

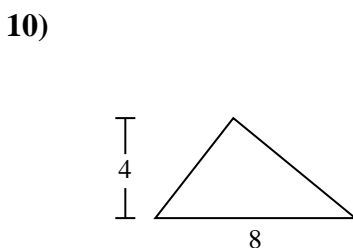
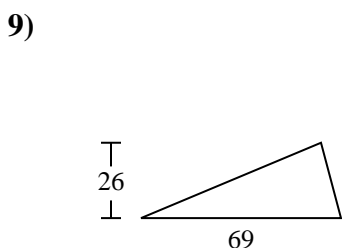
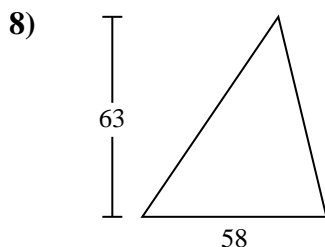
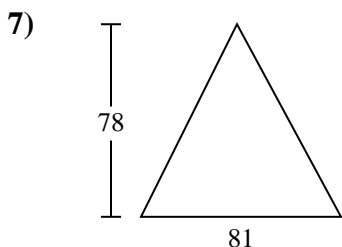
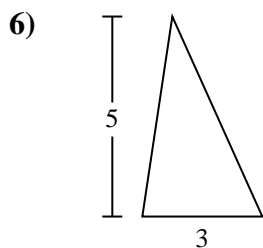
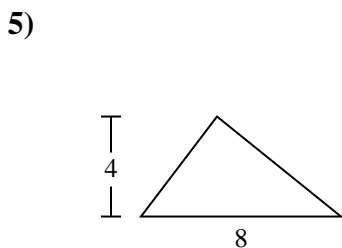
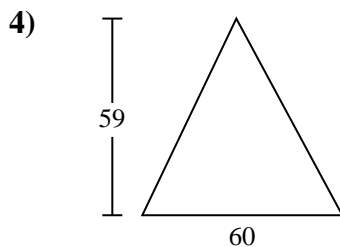
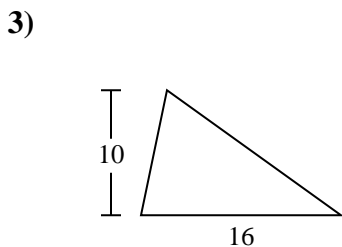
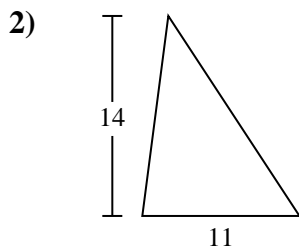
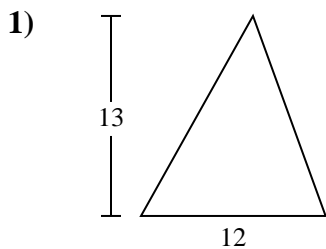


9)





Find the area of the triangle. Round your answer to the nearest 10th.

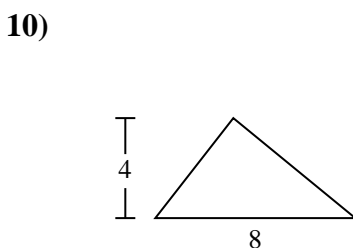
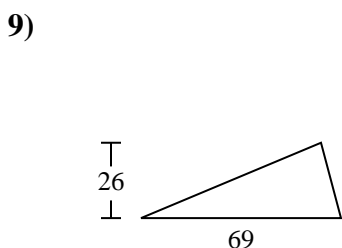
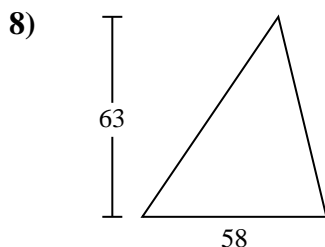
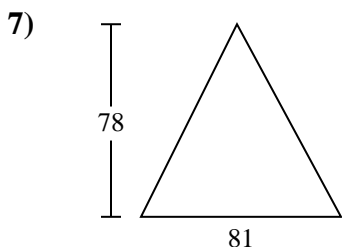
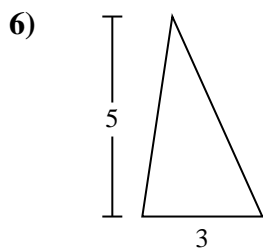
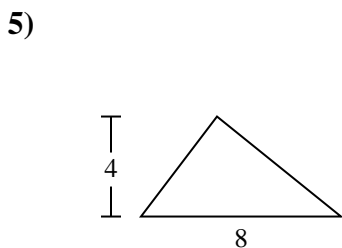
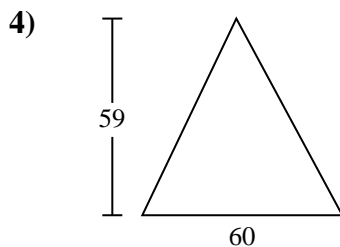
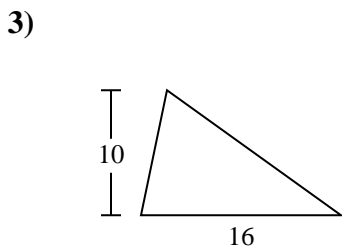
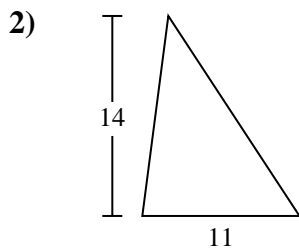
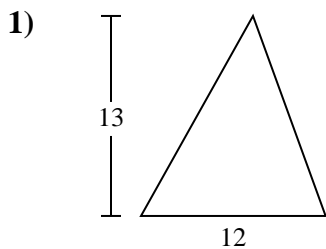


Answers

- 1. _____
- 2. _____
- 3. _____
- 4. _____
- 5. _____
- 6. _____
- 7. _____
- 8. _____
- 9. _____
- 10. _____



Find the area of the triangle. Round your answer to the nearest 10th.



Answers

1. 78

2. 77

3. 80

4. 1,770

5. 16

6. 7.5

7. 3,159

8. 1,827

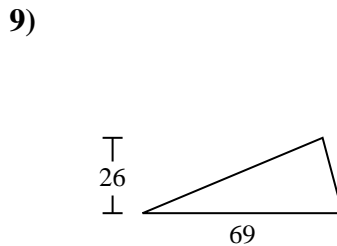
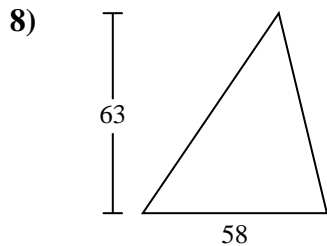
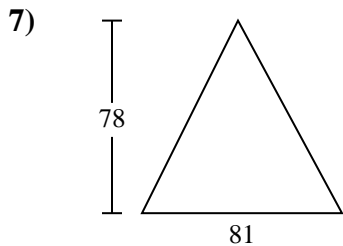
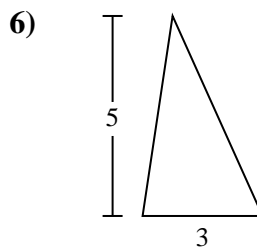
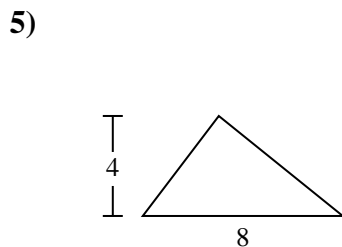
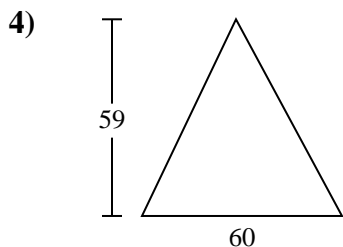
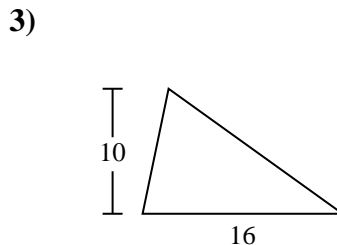
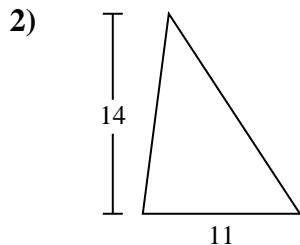
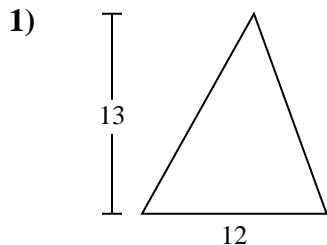
9. 897

10. 16



Find the area of the triangle. Round your answer to the nearest 10th.

1,827	1,770	7.5	78	3,159
80	77	897	16	



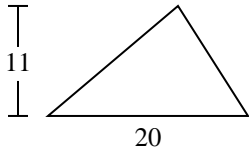
Answers

1. _____
2. _____
3. _____
4. _____
5. _____
6. _____
7. _____
8. _____
9. _____

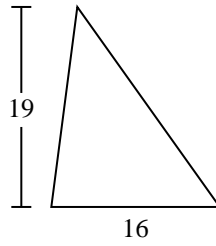


Find the area of the triangle. Round your answer to the nearest 10th.

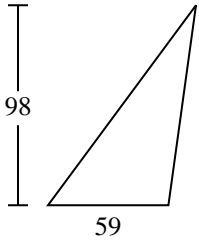
1)



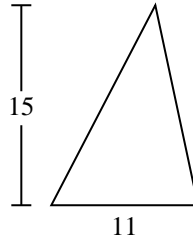
2)



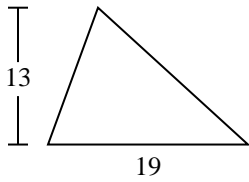
3)



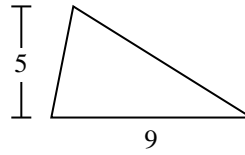
4)



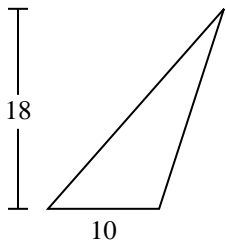
5)



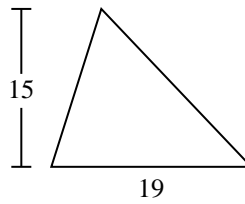
6)



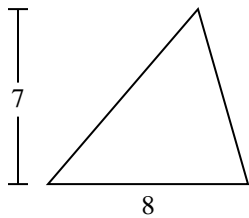
7)



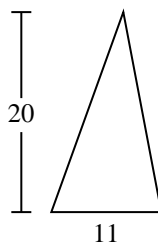
8)



9)



10)



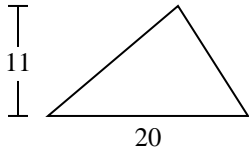
Answers

- 1. _____
- 2. _____
- 3. _____
- 4. _____
- 5. _____
- 6. _____
- 7. _____
- 8. _____
- 9. _____
- 10. _____

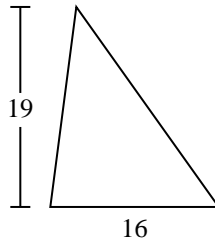


Find the area of the triangle. Round your answer to the nearest 10th.

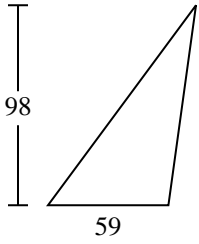
1)



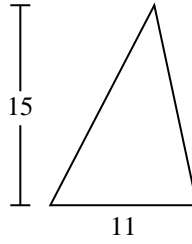
2)



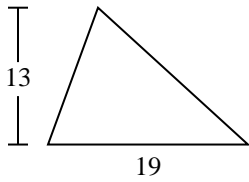
3)



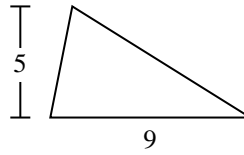
4)



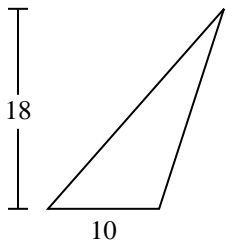
5)



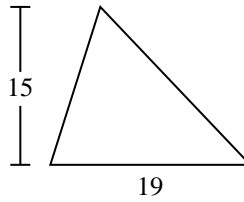
6)



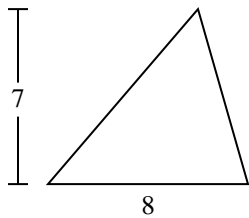
7)



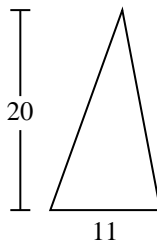
8)



9)



10)



Answers

1. 110

2. 152

3. 2,891

4. 82.5

5. 123.5

6. 22.5

7. 90

8. 142.5

9. 28

10. 110

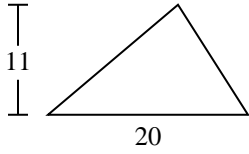


Find the area of the triangle. Round your answer to the nearest 10th.

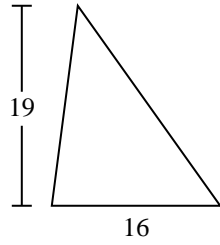
22.5	152	28	90	142.5
123.5	2,891	82.5	110	

Answers

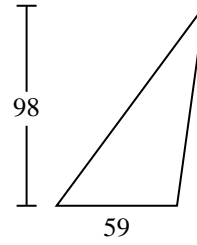
1)



2)



3)



1. _____

2. _____

3. _____

4. _____

5. _____

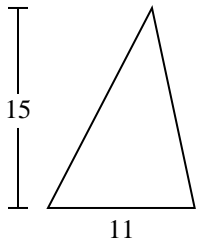
6. _____

7. _____

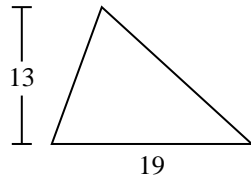
8. _____

9. _____

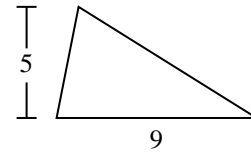
4)



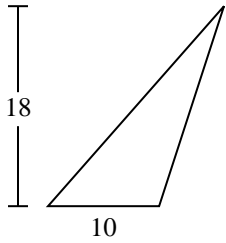
5)



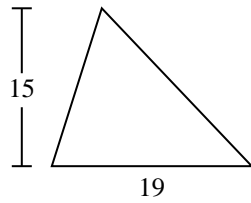
6)



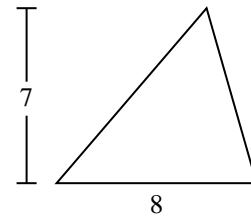
7)



8)



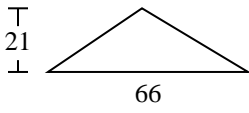
9)



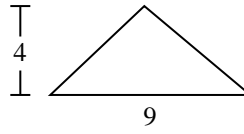


Find the area of the triangle. Round your answer to the nearest 10th.

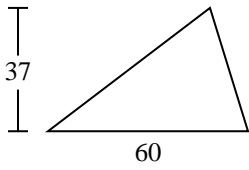
1)



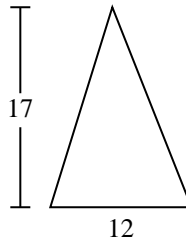
2)



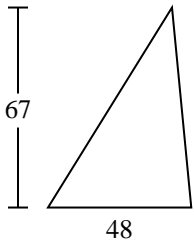
3)



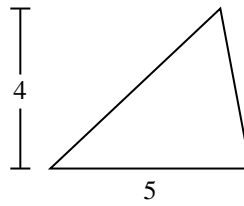
4)



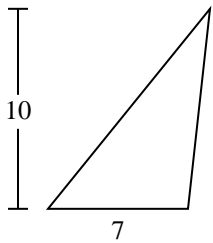
5)



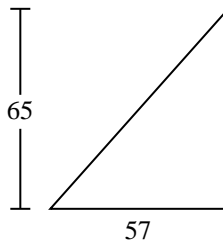
6)



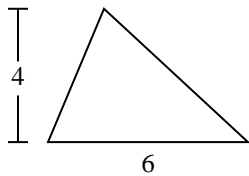
7)



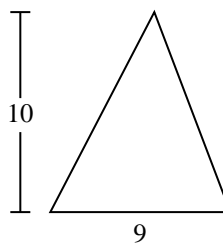
8)



9)



10)



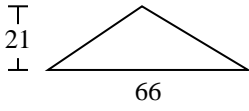
Answers

- 1. _____
- 2. _____
- 3. _____
- 4. _____
- 5. _____
- 6. _____
- 7. _____
- 8. _____
- 9. _____
- 10. _____

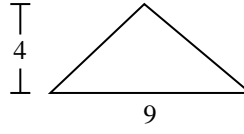


Find the area of the triangle. Round your answer to the nearest 10th.

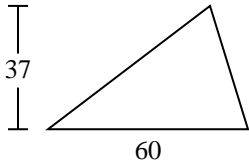
1)



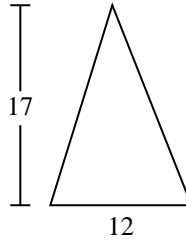
2)



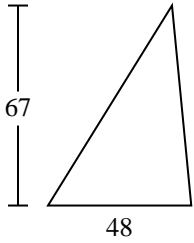
3)



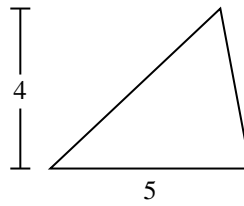
4)



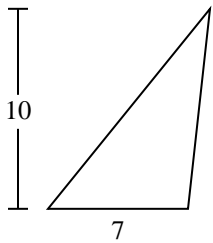
5)



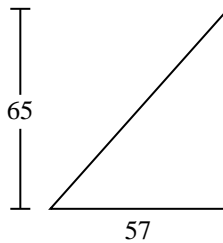
6)



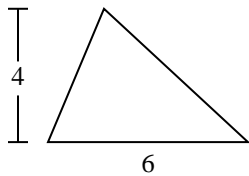
7)



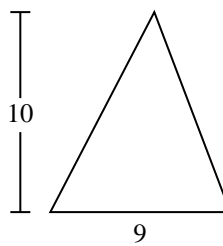
8)



9)



10)



Answers

1. 693

2. 18

3. 1,110

4. 102

5. 1,608

6. 10

7. 35

8. 1,852.5

9. 12

10. 45



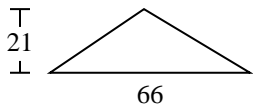
Find the area of the triangle. Round your answer to the nearest 10th.

1,110	693	102	1,852.5	10
18	12	1,608	35	

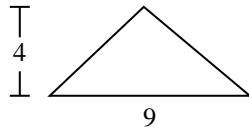
Answers

1. _____
2. _____
3. _____
4. _____
5. _____
6. _____
7. _____
8. _____
9. _____

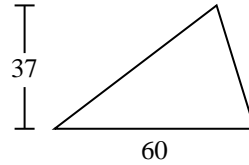
1)



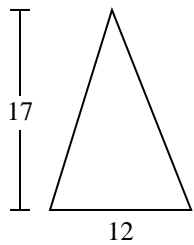
2)



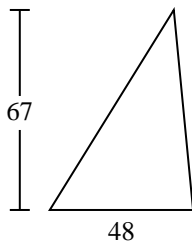
3)



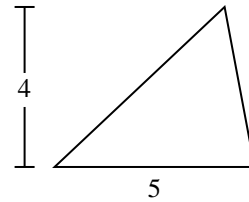
4)



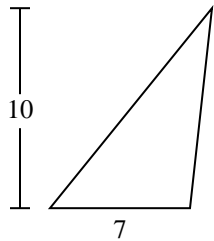
5)



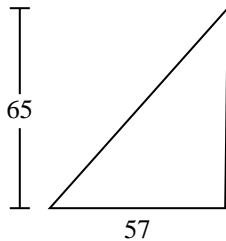
6)



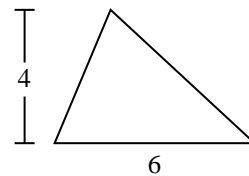
7)



8)

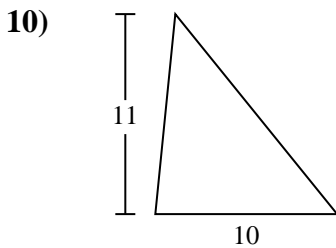
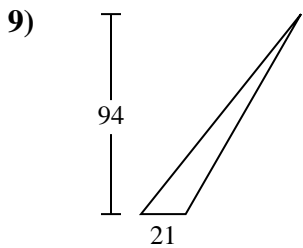
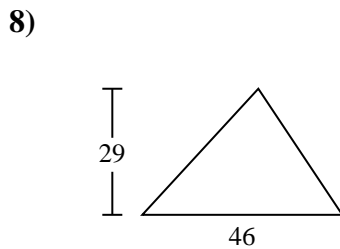
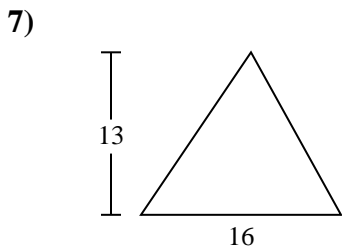
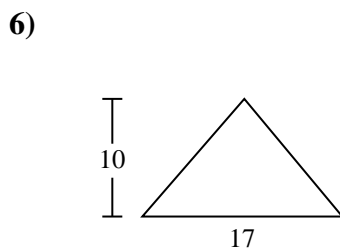
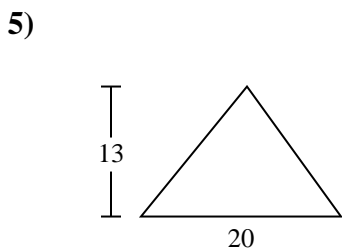
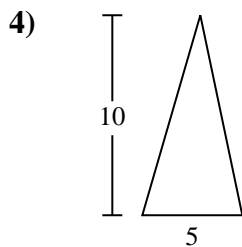
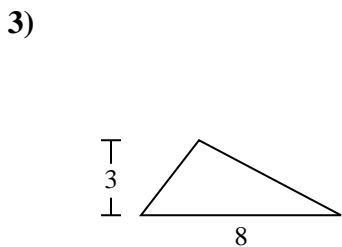
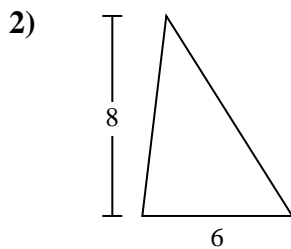
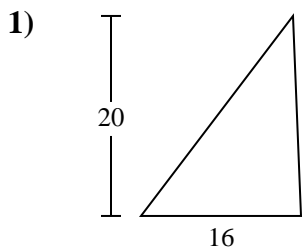


9)





Find the area of the triangle. Round your answer to the nearest 10th.

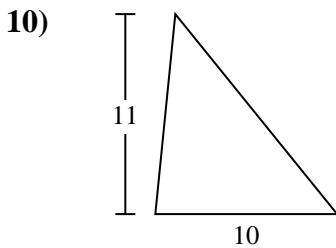
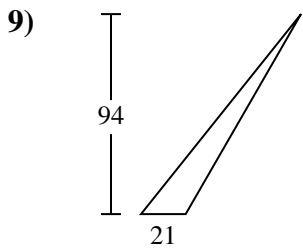
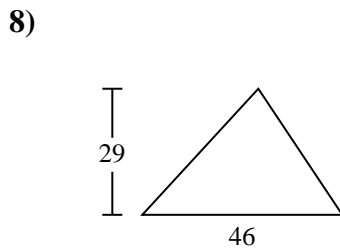
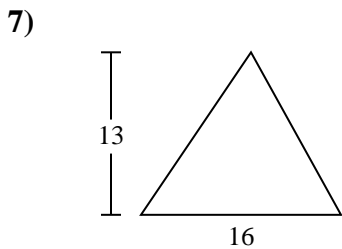
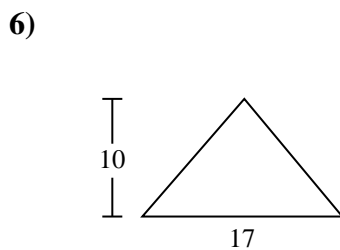
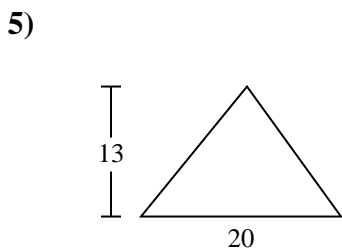
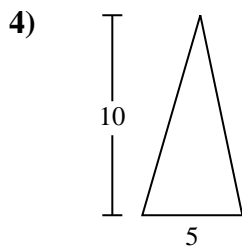
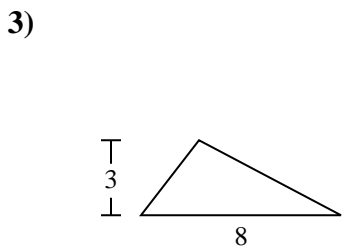
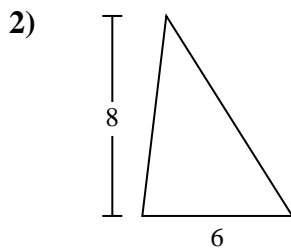
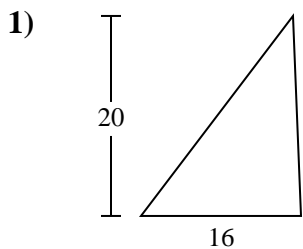


Answers

- 1. _____
- 2. _____
- 3. _____
- 4. _____
- 5. _____
- 6. _____
- 7. _____
- 8. _____
- 9. _____
- 10. _____



Find the area of the triangle. Round your answer to the nearest 10th.



Answers

1. 160

2. 24

3. 12

4. 25

5. 130

6. 85

7. 104

8. 667

9. 987

10. 55

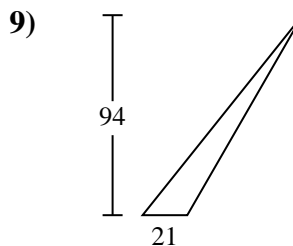
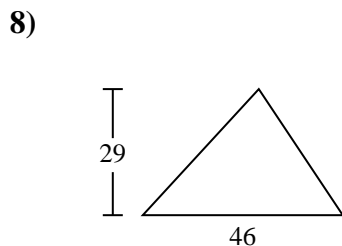
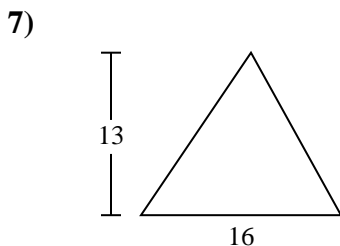
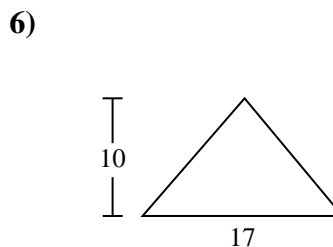
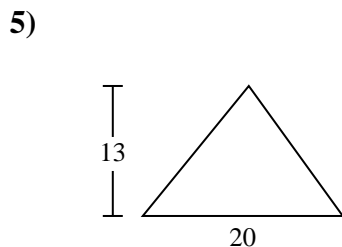
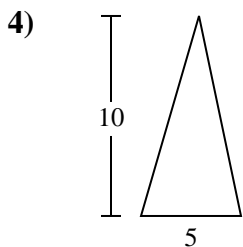
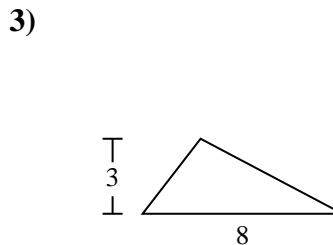
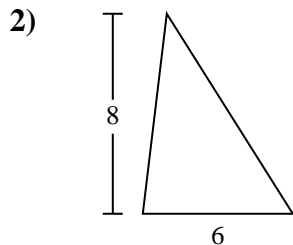
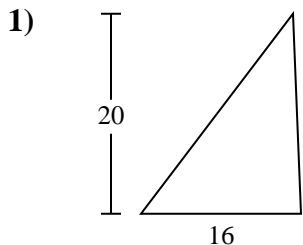


Find the area of the triangle. Round your answer to the nearest 10th.

25	160	85	24	667
987	104	12	130	

Answers

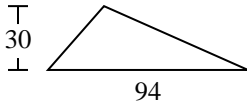
1. _____
2. _____
3. _____
4. _____
5. _____
6. _____
7. _____
8. _____
9. _____



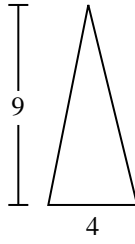


Find the area of the triangle. Round your answer to the nearest 10th.

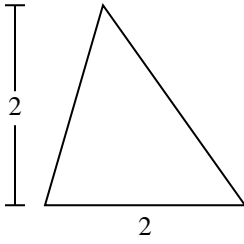
1)



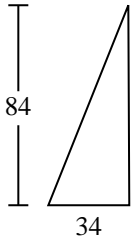
2)



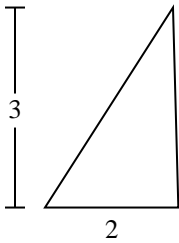
3)



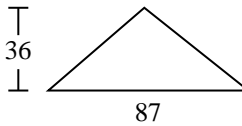
4)



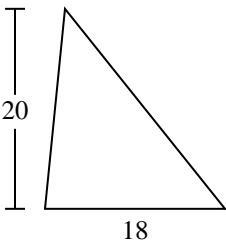
5)



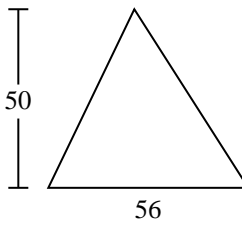
6)



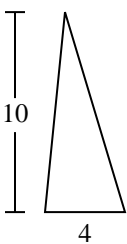
7)



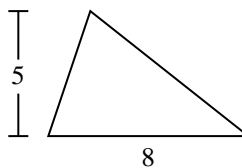
8)



9)



10)



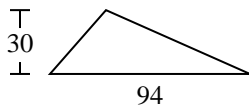
Answers

1. _____
2. _____
3. _____
4. _____
5. _____
6. _____
7. _____
8. _____
9. _____
10. _____

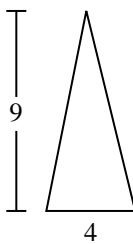


Find the area of the triangle. Round your answer to the nearest 10th.

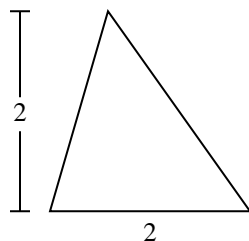
1)



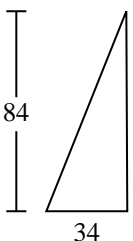
2)



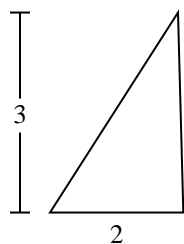
3)



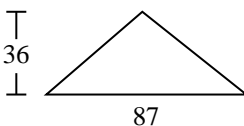
4)



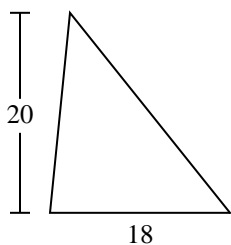
5)



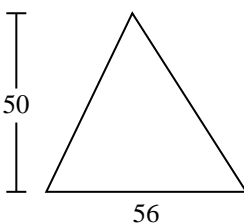
6)



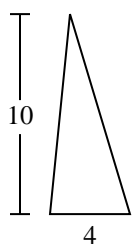
7)



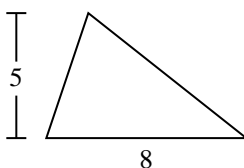
8)



9)



10)

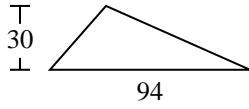
Answers1. 1,4102. 183. 24. 1,4285. 36. 1,5667. 1808. 1,4009. 2010. 20



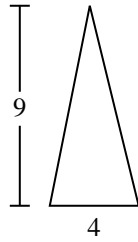
Find the area of the triangle. Round your answer to the nearest 10th.

180	1,428	18	1,566	1,400
3	2	20	1,410	

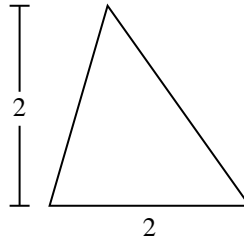
1)



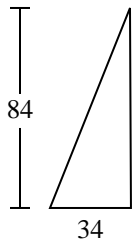
2)



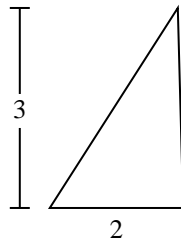
3)



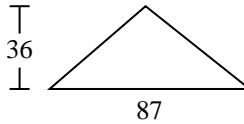
4)



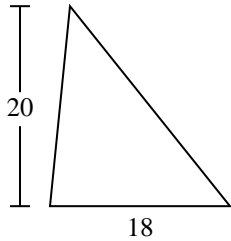
5)



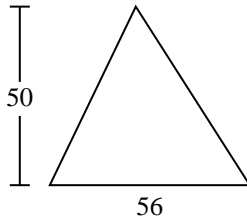
6)



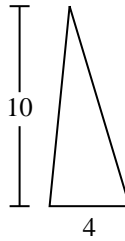
7)



8)



9)



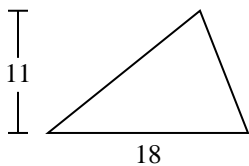
Answers

1. _____
2. _____
3. _____
4. _____
5. _____
6. _____
7. _____
8. _____
9. _____



Find the area of the triangle. Round your answer to the nearest 10th.

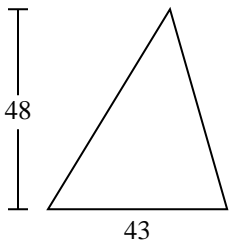
1)



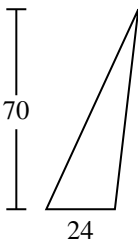
2)



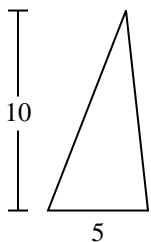
3)



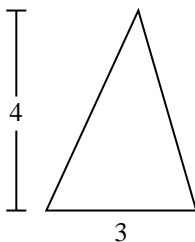
4)



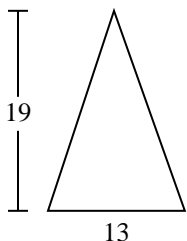
5)



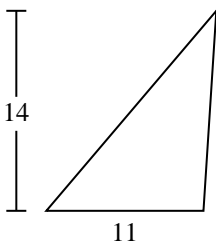
6)



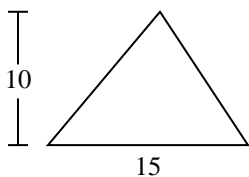
7)



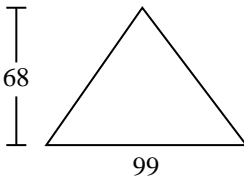
8)



9)



10)



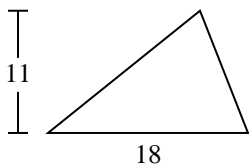
Answers

- 1. _____
- 2. _____
- 3. _____
- 4. _____
- 5. _____
- 6. _____
- 7. _____
- 8. _____
- 9. _____
- 10. _____



Find the area of the triangle. Round your answer to the nearest 10th.

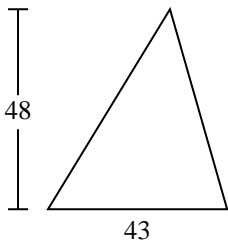
1)



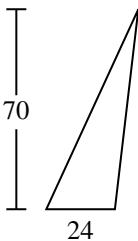
2)



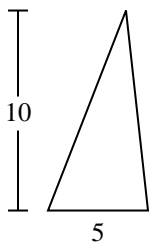
3)



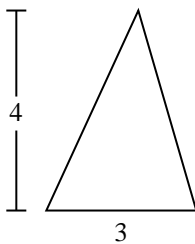
4)



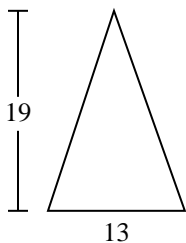
5)



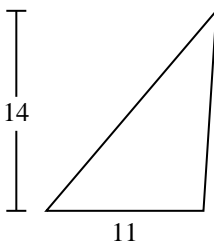
6)



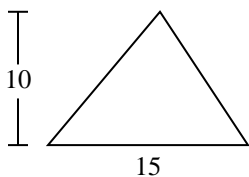
7)



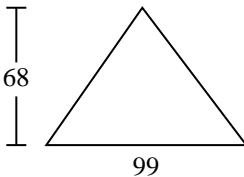
8)



9)



10)



Answers

1. 99

2. 7

3. 1,032

4. 840

5. 25

6. 6

7. 123.5

8. 77

9. 75

10. 3,366

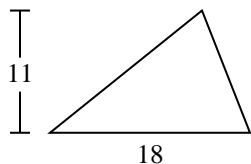


Find the area of the triangle. Round your answer to the nearest 10th.

77	6	99	1,032	25
840	75	123.5	7	

Answers

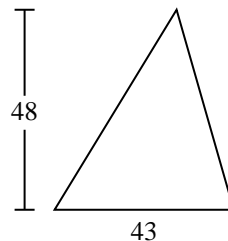
1)



2)



3)



1. _____

2. _____

3. _____

4. _____

5. _____

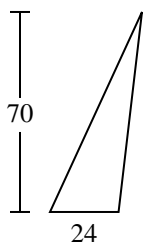
6. _____

7. _____

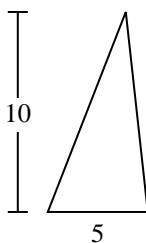
8. _____

9. _____

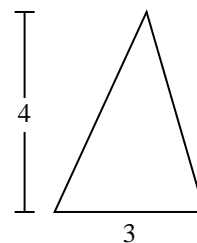
4)



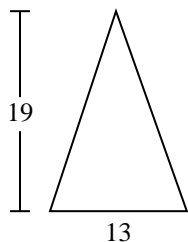
5)



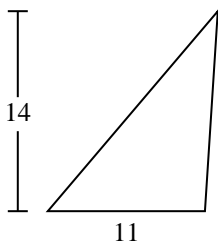
6)



7)



8)



9)

