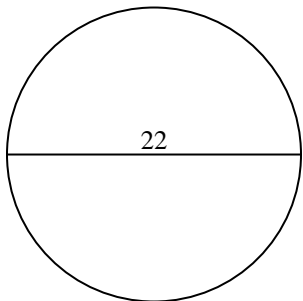


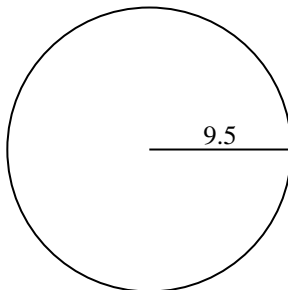


Find the area and circumference of the circle. Circles are not to scale. Round to the nearest 10th.

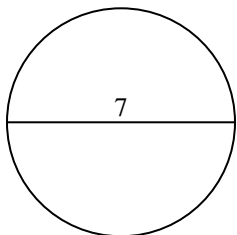
1)



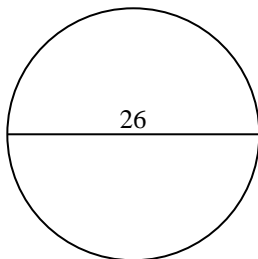
2)



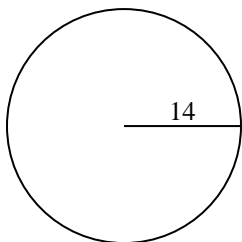
3)



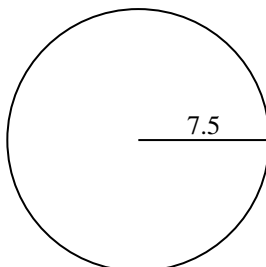
4)



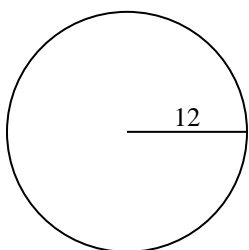
5)



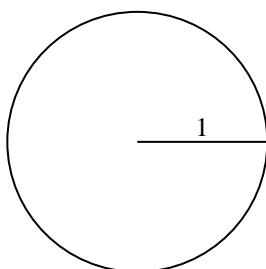
6)



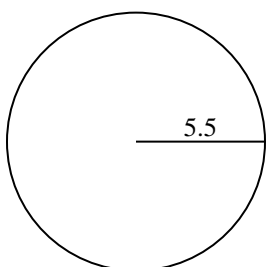
7)



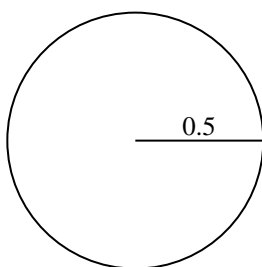
8)



9)



10)

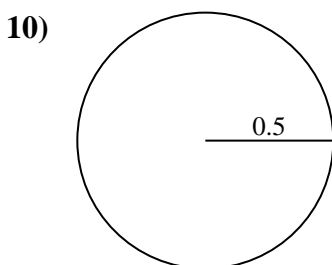
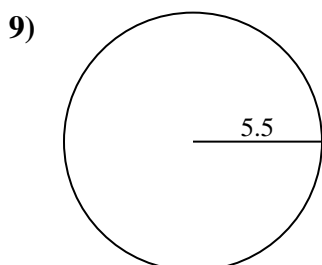
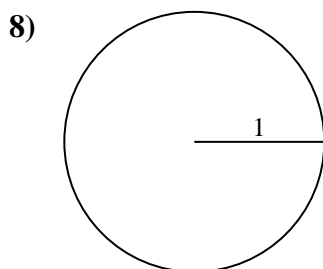
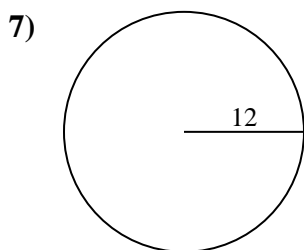
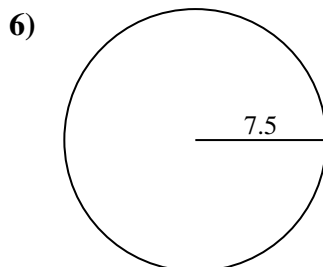
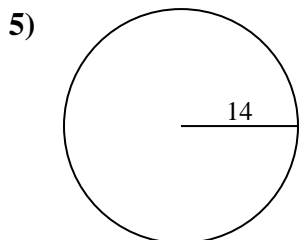
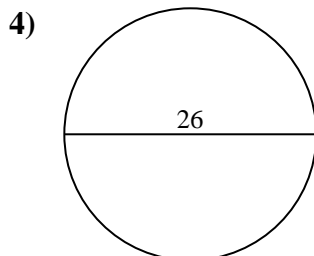
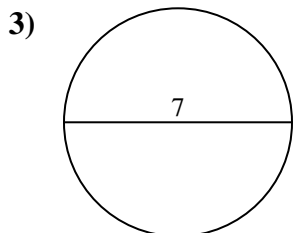
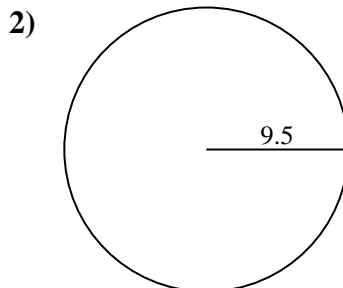
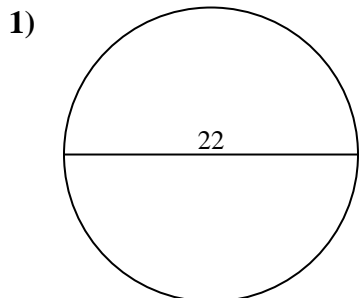


Answers

- 1. _____
- 2. _____
- 3. _____
- 4. _____
- 5. _____
- 6. _____
- 7. _____
- 8. _____
- 9. _____
- 10. _____



Find the area and circumference of the circle. Circles are not to scale. Round to the nearest 10th.



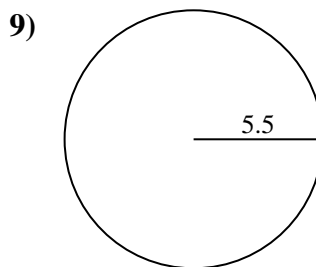
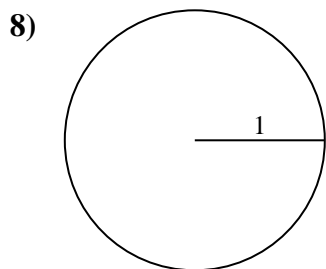
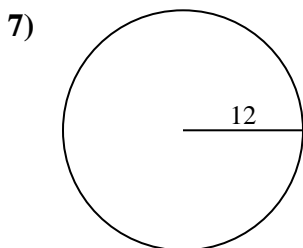
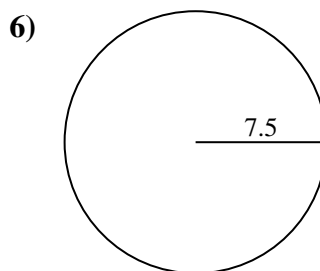
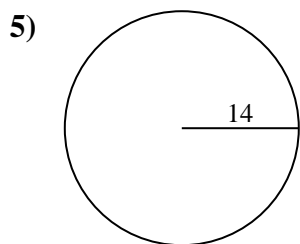
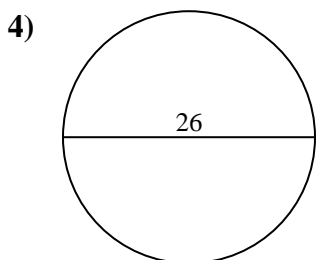
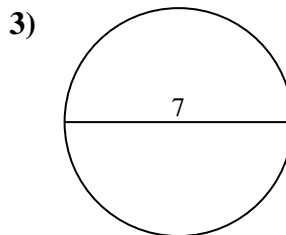
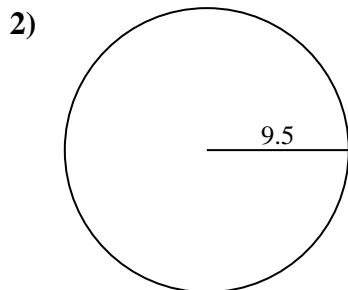
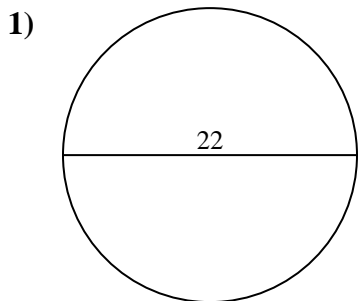
Answers

1.	<u>380.1</u>	<u>69.1</u>
2.	<u>283.5</u>	<u>59.7</u>
3.	<u>38.5</u>	<u>22</u>
4.	<u>530.9</u>	<u>81.7</u>
5.	<u>615.8</u>	<u>88</u>
6.	<u>176.7</u>	<u>47.1</u>
7.	<u>452.4</u>	<u>75.4</u>
8.	<u>3.1</u>	<u>6.3</u>
9.	<u>95</u>	<u>34.6</u>
10.	<u>0.8</u>	<u>3.1</u>



Find the area and circumference of the circle. Circles are not to scale. Round to the nearest 10th.

95	34.6	283.5	380.1	530.9
75.4	59.7	615.8	452.4	6.3
81.7	3.1	47.1	22	176.7
69.1	38.5	88		



Answers

1. _____
2. _____
3. _____
4. _____
5. _____
6. _____
7. _____
8. _____
9. _____