



Solve each problem.



- 1) fine knob _____
- 2) stage _____
- 3) base _____
- 4) course knob _____
- 5) eye piece _____
- 6) lens _____
- 7) illuminator _____

Answers

- 1. _____
- 2. _____
- 3. _____
- 4. _____
- 5. _____
- 6. _____
- 7. _____



Solve each problem.



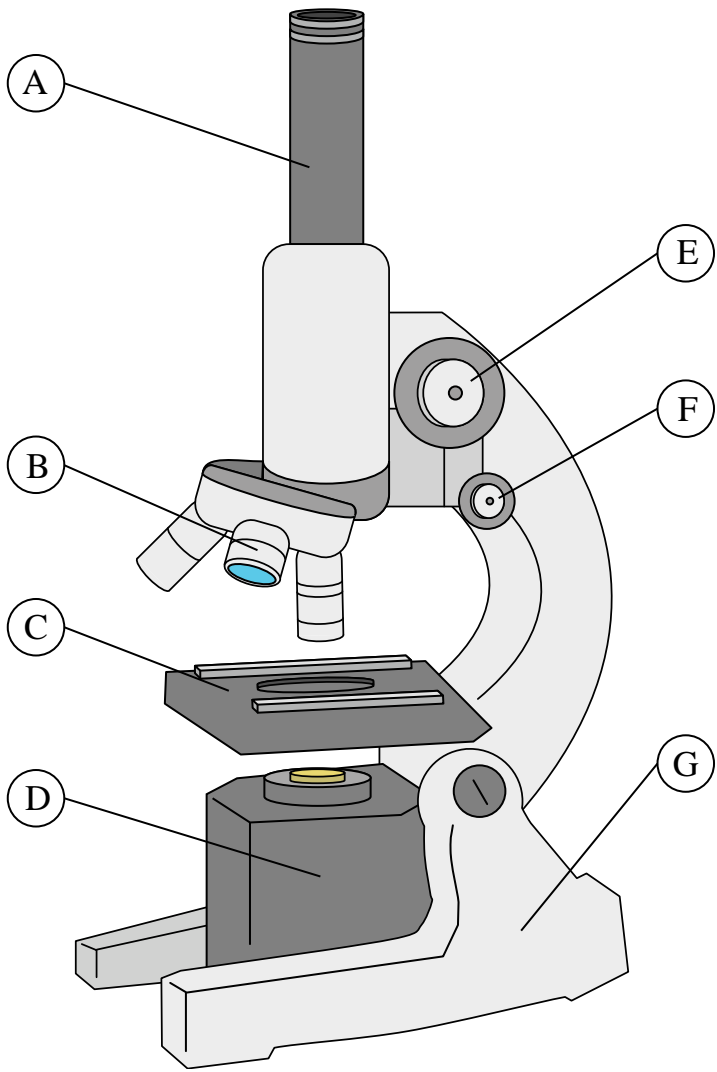
- 1) fine knob F
- 2) stage C
- 3) base G
- 4) course knob E
- 5) eye piece A
- 6) lens B
- 7) illuminator D

Answers

- 1. **F**
- 2. **C**
- 3. **G**
- 4. **E**
- 5. **A**
- 6. **B**
- 7. **D**



Solve each problem.



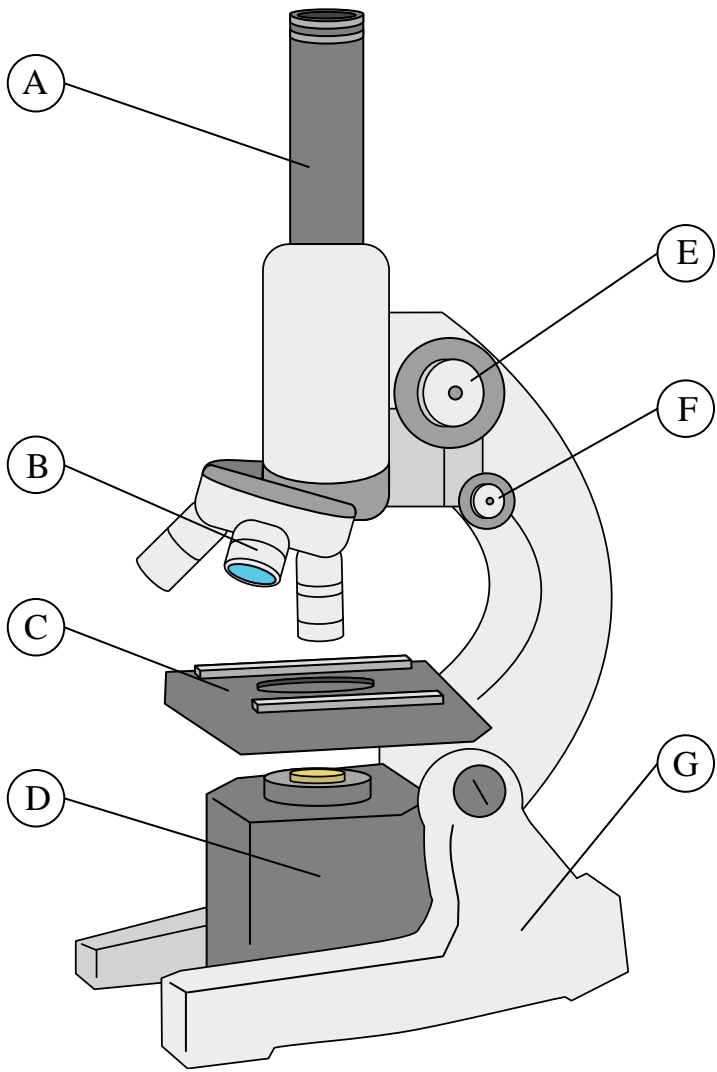
- 1) stage _____
- 2) lens _____
- 3) fine knob _____
- 4) base _____
- 5) course knob _____
- 6) eye piece _____
- 7) illuminator _____

Answers

- 1. _____
- 2. _____
- 3. _____
- 4. _____
- 5. _____
- 6. _____
- 7. _____



Solve each problem.



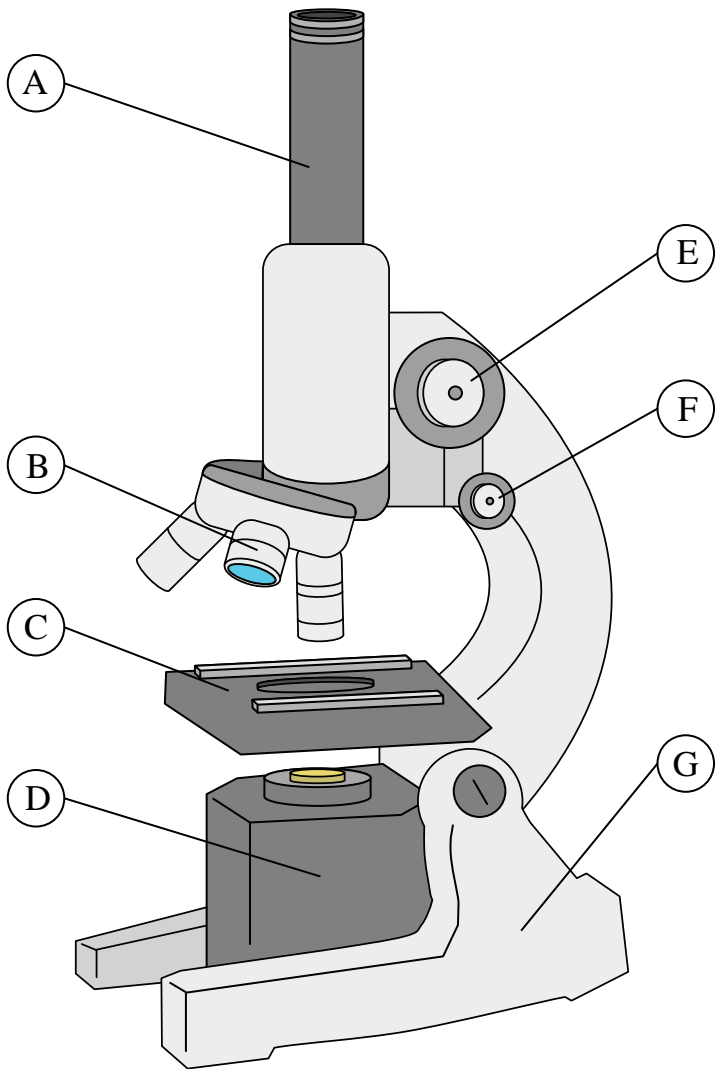
- 1) stage C
- 2) lens B
- 3) fine knob F
- 4) base G
- 5) course knob E
- 6) eye piece A
- 7) illuminator D

Answers

- 1. C
- 2. B
- 3. F
- 4. G
- 5. E
- 6. A
- 7. D



Solve each problem.



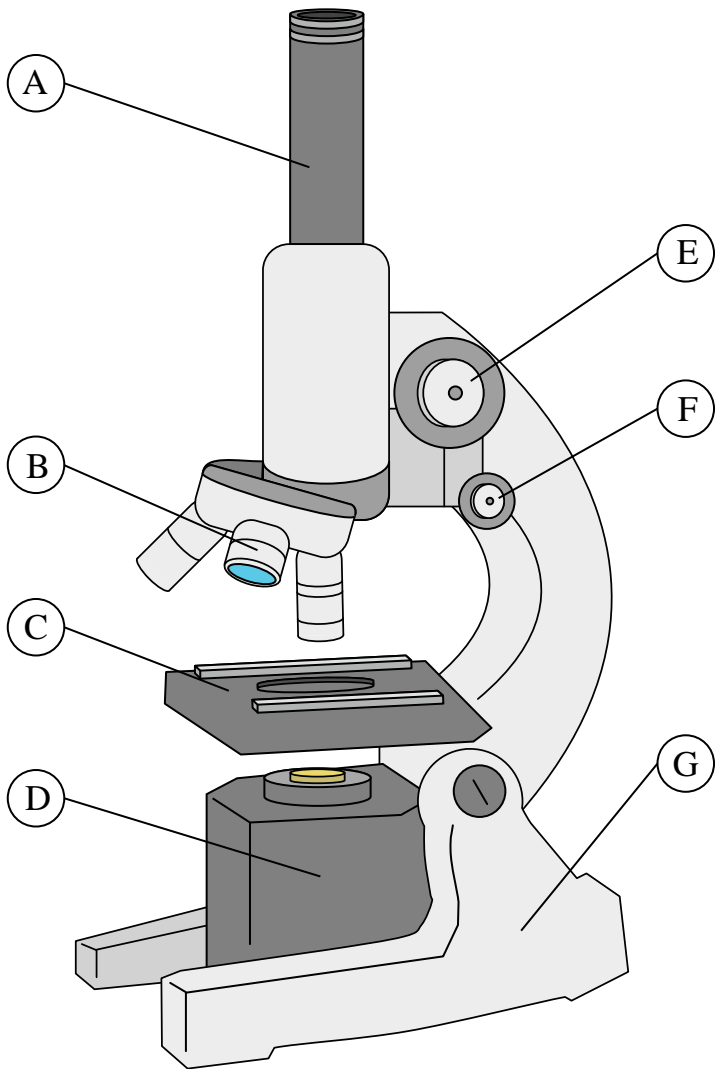
- 1) eye piece _____
- 2) stage _____
- 3) course knob _____
- 4) lens _____
- 5) fine knob _____
- 6) illuminator _____
- 7) base _____

Answers

- 1. _____
- 2. _____
- 3. _____
- 4. _____
- 5. _____
- 6. _____
- 7. _____



Solve each problem.



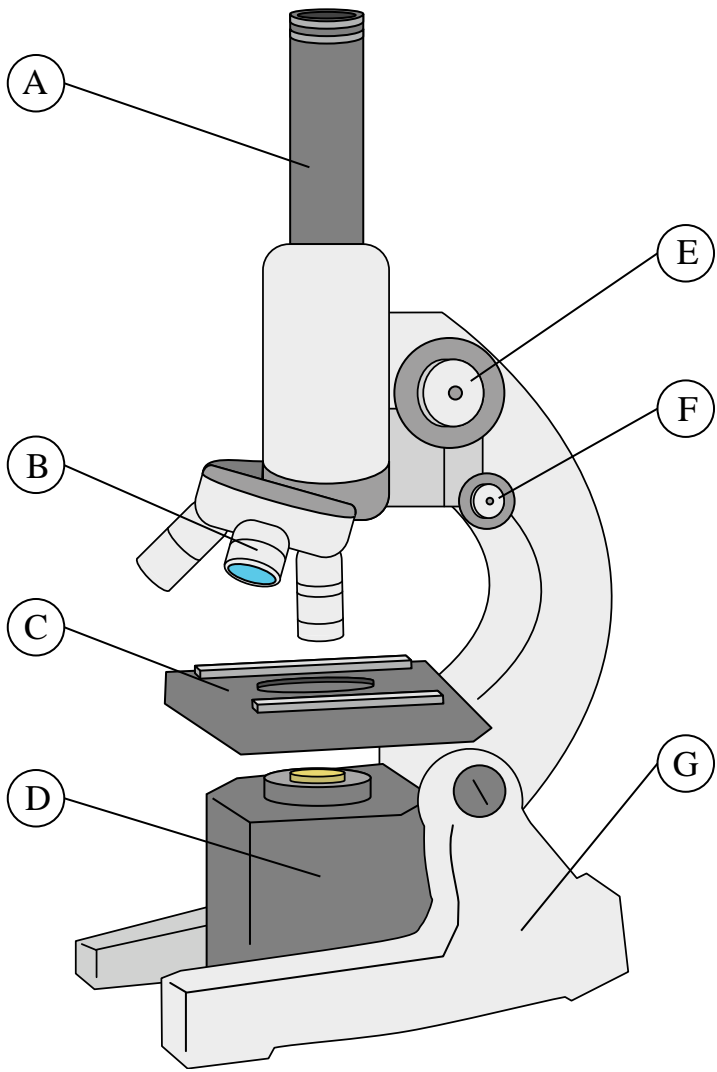
- 1) eye piece **A**
- 2) stage **C**
- 3) course knob **E**
- 4) lens **B**
- 5) fine knob **F**
- 6) illuminator **D**
- 7) base **G**

Answers

- 1. **A**
- 2. **C**
- 3. **E**
- 4. **B**
- 5. **F**
- 6. **D**
- 7. **G**



Solve each problem.



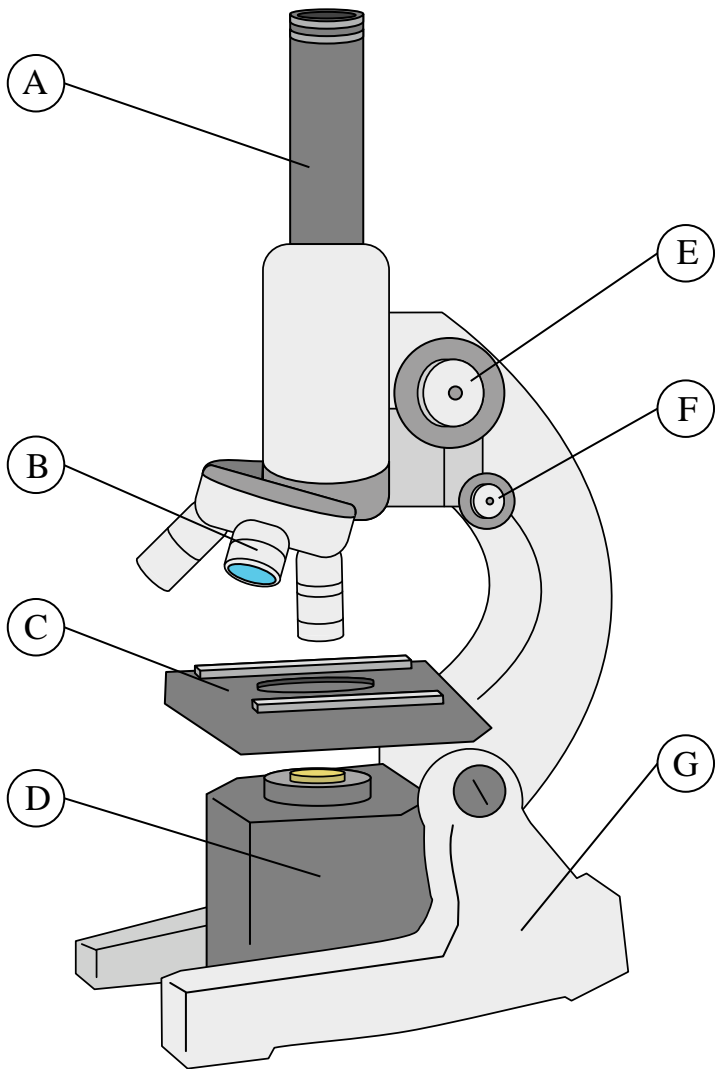
- 1) fine knob _____
- 2) course knob _____
- 3) stage _____
- 4) base _____
- 5) eye piece _____
- 6) illuminator _____
- 7) lens _____

Answers

- 1. _____
- 2. _____
- 3. _____
- 4. _____
- 5. _____
- 6. _____
- 7. _____



Solve each problem.



- 1) fine knob **F**
- 2) course knob **E**
- 3) stage **C**
- 4) base **G**
- 5) eye piece **A**
- 6) illuminator **D**
- 7) lens **B**

Answers

- 1. **F**
- 2. **E**
- 3. **C**
- 4. **G**
- 5. **A**
- 6. **D**
- 7. **B**



Solve each problem.



- 1) illuminator _____
- 2) lens _____
- 3) fine knob _____
- 4) course knob _____
- 5) eye piece _____
- 6) base _____
- 7) stage _____

Answers

- 1. _____
- 2. _____
- 3. _____
- 4. _____
- 5. _____
- 6. _____
- 7. _____



Solve each problem.



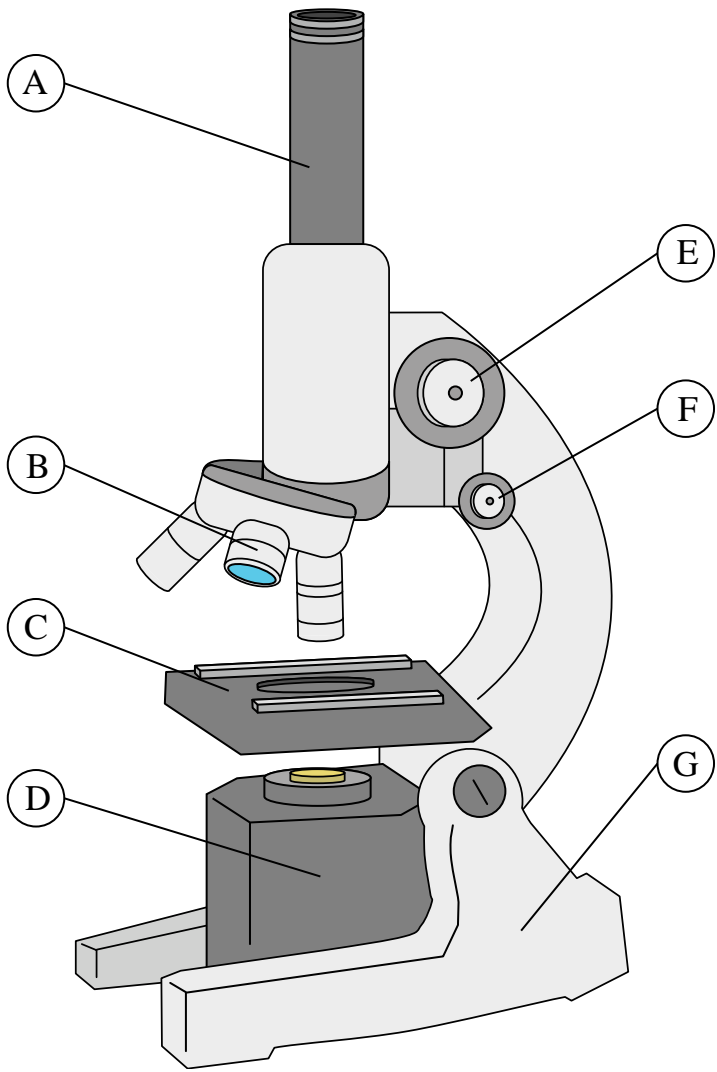
- 1) illuminator D
- 2) lens B
- 3) fine knob F
- 4) course knob E
- 5) eye piece A
- 6) base G
- 7) stage C

Answers

- 1. D
- 2. B
- 3. F
- 4. E
- 5. A
- 6. G
- 7. C



Solve each problem.



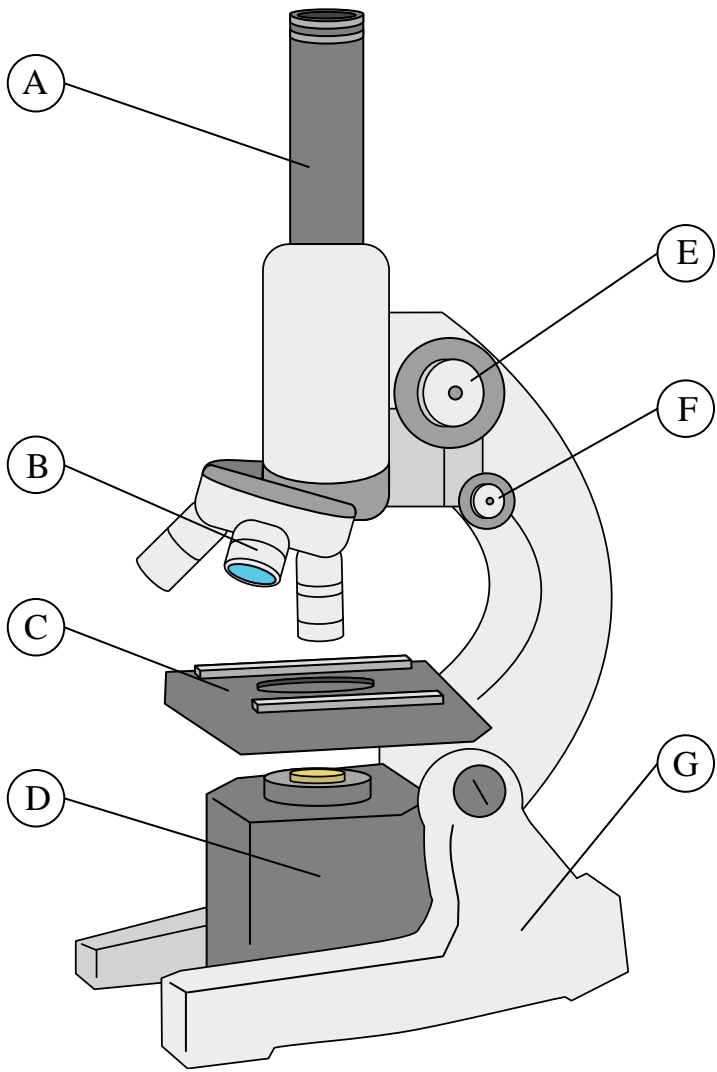
- 1) eye piece _____
- 2) lens _____
- 3) fine knob _____
- 4) stage _____
- 5) illuminator _____
- 6) base _____
- 7) course knob _____

Answers

- 1. _____
- 2. _____
- 3. _____
- 4. _____
- 5. _____
- 6. _____
- 7. _____



Solve each problem.



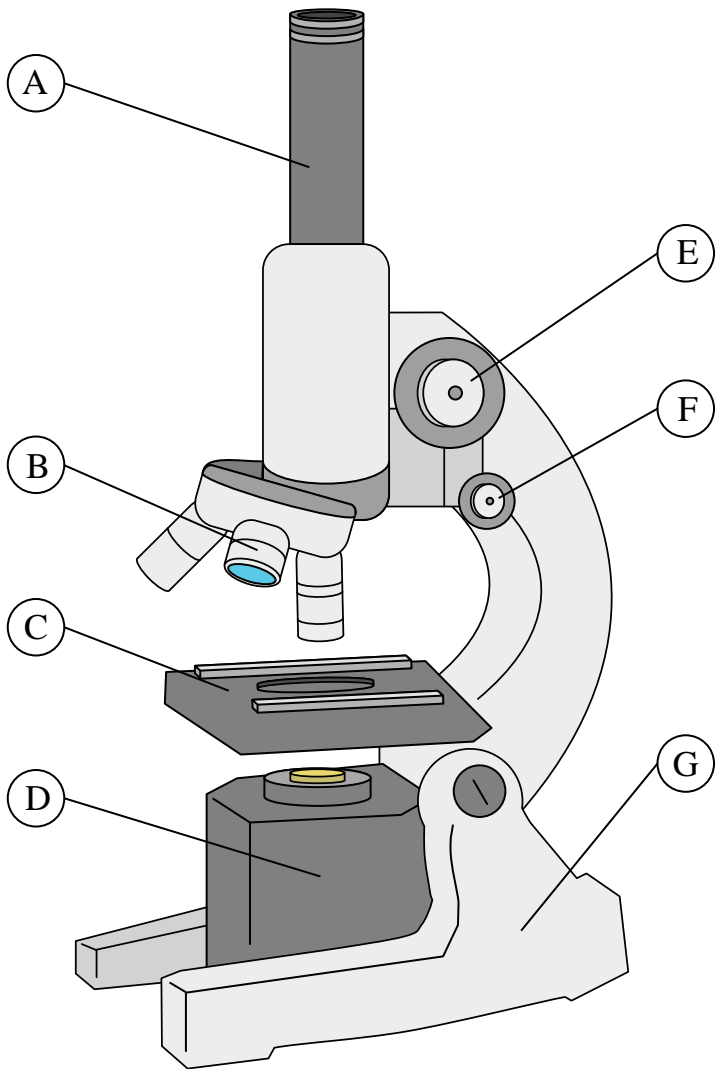
- 1) eye piece **A**
- 2) lens **B**
- 3) fine knob **F**
- 4) stage **C**
- 5) illuminator **D**
- 6) base **G**
- 7) course knob **E**

Answers

- 1. **A**
- 2. **B**
- 3. **F**
- 4. **C**
- 5. **D**
- 6. **G**
- 7. **E**



Solve each problem.



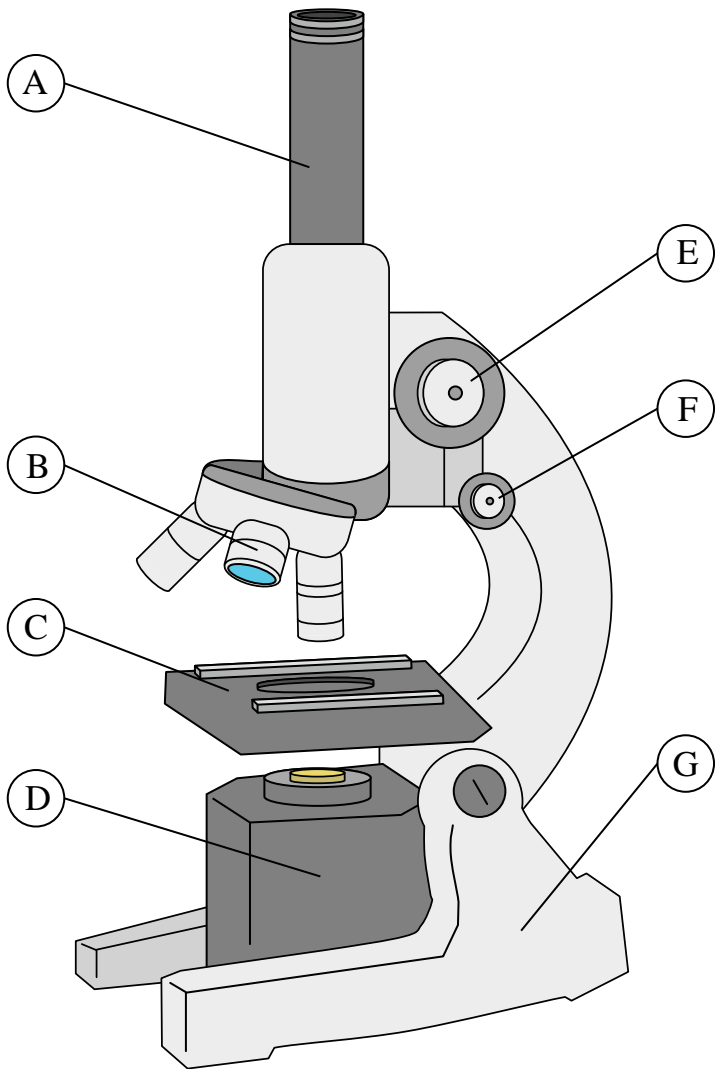
- 1) fine knob _____
- 2) eye piece _____
- 3) lens _____
- 4) illuminator _____
- 5) course knob _____
- 6) stage _____
- 7) base _____

Answers

- 1. _____
- 2. _____
- 3. _____
- 4. _____
- 5. _____
- 6. _____
- 7. _____



Solve each problem.



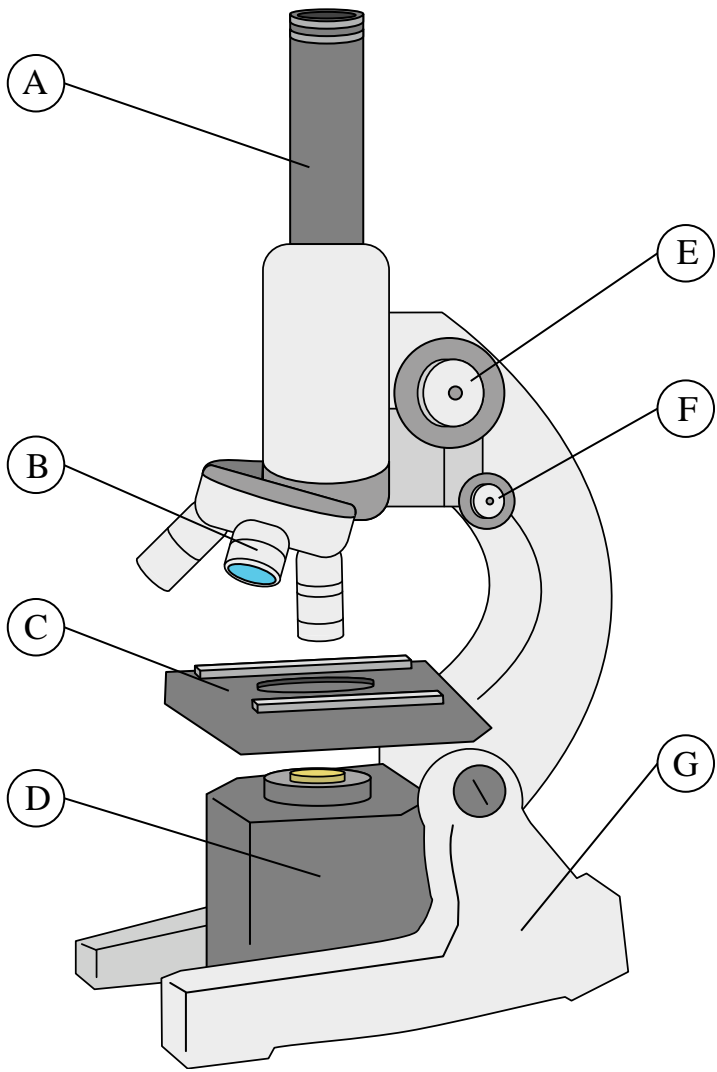
- 1) fine knob **F**
- 2) eye piece **A**
- 3) lens **B**
- 4) illuminator **D**
- 5) course knob **E**
- 6) stage **C**
- 7) base **G**

Answers

- 1. **F**
- 2. **A**
- 3. **B**
- 4. **D**
- 5. **E**
- 6. **C**
- 7. **G**



Solve each problem.



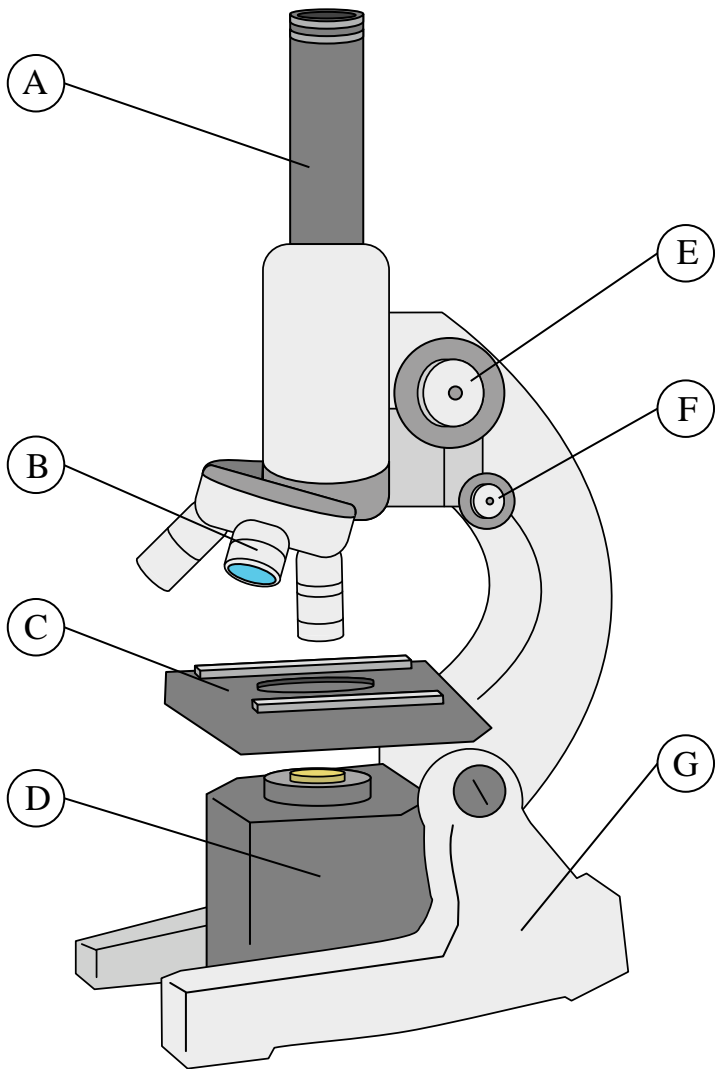
- 1) illuminator _____
- 2) lens _____
- 3) fine knob _____
- 4) eye piece _____
- 5) course knob _____
- 6) base _____
- 7) stage _____

Answers

- 1. _____
- 2. _____
- 3. _____
- 4. _____
- 5. _____
- 6. _____
- 7. _____



Solve each problem.



- 1) illuminator D
- 2) lens B
- 3) fine knob F
- 4) eye piece A
- 5) course knob E
- 6) base G
- 7) stage C

Answers

- 1. D
- 2. B
- 3. F
- 4. A
- 5. E
- 6. G
- 7. C



Solve each problem.



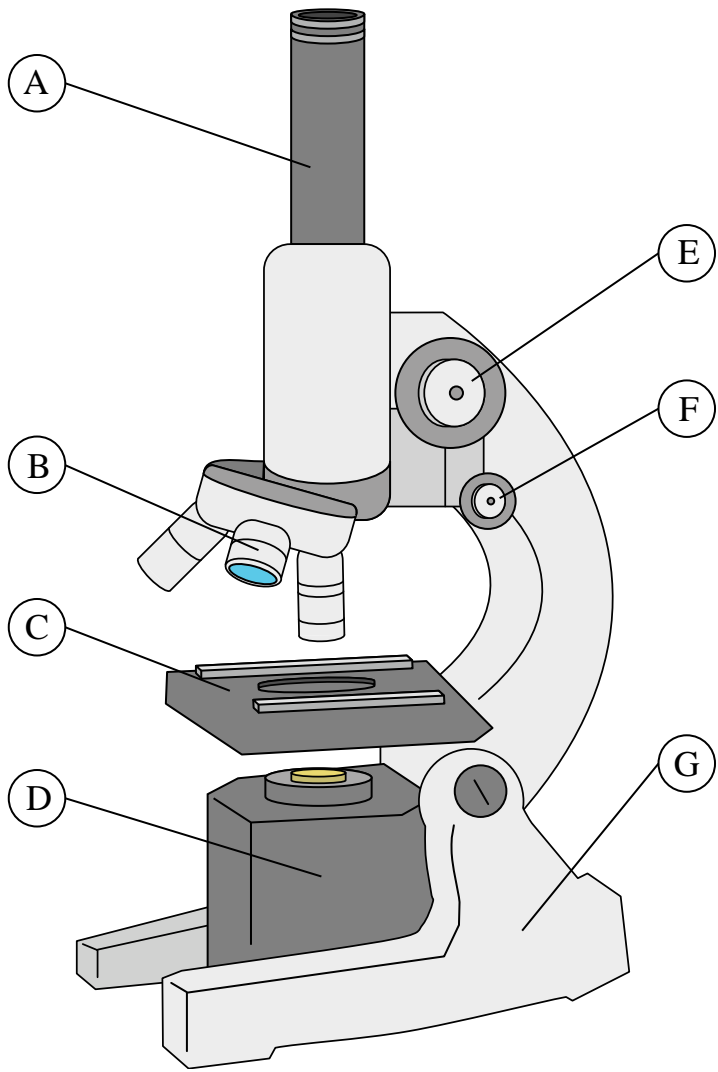
- 1) stage _____
- 2) eye piece _____
- 3) fine knob _____
- 4) base _____
- 5) lens _____
- 6) illuminator _____
- 7) course knob _____

Answers

- 1. _____
- 2. _____
- 3. _____
- 4. _____
- 5. _____
- 6. _____
- 7. _____



Solve each problem.



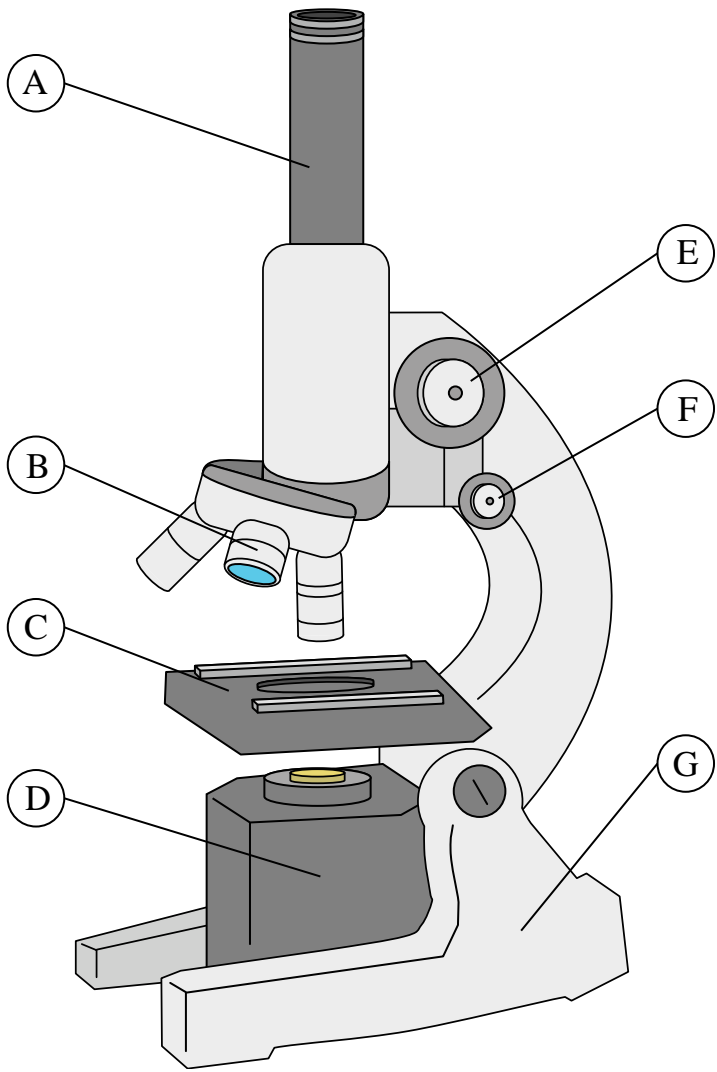
- 1) stage C
- 2) eye piece A
- 3) fine knob F
- 4) base G
- 5) lens B
- 6) illuminator D
- 7) course knob E

Answers

- 1. C
- 2. A
- 3. F
- 4. G
- 5. B
- 6. D
- 7. E



Solve each problem.



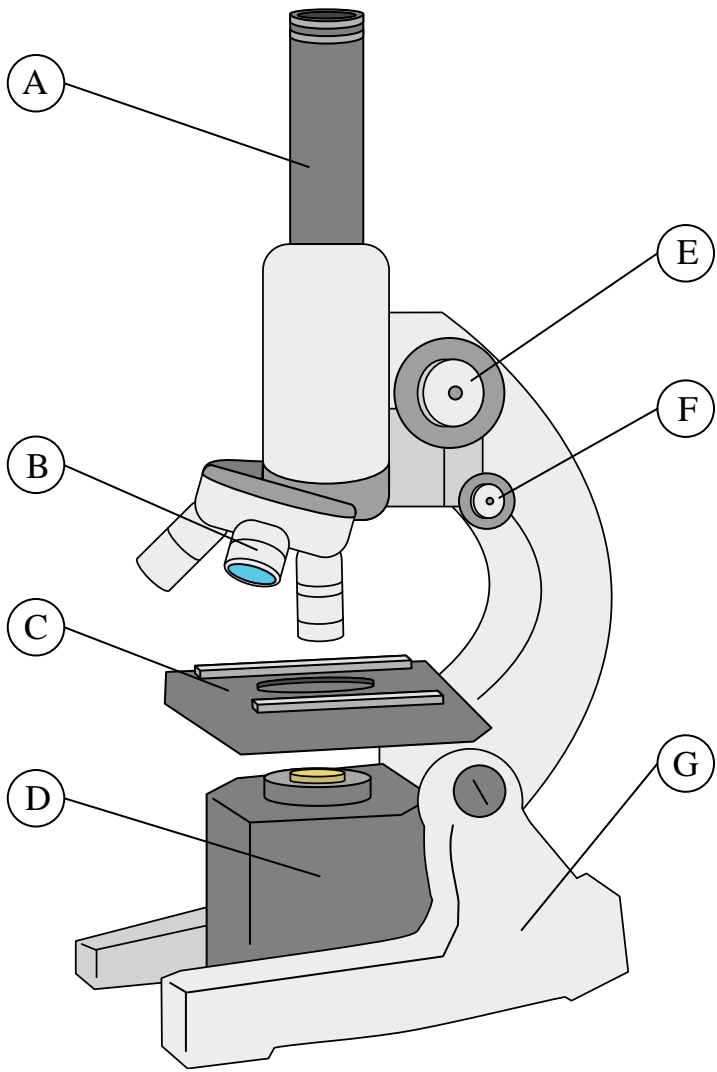
- 1) lens _____
- 2) stage _____
- 3) fine knob _____
- 4) base _____
- 5) eye piece _____
- 6) course knob _____
- 7) illuminator _____

Answers

- 1. _____
- 2. _____
- 3. _____
- 4. _____
- 5. _____
- 6. _____
- 7. _____



Solve each problem.



- 1) lens B
- 2) stage C
- 3) fine knob F
- 4) base G
- 5) eye piece A
- 6) course knob E
- 7) illuminator D

Answers

- 1. B
- 2. C
- 3. F
- 4. G
- 5. A
- 6. E
- 7. D