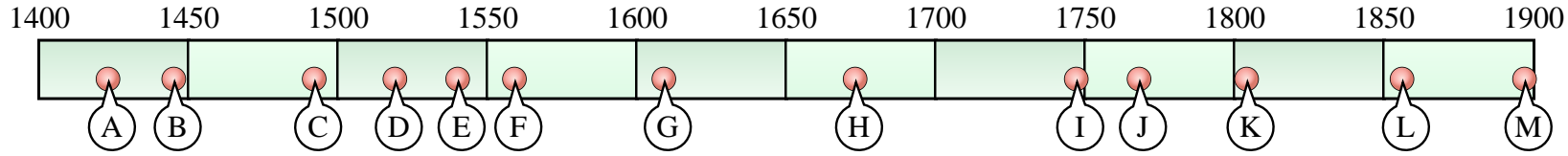




Solve each problem.

**World Explorers**



- 1) Dinis Dias sails along the west coast of Africa. (1445)
- 2) Henry Hudson explored parts of the Arctic Ocean and Hudson River. (1609)
- 3) Ferdinand Magellan and his crew sail around the world. (1519)
- 4) Jacques Marquette explores the Mississippi River. (1673)
- 5) Fransisco De Coronado explorers the south western United States. (1540)
- 6) Tristan De Luna explorers North America. (1559)
- 7) James Cook discovers New Zealand. (1768)
- 8) Lewis and Clark explore the Louisiana Purchase. (1804)
- 9) Adrien Gerlache explores Antarctica. (1897)
- 10) Christopher Columbus sails to 'The New World', landing in Cuba. (1492)

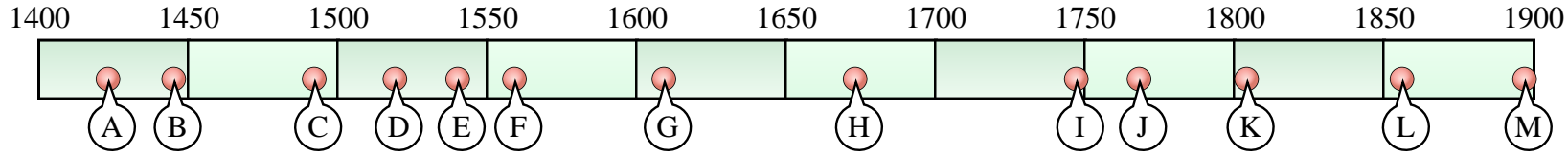
**Answers**

1. \_\_\_\_\_
2. \_\_\_\_\_
3. \_\_\_\_\_
4. \_\_\_\_\_
5. \_\_\_\_\_
6. \_\_\_\_\_
7. \_\_\_\_\_
8. \_\_\_\_\_
9. \_\_\_\_\_
10. \_\_\_\_\_



Solve each problem.

**World Explorers**



- 1) Dinis Dias sails along the west coast of Africa. (1445) **B**
- 2) Henry Hudson explored parts of the Arctic Ocean and Hudson River. (1609) **G**
- 3) Ferdinand Magellan and his crew sail around the world. (1519) **D**
- 4) Jacques Marquette explores the Mississippi River. (1673) **H**
- 5) Francisco De Coronado explores the south western United States. (1540) **E**
- 6) Tristan De Luna explores North America. (1559) **F**
- 7) James Cook discovers New Zealand. (1768) **J**
- 8) Lewis and Clark explore the Louisiana Purchase. (1804) **K**
- 9) Adrien Gerlache explores Antarctica. (1897) **M**
- 10) Christopher Columbus sails to 'The New World', landing in Cuba. (1492) **C**

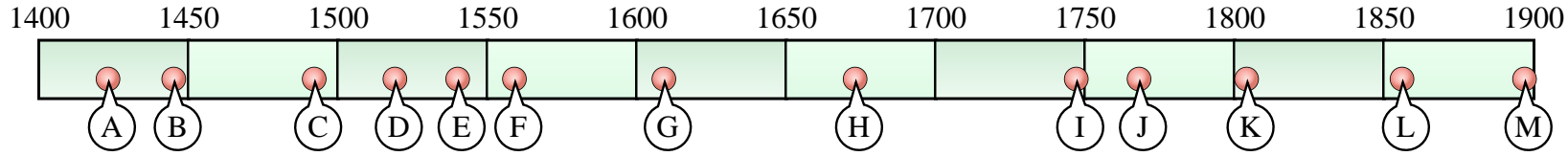
Answers

1. **B**
2. **G**
3. **D**
4. **H**
5. **E**
6. **F**
7. **J**
8. **K**
9. **M**
10. **C**



Solve each problem.

**World Explorers**



- 1) Dinis Dias sails along the west coast of Africa. (1445) (B or K)
- 2) Henry Hudson explored parts of the Arctic Ocean and Hudson River. (1609) (G or E)
- 3) Ferdinand Magellan and his crew sail around the world. (1519) (D or K)
- 4) Jacques Marquette explores the Mississippi River. (1673) (G or H)
- 5) Fransisco De Coronado explores the south western United States. (1540) (H or E)
- 6) Tristan De Luna explores North America. (1559) (F or B)
- 7) James Cook discovers New Zealand. (1768) (J or B)
- 8) Lewis and Clark explore the Louisiana Purchase. (1804) (E or K)
- 9) Adrien Gerlache explores Antarctica. (1897) (E or M)
- 10) Christopher Columbus sails to 'The New World', landing in Cuba. (1492) (C or H)

**Answers**

1. \_\_\_\_\_
2. \_\_\_\_\_
3. \_\_\_\_\_
4. \_\_\_\_\_
5. \_\_\_\_\_
6. \_\_\_\_\_
7. \_\_\_\_\_
8. \_\_\_\_\_
9. \_\_\_\_\_
10. \_\_\_\_\_