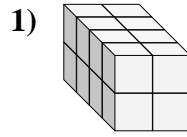
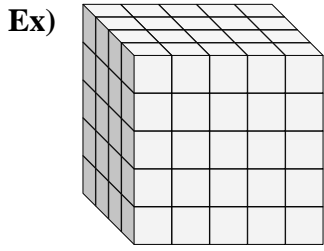




Find the length, width and height of the rectangular prism. Then find the volume.



Answers
Ex. 4 5 5 100

1. _____

2. _____

3. _____

4. _____

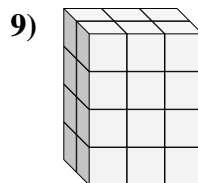
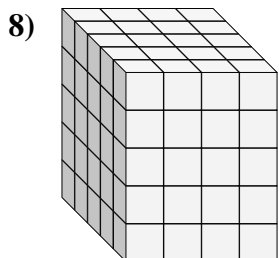
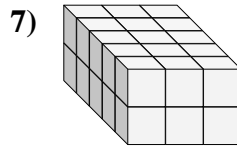
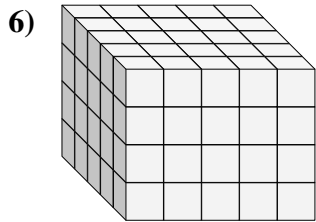
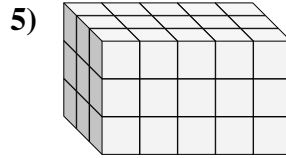
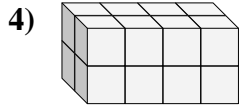
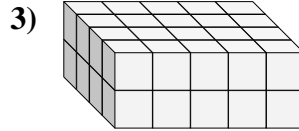
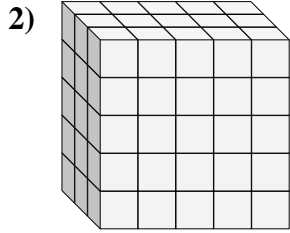
5. _____

6. _____

7. _____

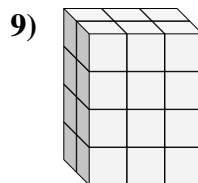
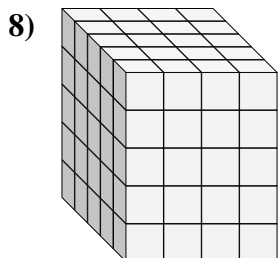
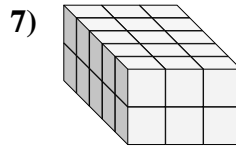
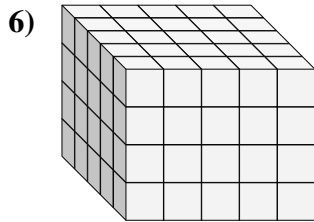
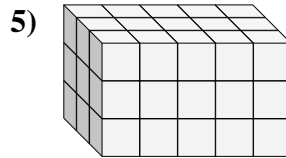
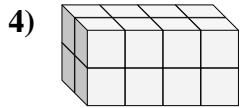
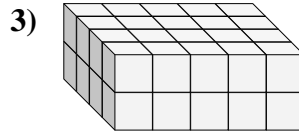
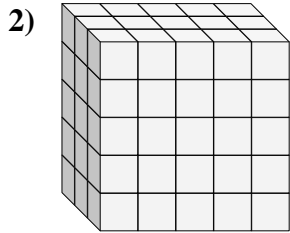
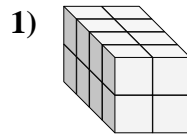
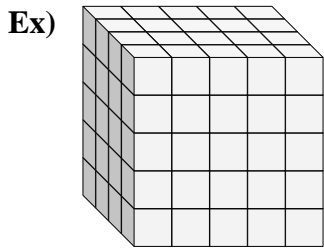
8. _____

9. _____





Find the length, width and height of the rectangular prism. Then find the volume.



Answers

Ex. 4 5 5 100

1. 4 2 2 16

2. 3 5 5 75

3. 4 5 2 40

4. 2 4 2 16

5. 3 5 3 45

6. 5 5 4 100

7. 5 3 2 30

8. 5 4 5 100

9. 2 3 4 24