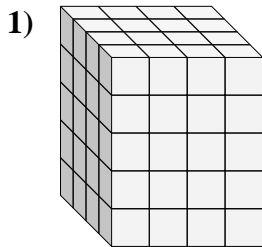
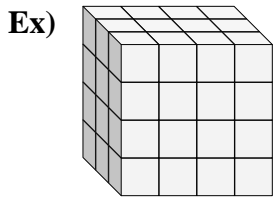




Find the length, width and height of the rectangular prism. Then find the volume.



Ex. 3 4 4 48

1. _____

2. _____

3. _____

4. _____

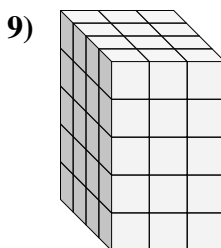
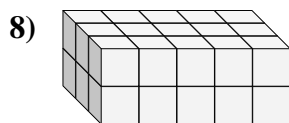
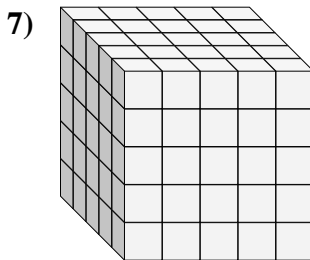
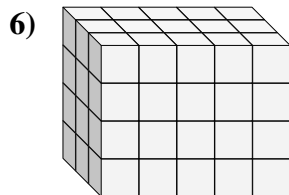
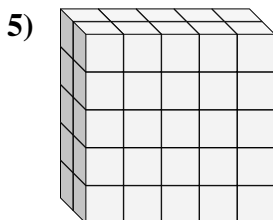
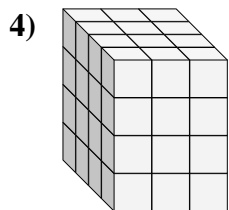
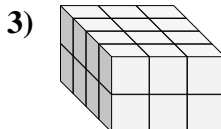
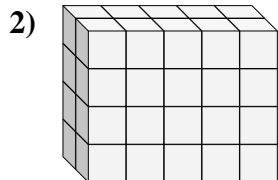
5. _____

6. _____

7. _____

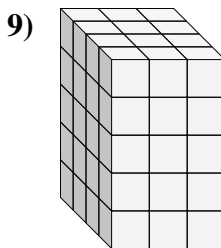
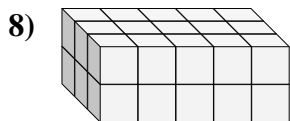
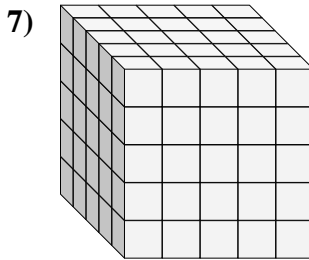
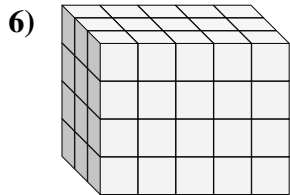
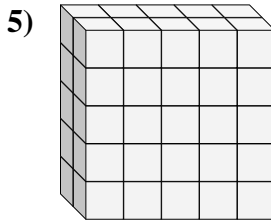
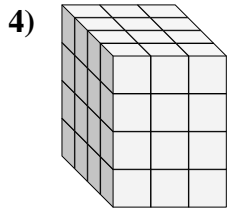
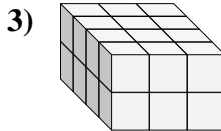
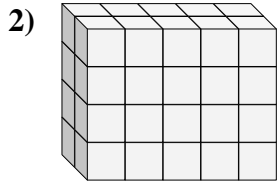
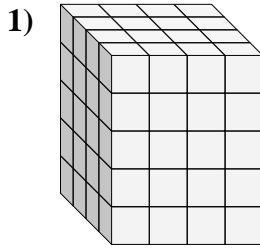
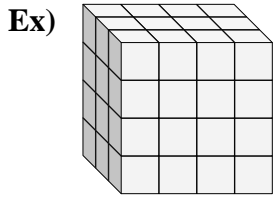
8. _____

9. _____





Find the length, width and height of the rectangular prism. Then find the volume.



Answers

Ex. 3 4 4 48

1. 4 4 5 80

2. 2 5 4 40

3. 4 3 2 24

4. 4 3 4 48

5. 2 5 5 50

6. 3 5 4 60

7. 5 5 5 125

8. 3 5 2 30

9. 4 3 5 60