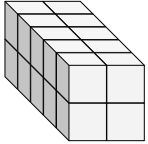


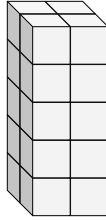


Find the length, width and height of the rectangular prism. Then find the volume.

Ex)



1)



Answers

Ex. 5 2 2 20

1. _____

2. _____

3. _____

4. _____

5. _____

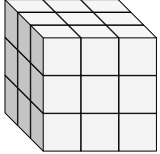
6. _____

7. _____

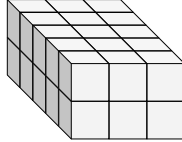
8. _____

9. _____

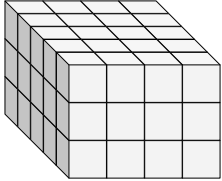
2)



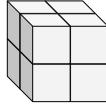
3)



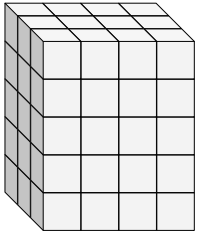
4)



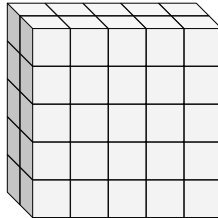
5)



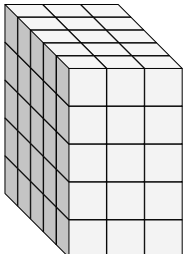
6)



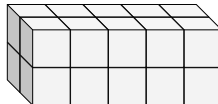
7)



8)

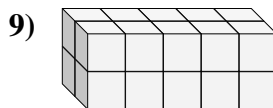
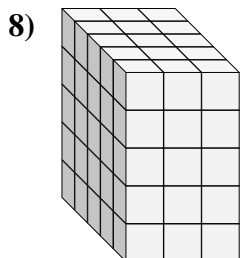
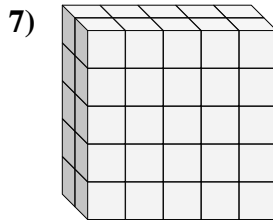
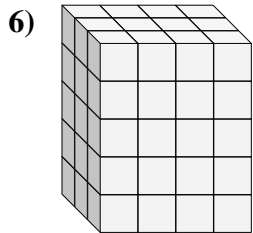
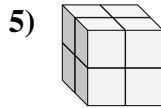
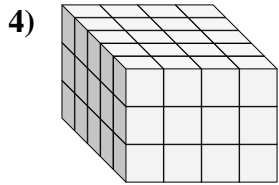
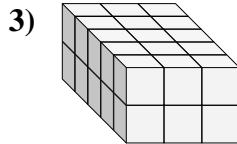
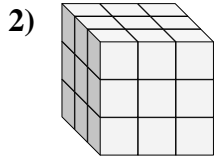
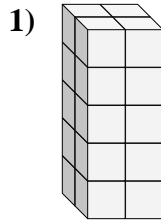
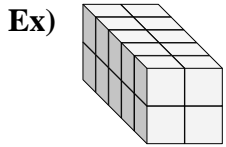


9)





Find the length, width and height of the rectangular prism. Then find the volume.



Answers

| | | | | |
|-----|----------|----------|----------|-----------|
| Ex. | <u>5</u> | <u>2</u> | <u>2</u> | <u>20</u> |
| 1. | <u>2</u> | <u>2</u> | <u>5</u> | <u>20</u> |
| 2. | <u>3</u> | <u>3</u> | <u>3</u> | <u>27</u> |
| 3. | <u>5</u> | <u>3</u> | <u>2</u> | <u>30</u> |
| 4. | <u>5</u> | <u>4</u> | <u>3</u> | <u>60</u> |
| 5. | <u>2</u> | <u>2</u> | <u>2</u> | <u>8</u> |
| 6. | <u>3</u> | <u>4</u> | <u>5</u> | <u>60</u> |
| 7. | <u>2</u> | <u>5</u> | <u>5</u> | <u>50</u> |
| 8. | <u>5</u> | <u>3</u> | <u>5</u> | <u>75</u> |
| 9. | <u>2</u> | <u>5</u> | <u>2</u> | <u>20</u> |