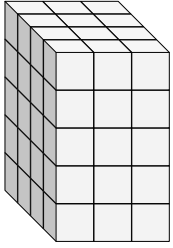




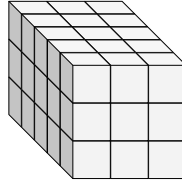
Find the length, width and height of the rectangular prism. Then find the volume.

Answers

Ex)



1)



Ex. 4 3 5 60

1. _____

2. _____

3. _____

4. _____

5. _____

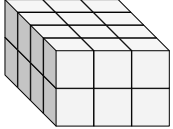
6. _____

7. _____

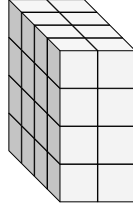
8. _____

9. _____

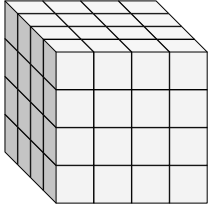
2)



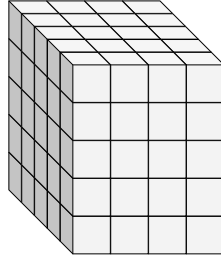
3)



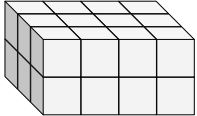
4)



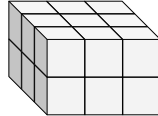
5)



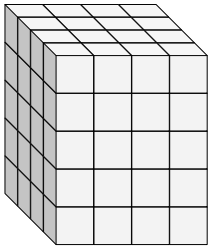
6)



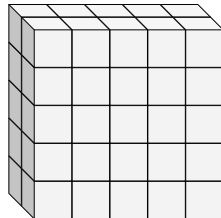
7)



8)

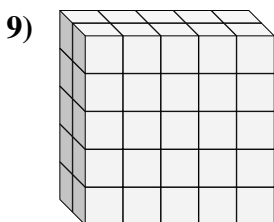
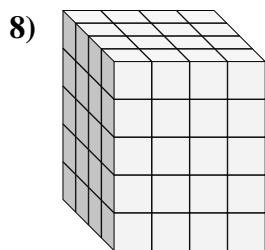
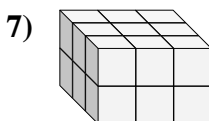
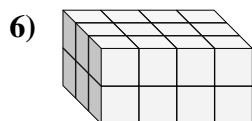
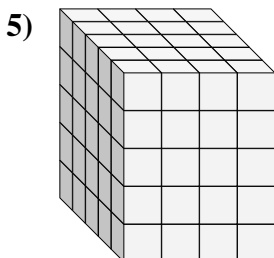
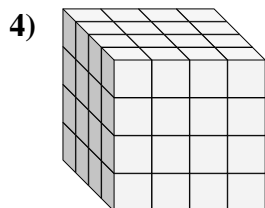
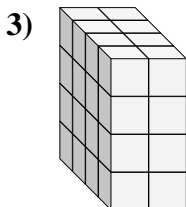
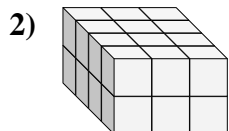
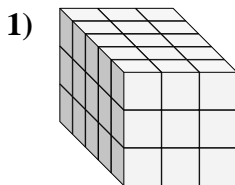
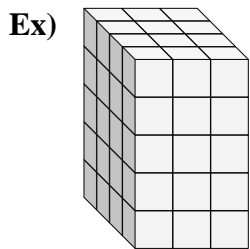


9)





Find the length, width and height of the rectangular prism. Then find the volume.



Answers

Ex. 4 3 5 60

1. 5 3 3 45

2. 4 3 2 24

3. 4 2 4 32

4. 4 4 4 64

5. 5 4 5 100

6. 3 4 2 24

7. 3 3 2 18

8. 4 4 5 80

9. 2 5 5 50