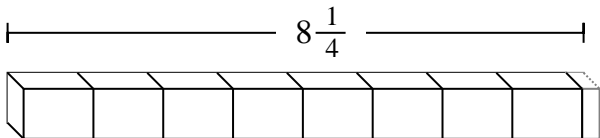




Determine the number of smaller fractional pieces that can be made from the larger piece.

Answers

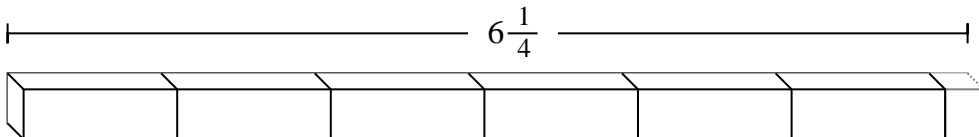
Ex)



Ex. **33**

1. _____

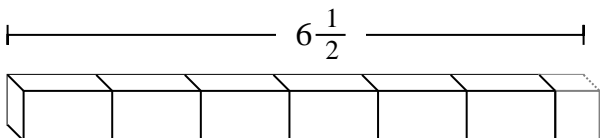
1)



2. _____

3. _____

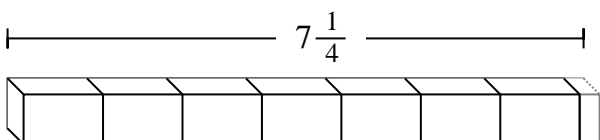
2)



4. _____

5. _____

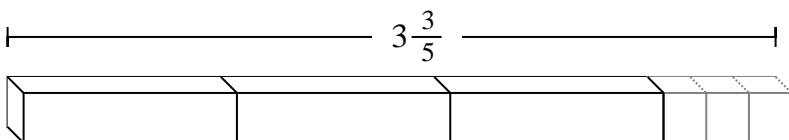
3)



6. _____

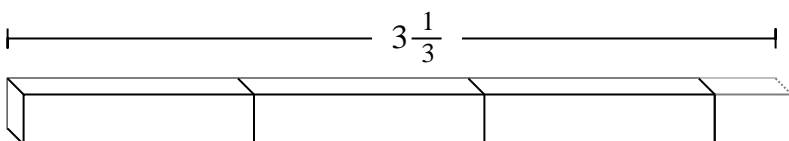
7. _____

4)



8. _____

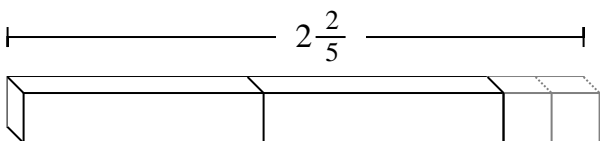
5)



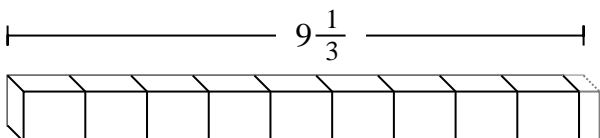
9. _____

10. _____

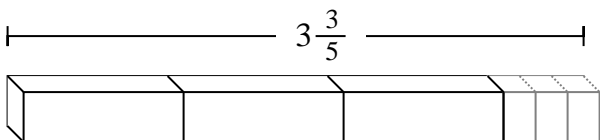
6)



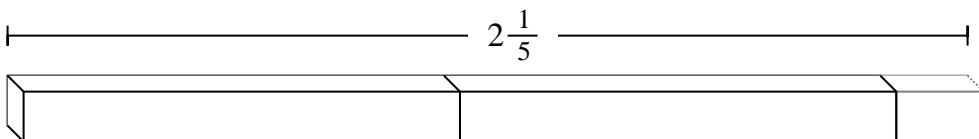
7)



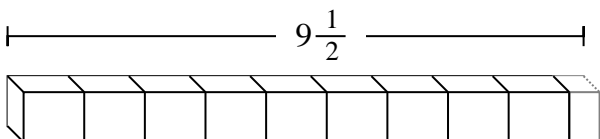
8)



9)



10)





Determine the number of smaller fractional pieces that can be made from the larger piece.

Answers

Ex) $8\frac{1}{4}$

1) $6\frac{1}{4}$

2) $6\frac{1}{2}$

3) $7\frac{1}{4}$

4) $3\frac{3}{5}$

5) $3\frac{1}{3}$

6) $2\frac{2}{5}$

7) $9\frac{1}{3}$

8) $3\frac{3}{5}$

9) $2\frac{1}{5}$

10) $9\frac{1}{2}$

- Ex. 33
1. 25
2. 13
3. 29
4. 18
5. 10
6. 12
7. 28
8. 18
9. 11
10. 19