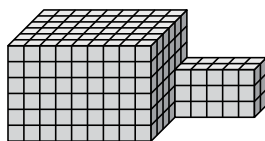




Find the total volume of each figure. Measurement is in cm (not to scale).

Answers

1)



1. _____

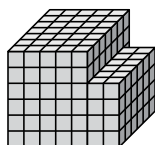
2. _____

3. _____

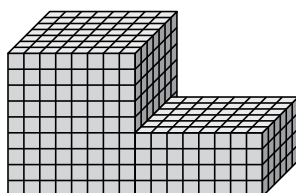
4. _____

5. _____

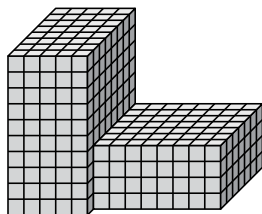
2)



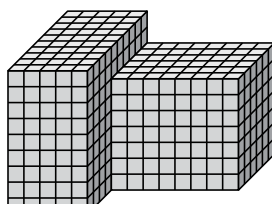
3)



4)



5)

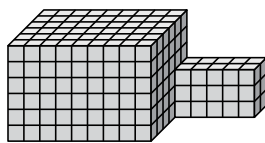




Find the total volume of each figure. Measurement is in cm (not to scale).

Answers

1)



$$9 \times 6 \times 6 = 324$$

$$5 \times 2 \times 3 = 30$$

1. **354 cm^3**

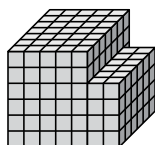
2. **258 cm^3**

3. **696 cm^3**

4. **624 cm^3**

5. **786 cm^3**

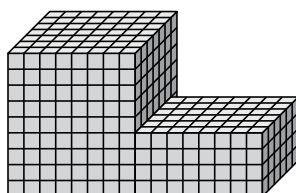
2)



$$5 \times 7 \times 6 = 210$$

$$2 \times 6 \times 4 = 48$$

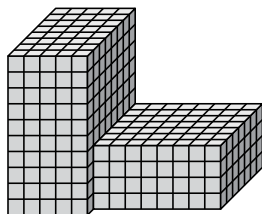
3)



$$8 \times 7 \times 9 = 504$$

$$8 \times 6 \times 4 = 192$$

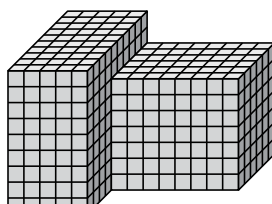
4)



$$5 \times 8 \times 10 = 400$$

$$8 \times 7 \times 4 = 224$$

5)



$$5 \times 10 \times 9 = 450$$

$$8 \times 6 \times 7 = 336$$