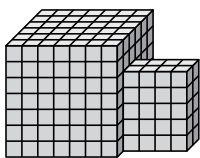




Find the total volume of each figure. Measurement is in cm (not to scale).

Answers

1)



1. _____

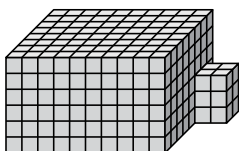
2. _____

3. _____

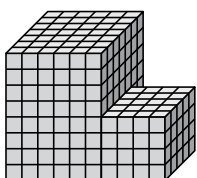
4. _____

5. _____

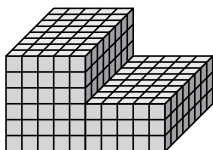
2)



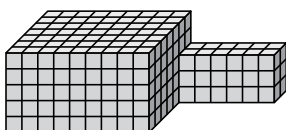
3)



4)

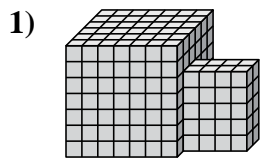


5)

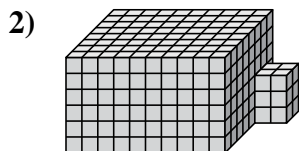




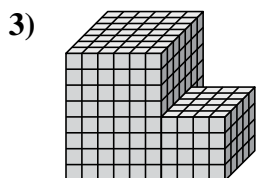
Find the total volume of each figure. Measurement is in cm (not to scale).



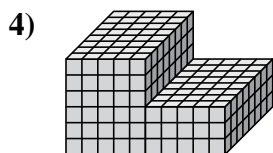
$$7 \times 6 \times 7 = 294$$
$$4 \times 2 \times 5 = 40$$



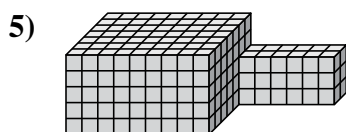
$$10 \times 8 \times 6 = 480$$
$$2 \times 2 \times 3 = 12$$



$$6 \times 7 \times 8 = 336$$
$$4 \times 5 \times 4 = 80$$



$$5 \times 8 \times 6 = 240$$
$$5 \times 8 \times 3 = 120$$



$$9 \times 7 \times 5 = 315$$
$$6 \times 2 \times 3 = 36$$

Answers

1. 334 cm³

2. 492 cm³

3. 416 cm³

4. 360 cm³

5. 351 cm³