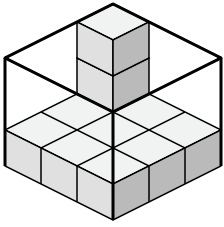




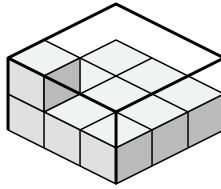
Create an expression to determine the volume of each box.

Answers

1)



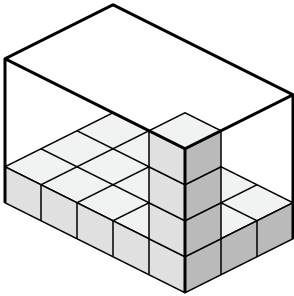
2)



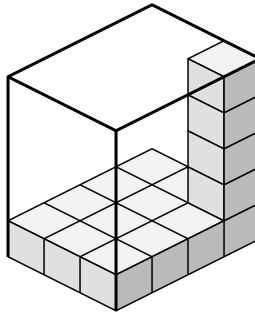
1. _____

2. _____

3)



4)

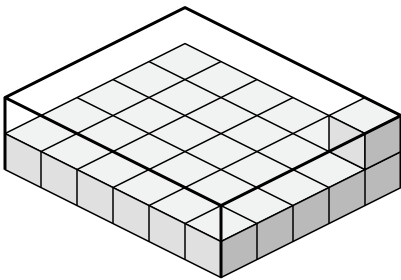


3. _____

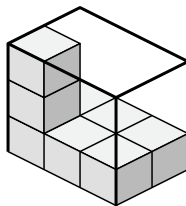
4. _____

5. _____

5)



6)

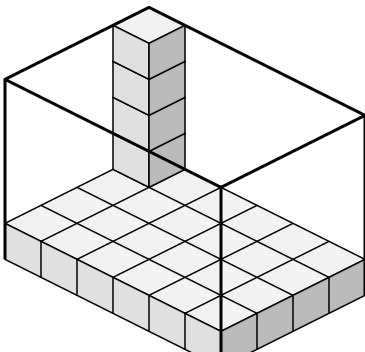


6. _____

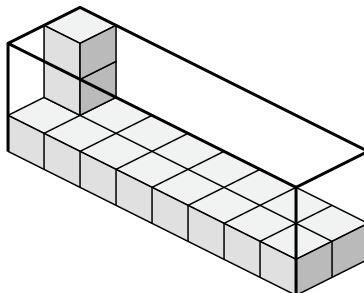
7. _____

8. _____

7)



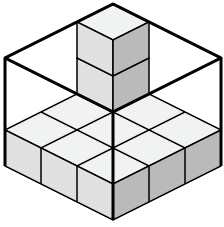
8)



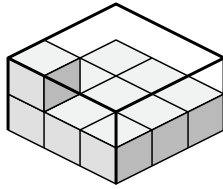


Create an expression to determine the volume of each box.

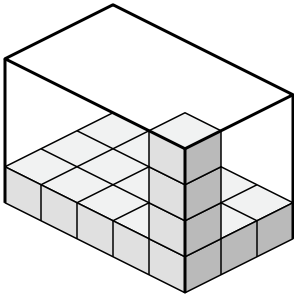
1)



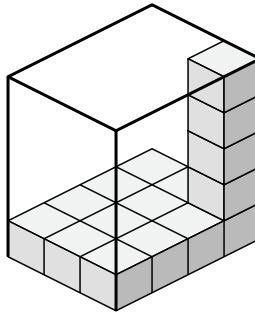
2)



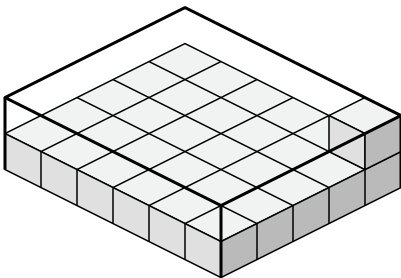
3)



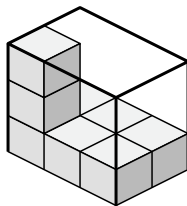
4)



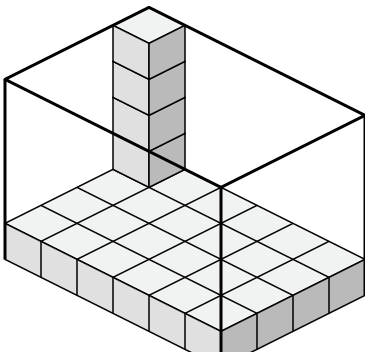
5)



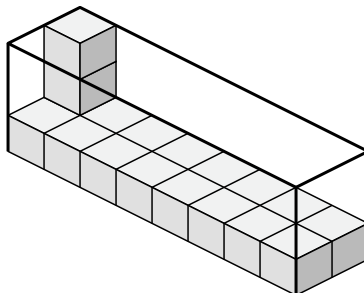
6)



7)



8)



Answers

1. 3×3×3

2. 3×3×2

3. 5×3×4

4. 3×4×5

5. 6×5×2

6. 3×2×3

7. 6×4×5

8. 8×2×3