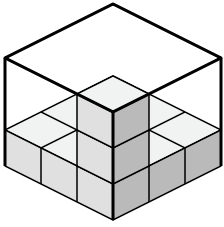


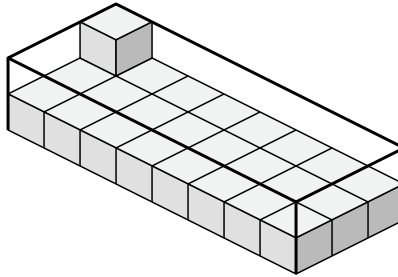


Create an expression to determine the volume of each box.

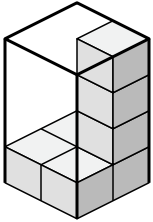
1)



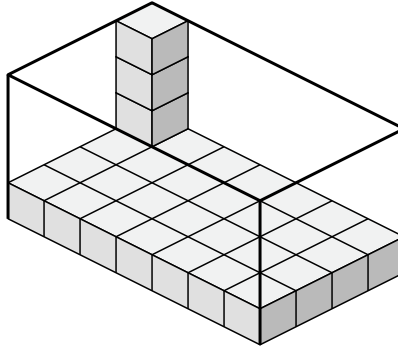
2)



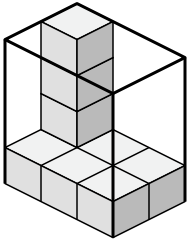
3)



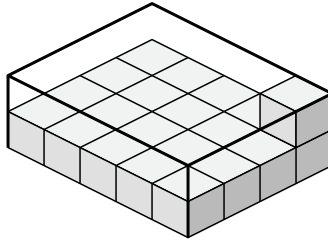
4)



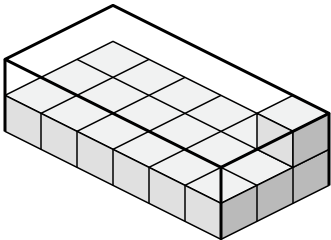
5)



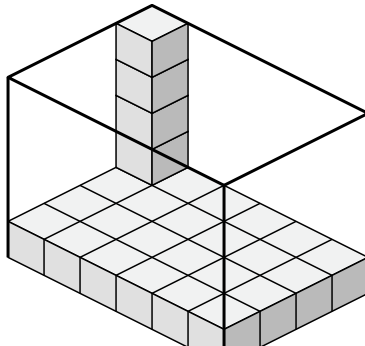
6)



7)



8)



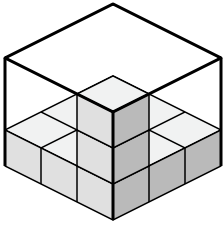
Answers

- 1. \_\_\_\_\_
- 2. \_\_\_\_\_
- 3. \_\_\_\_\_
- 4. \_\_\_\_\_
- 5. \_\_\_\_\_
- 6. \_\_\_\_\_
- 7. \_\_\_\_\_
- 8. \_\_\_\_\_

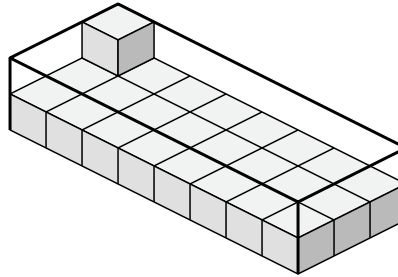


Create an expression to determine the volume of each box.

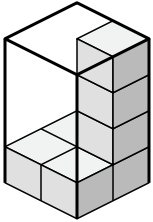
1)



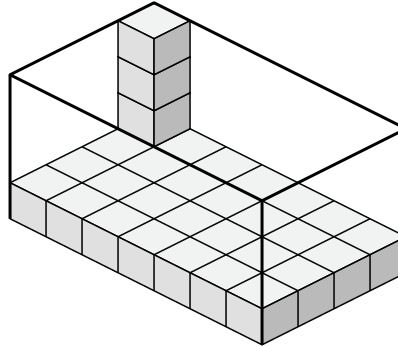
2)



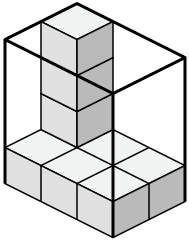
3)



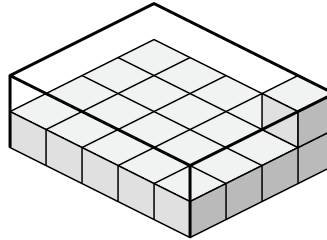
4)



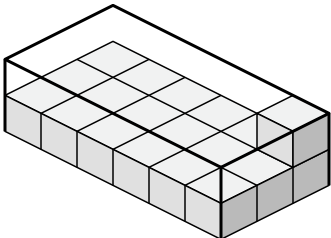
5)



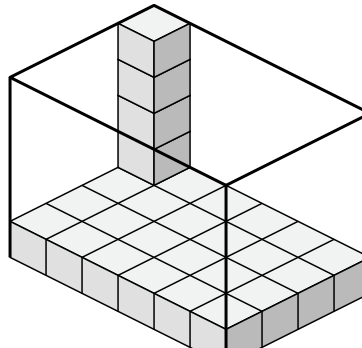
6)



7)



8)



Answers

1. 3x3x3

2. 8x3x2

3. 2x2x4

4. 7x4x4

5. 3x2x4

6. 5x4x2

7. 6x3x2

8. 6x4x5