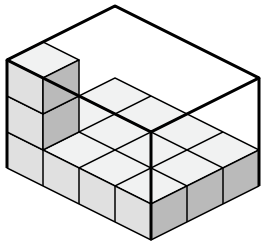




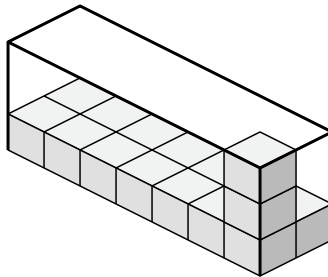
Create an expression to determine the volume of each box.

Answers

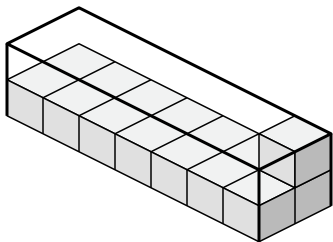
1)



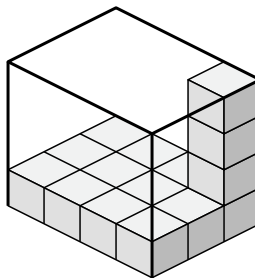
2)



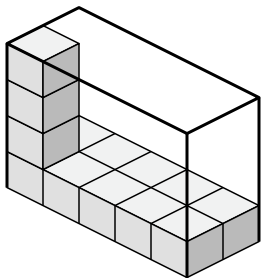
3)



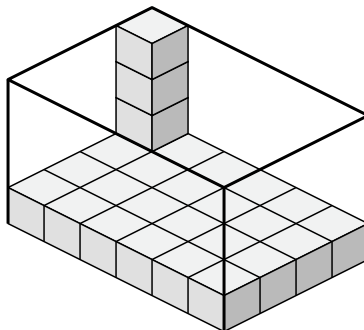
4)



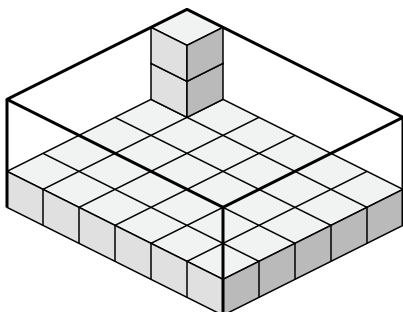
5)



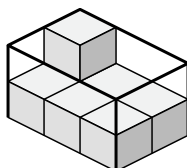
6)



7)



8)

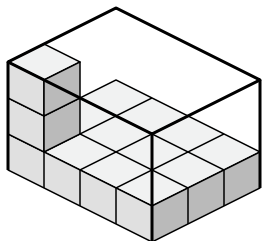


- 1. \_\_\_\_\_
- 2. \_\_\_\_\_
- 3. \_\_\_\_\_
- 4. \_\_\_\_\_
- 5. \_\_\_\_\_
- 6. \_\_\_\_\_
- 7. \_\_\_\_\_
- 8. \_\_\_\_\_

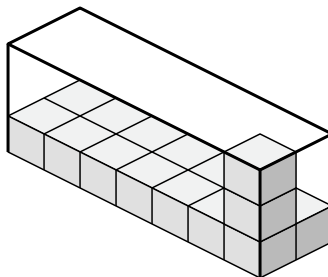


Create an expression to determine the volume of each box.

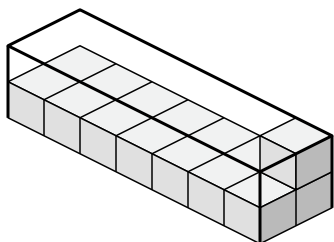
1)



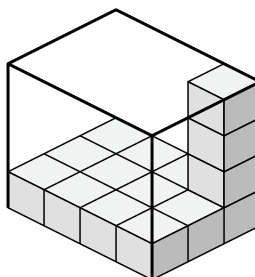
2)



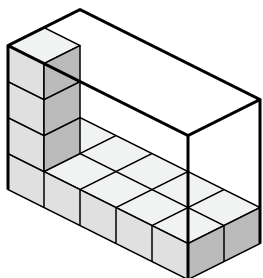
3)



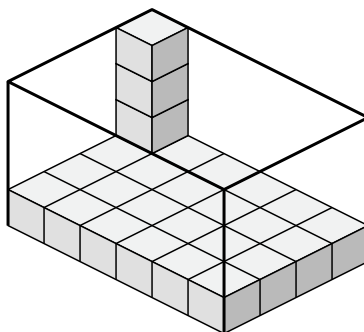
4)



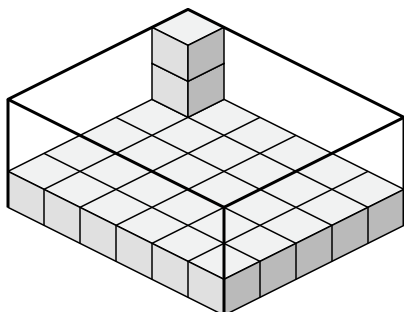
5)



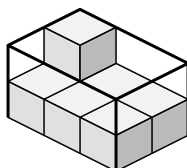
6)



7)



8)



Answers

1. 4×3×3

2. 7×2×3

3. 7×2×2

4. 4×3×4

5. 5×2×4

6. 6×4×4

7. 6×5×3

8. 3×2×2