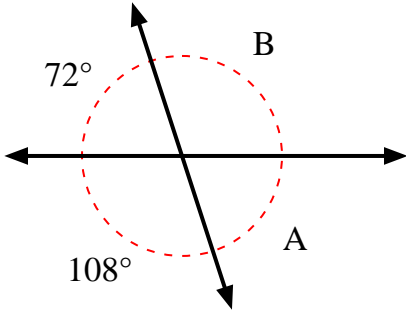


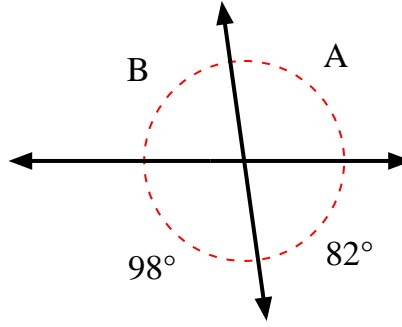


Find the value of angle 'A' and angle 'B'.

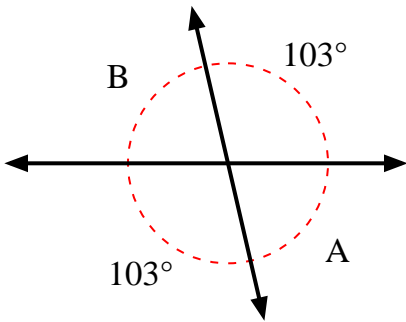
1)



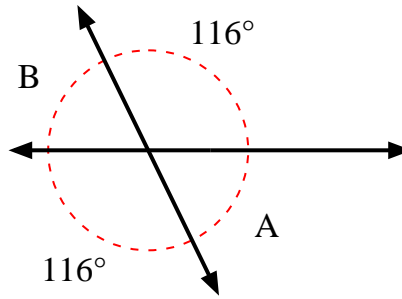
2)



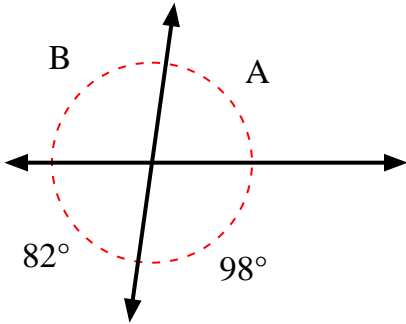
3)



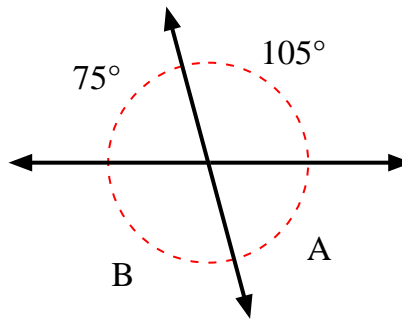
4)



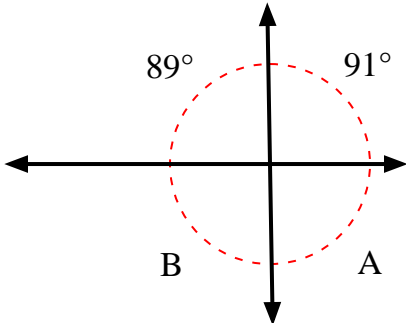
5)



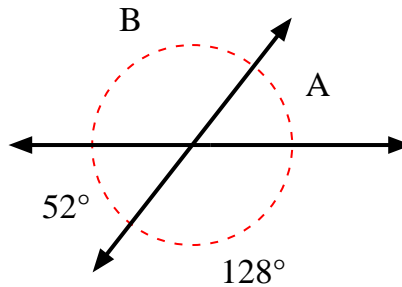
6)



7)



8)



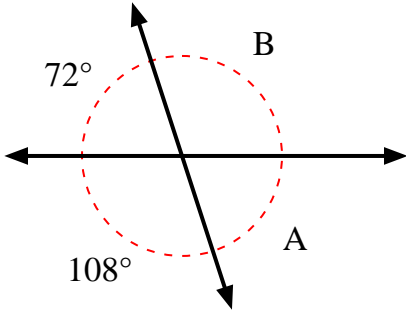
Answers

1. _____
2. _____
3. _____
4. _____
5. _____
6. _____
7. _____
8. _____

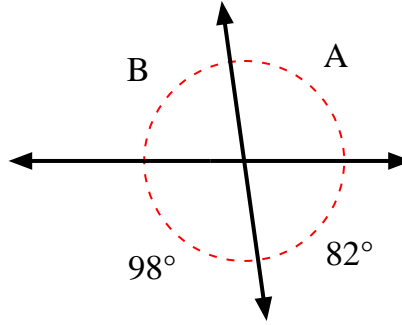


Find the value of angle 'A' and angle 'B'.

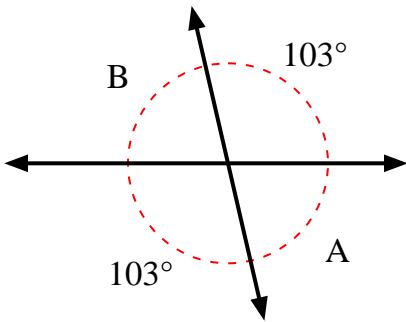
1)



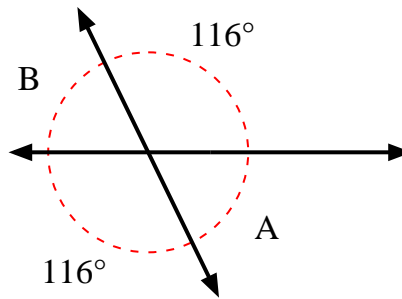
2)



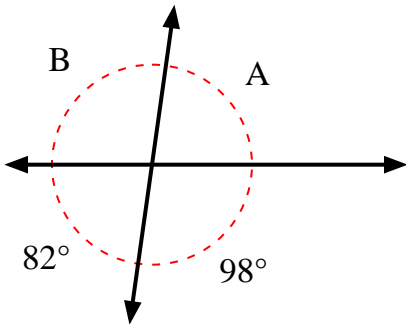
3)



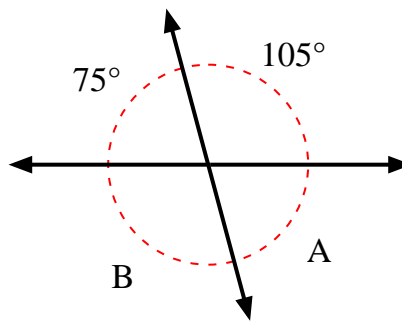
4)



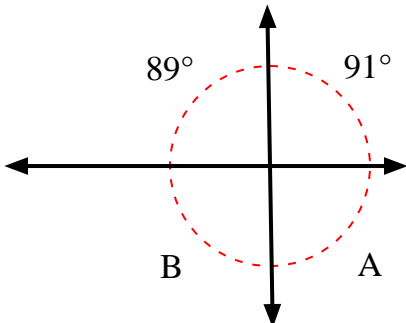
5)



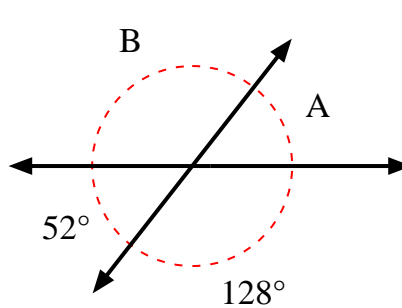
6)



7)



8)



Answers

1.	<u>72°</u>	<u>108°</u>
2.	<u>98°</u>	<u>82°</u>
3.	<u>77°</u>	<u>77°</u>
4.	<u>64°</u>	<u>64°</u>
5.	<u>82°</u>	<u>98°</u>
6.	<u>75°</u>	<u>105°</u>
7.	<u>89°</u>	<u>91°</u>
8.	<u>52°</u>	<u>128°</u>