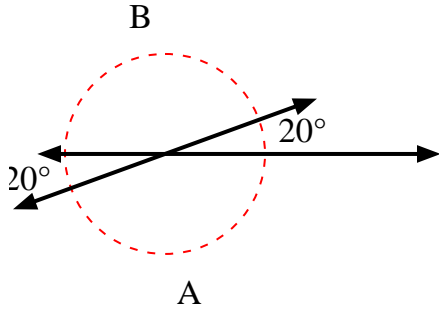


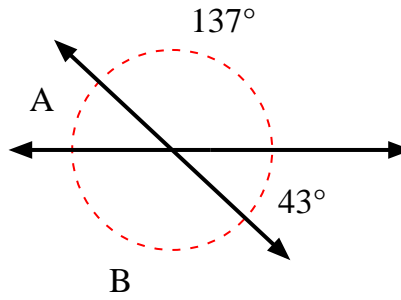


Find the value of angle 'A' and angle 'B'.

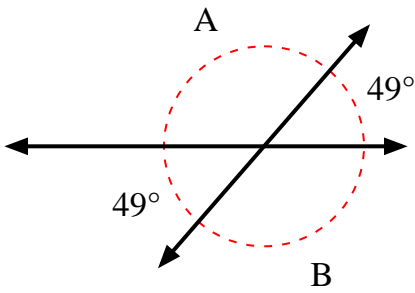
1)



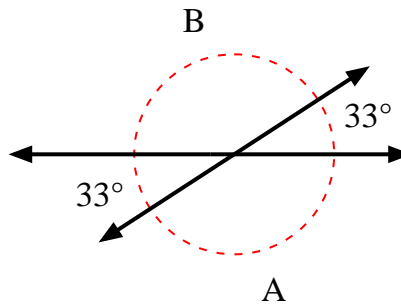
2)



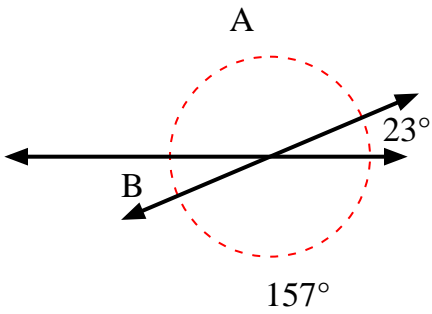
3)



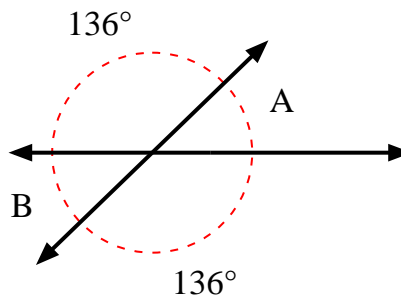
4)



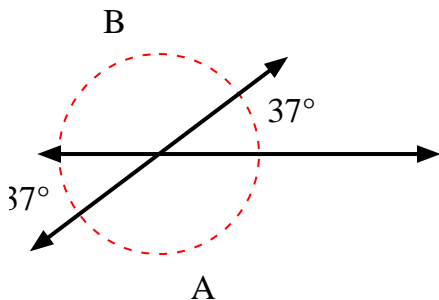
5)



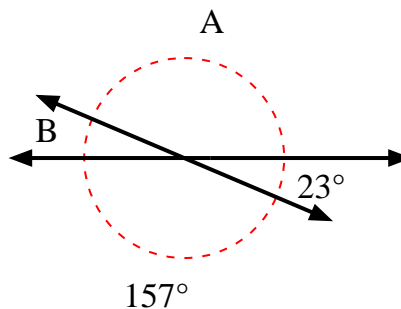
6)



7)



8)



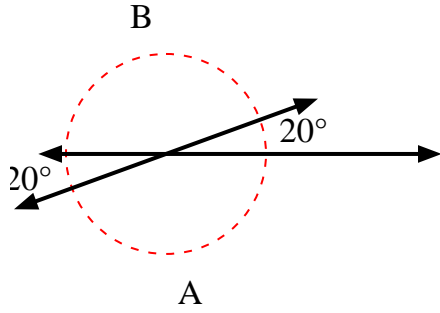
Answers

1. \_\_\_\_\_
2. \_\_\_\_\_
3. \_\_\_\_\_
4. \_\_\_\_\_
5. \_\_\_\_\_
6. \_\_\_\_\_
7. \_\_\_\_\_
8. \_\_\_\_\_

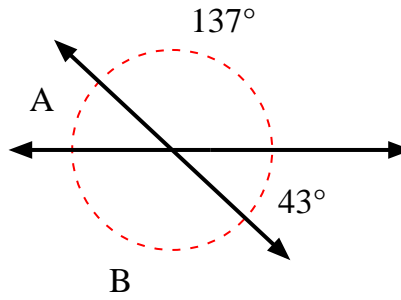


Find the value of angle 'A' and angle 'B'.

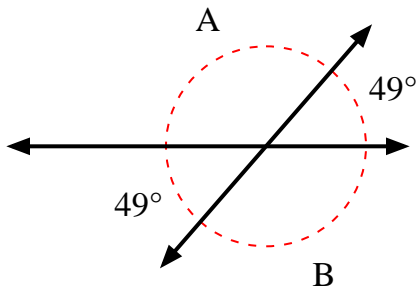
1)



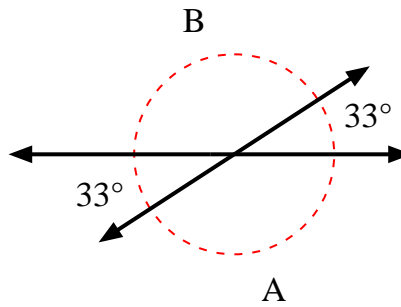
2)



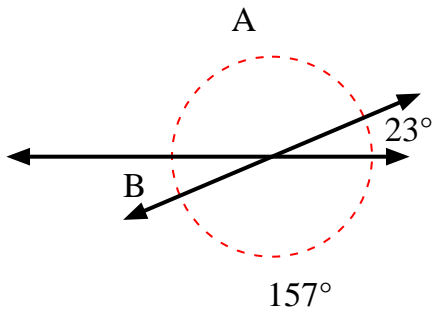
3)



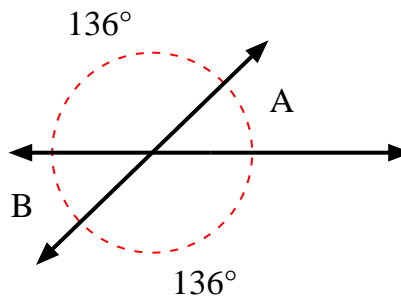
4)



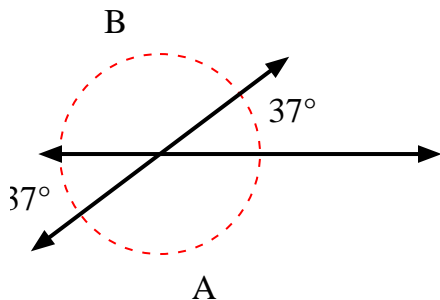
5)



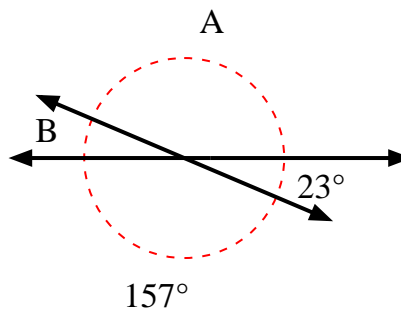
6)



7)



8)



Answers

- |    |             |             |
|----|-------------|-------------|
| 1. | <b>160°</b> | <b>160°</b> |
| 2. | <b>43°</b>  | <b>137°</b> |
| 3. | <b>131°</b> | <b>131°</b> |
| 4. | <b>147°</b> | <b>147°</b> |
| 5. | <b>157°</b> | <b>23°</b>  |
| 6. | <b>44°</b>  | <b>44°</b>  |
| 7. | <b>143°</b> | <b>143°</b> |
| 8. | <b>157°</b> | <b>23°</b>  |