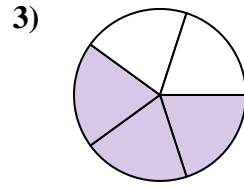
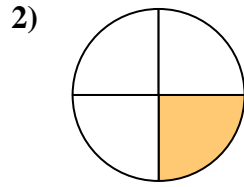
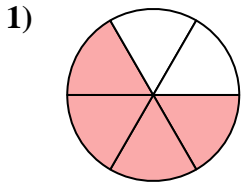




Find the angle (in degrees) of the shaded portion of the circle.

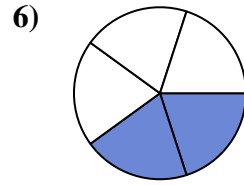
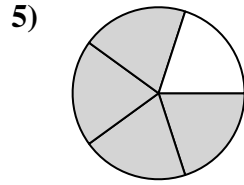
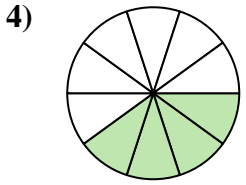
Answers



1. _____

2. _____

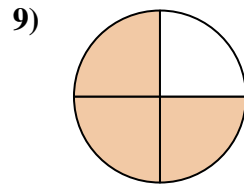
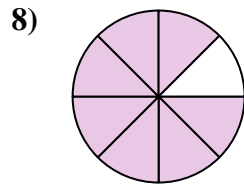
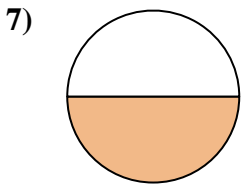
3. _____



4. _____

5. _____

6. _____

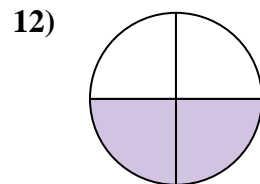
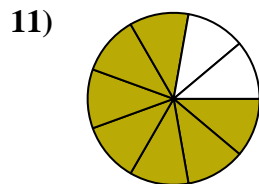
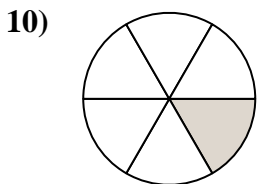


7. _____

8. _____

9. _____

10. _____



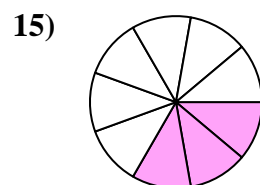
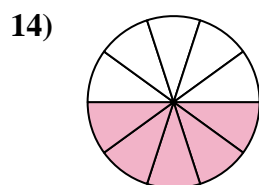
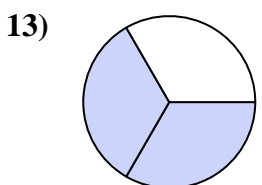
11. _____

12. _____

13. _____

14. _____

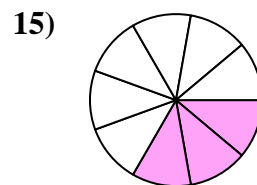
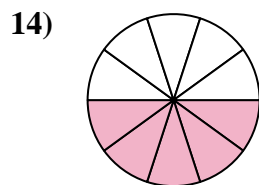
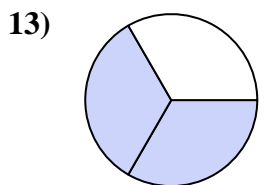
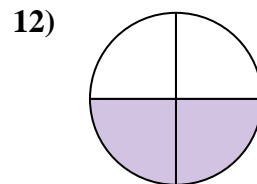
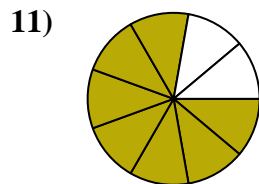
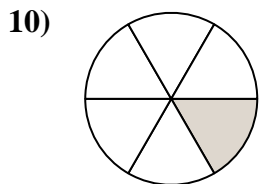
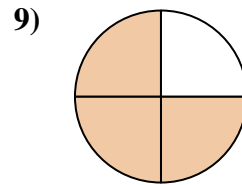
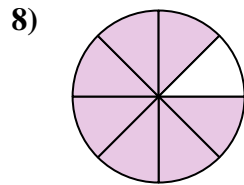
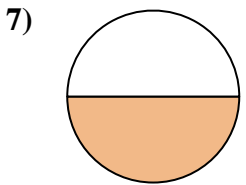
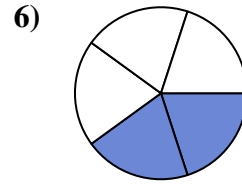
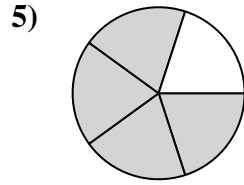
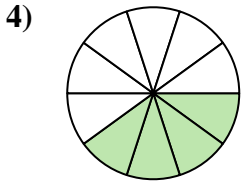
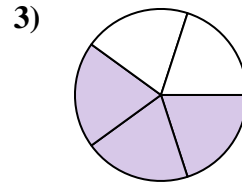
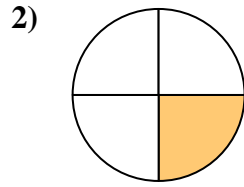
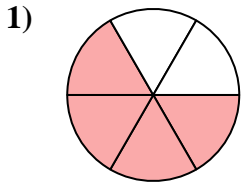
15. _____





Find the angle (in degrees) of the shaded portion of the circle.

Answers



1. 240

2. 90

3. 216

4. 144

5. 288

6. 144

7. 180

8. 315

9. 270

10. 60

11. 280

12. 180

13. 240

14. 180

15. 120



Find the angle (in degrees) of the shaded portion of the circle.

Answers

288

216

315

144

280

60

90

240

144

270

180

180

1. _____

2. _____

3. _____

4. _____

5. _____

6. _____

7. _____

8. _____

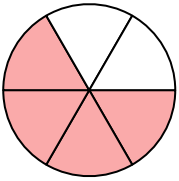
9. _____

10. _____

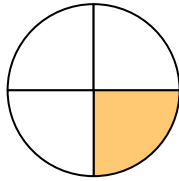
11. _____

12. _____

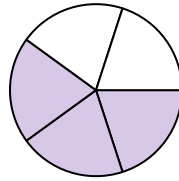
1)



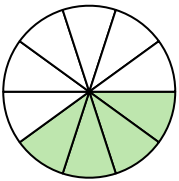
2)



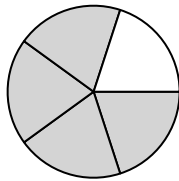
3)



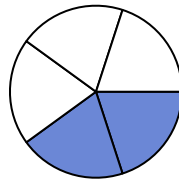
4)



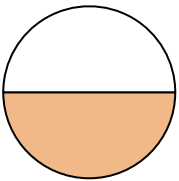
5)



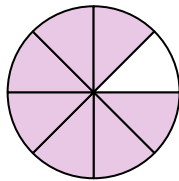
6)



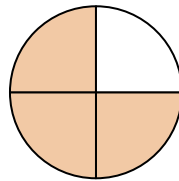
7)



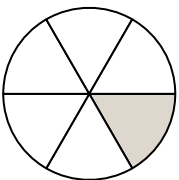
8)



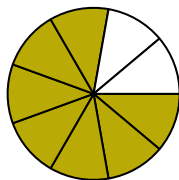
9)



10)



11)



12)

