



Determine if the angle shown is acute, obtuse, right or straight.

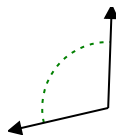
Answers

Ex)

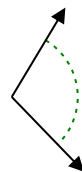


Ex. **right**

1)



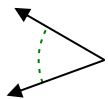
2)



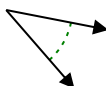
1. _____

2. _____

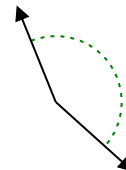
3)



4)



5)



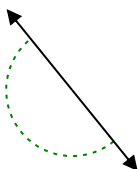
3. _____

4. _____

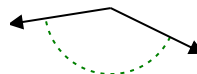
6)



7)



8)

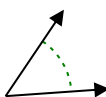


5. _____

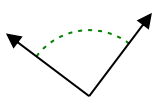
6. _____

7. _____

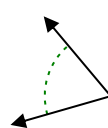
9)



10)



11)

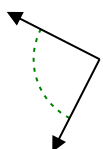


8. _____

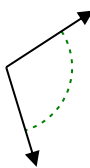
9. _____

10. _____

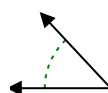
12)



13)



14)

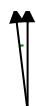


11. _____

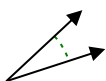
12. _____

13. _____

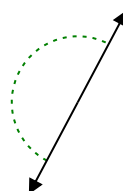
15)



16)



17)



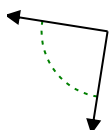
14. _____

15. _____

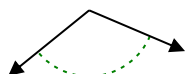
16. _____

17. _____

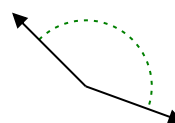
18)



19)



20)



18. _____

19. _____

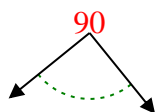
20. _____

20. _____

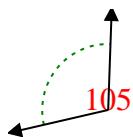


Determine if the angle shown is acute, obtuse, right or straight.

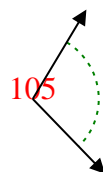
Ex)



1)



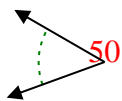
2)



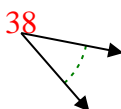
Answers

Ex. right

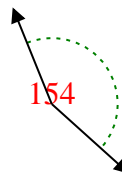
3)



4)



5)



1. obtuse

2. obtuse

3. acute

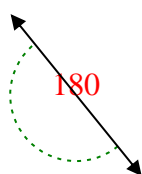
4. acute

5. obtuse

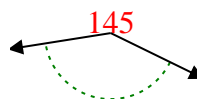
6)



7)



8)



6. acute

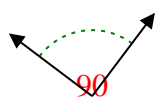
7. straight

8. obtuse

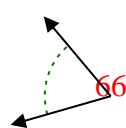
9)



10)



11)

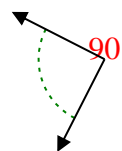


9. acute

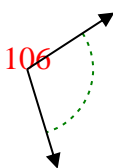
10. right

11. acute

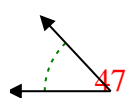
12)



13)



14)



12. right

13. obtuse

14. acute

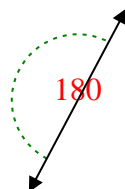
15)



16)



17)

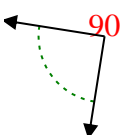


15. acute

16. acute

17. straight

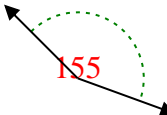
18)



19)



20)



18. right

19. obtuse

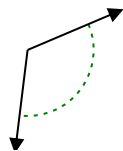
20. obtuse



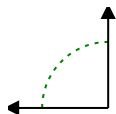
Determine if the angle shown is acute, obtuse, right or straight.

Answers

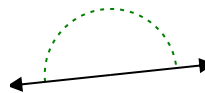
Ex)



1)



2)

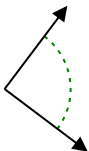


Ex. **obtuse**

1. _____

2. _____

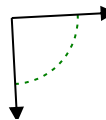
3)



4)



5)



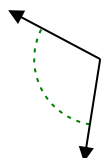
3. _____

4. _____

6)



7)



8)

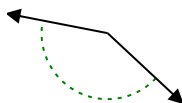


5. _____

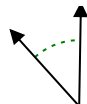
6. _____

7. _____

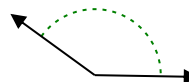
9)



10)



11)



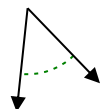
8. _____

9. _____

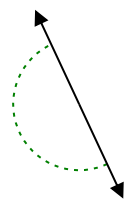
10. _____

11. _____

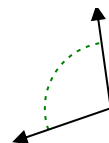
12)



13)



14)

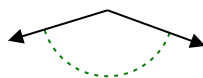


12. _____

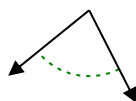
13. _____

14. _____

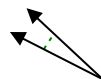
15)



16)



17)

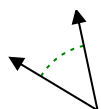


14. _____

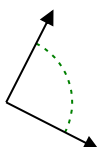
15. _____

16. _____

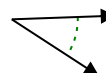
18)



19)



20)



17. _____

18. _____

19. _____

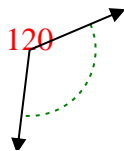
20. _____

20. _____

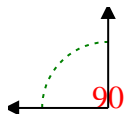


Determine if the angle shown is acute, obtuse, right or straight.

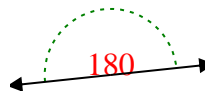
Ex)



1)



2)



Answers

Ex. **obtuse**

1. **right**

2. **straight**

3. **right**

4. **acute**

5. **right**

6. **obtuse**

7. **obtuse**

8. **acute**

9. **obtuse**

10. **acute**

11. **obtuse**

12. **acute**

13. **straight**

14. **obtuse**

15. **obtuse**

16. **acute**

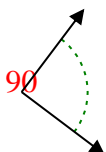
17. **acute**

18. **acute**

19. **right**

20. **acute**

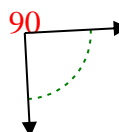
3)



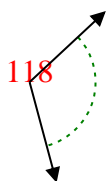
4)



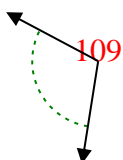
5)



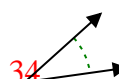
6)



7)



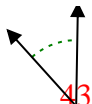
8)



9)



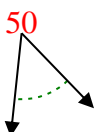
10)



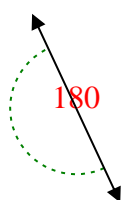
11)



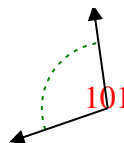
12)



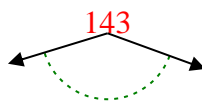
13)



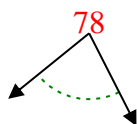
14)



15)



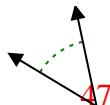
16)



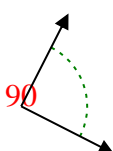
17)



18)



19)



20)





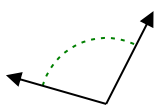
Determine if the angle shown is acute, obtuse, right or straight.

Answers

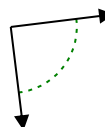
Ex)



1)



2)



Ex.

obtuse

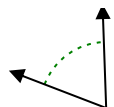
1. _____

2. _____

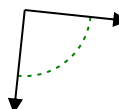
3)



4)



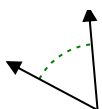
5)



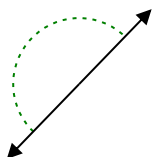
3. _____

4. _____

6)



7)



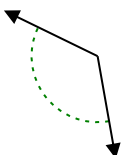
8)



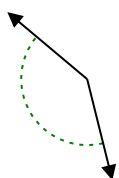
5. _____

6. _____

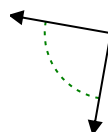
9)



10)



11)



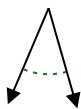
7. _____

8. _____

9. _____

10. _____

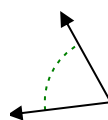
12)



13)



14)



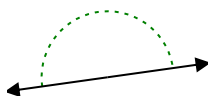
11. _____

12. _____

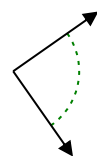
13. _____

14. _____

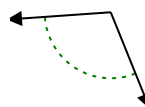
15)



16)



17)



15. _____

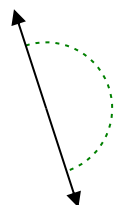
16. _____

17. _____

18)



19)



20)



18. _____

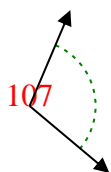
19. _____

20. _____

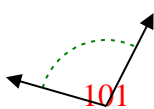


Determine if the angle shown is acute, obtuse, right or straight.

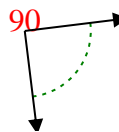
Ex)



1)



2)



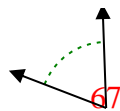
Ex.

obtuse

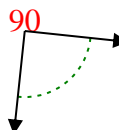
3)



4)



5)



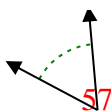
1.

obtuse

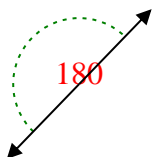
2.

right

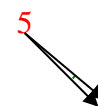
6)



7)



8)



3.

acute

4.

acute

5.

right

6.

acute

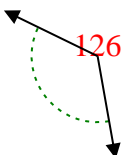
7.

straight

8.

acute

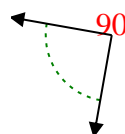
9)



10)



11)



9.

obtuse

10.

obtuse

11.

right

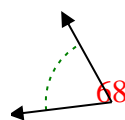
12)



13)



14)



12.

acute

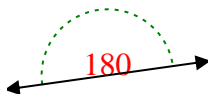
13.

acute

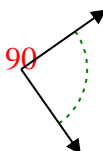
14.

acute

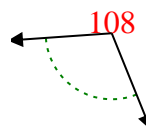
15)



16)



17)



15.

straight

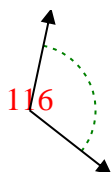
16.

right

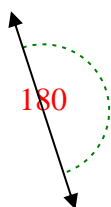
17.

obtuse

18)



19)



20)



18.

obtuse

19.

straight

20.

obtuse

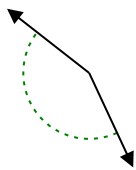


Determine if the angle shown is acute, obtuse, right or straight.

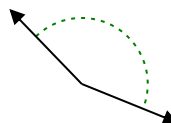
Ex)



1)



2)



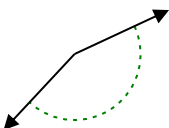
Answers

Ex. **straight**

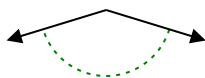
1. _____

2. _____

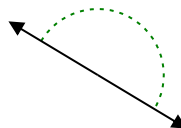
3)



4)



5)



3. _____

4. _____

6)



7)



8)

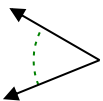


5. _____

6. _____

7. _____

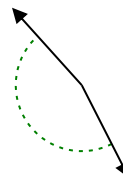
9)



10)



11)



8. _____

9. _____

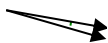
10. _____

11. _____

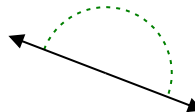
12)



13)



14)

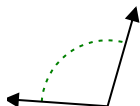


12. _____

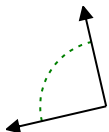
13. _____

14. _____

15)



16)



17)



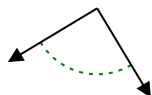
15. _____

16. _____

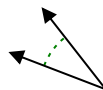
18)



19)



20)



17. _____

18. _____

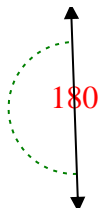
19. _____

20. _____

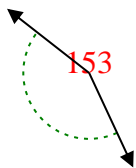


Determine if the angle shown is acute, obtuse, right or straight.

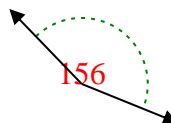
Ex)



1)



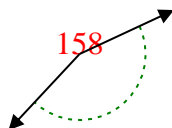
2)



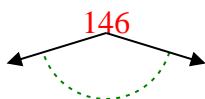
Answers

Ex. **straight**

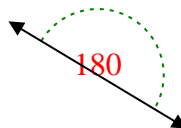
3)



4)



5)



1. **obtuse**

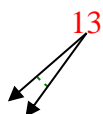
2. **obtuse**

3. **obtuse**

4. **obtuse**

5. **straight**

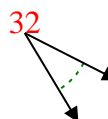
6)



7)



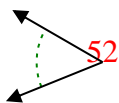
8)



6. **acute**

7. **acute**

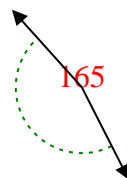
9)



10)



11)



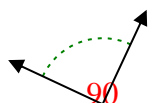
8. **acute**

9. **acute**

10. **acute**

11. **obtuse**

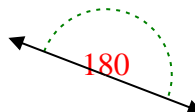
12)



13)



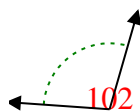
14)



12. **right**

13. **acute**

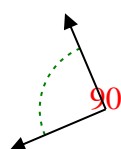
15)



16)



17)



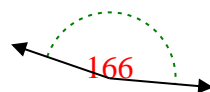
14. **straight**

15. **obtuse**

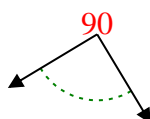
16. **right**

17. **right**

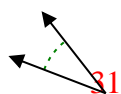
18)



19)



20)



18. **obtuse**

19. **right**

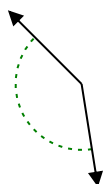
20. **acute**



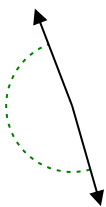
Determine if the angle shown is acute, obtuse, right or straight.

Answers

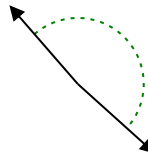
Ex)



1)



2)

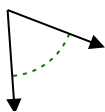


Ex. **obtuse**

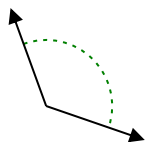
1. _____

2. _____

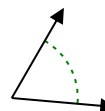
3)



4)



5)

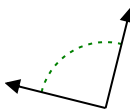


3. _____

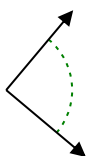
4. _____

5. _____

6)



7)



8)

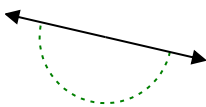


6. _____

7. _____

8. _____

9)



10)



11)

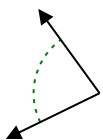


9. _____

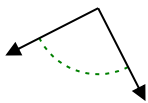
10. _____

11. _____

12)



13)



14)

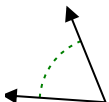


12. _____

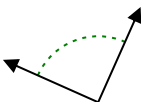
13. _____

14. _____

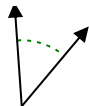
15)



16)



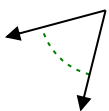
17)



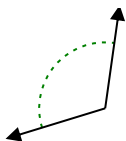
15. _____

16. _____

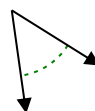
18)



19)



20)



17. _____

18. _____

19. _____

20. _____

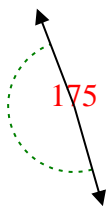


Determine if the angle shown is acute, obtuse, right or straight.

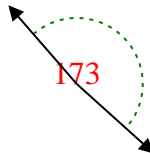
Ex)



1)



2)



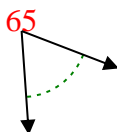
Answers

Ex. **obtuse**

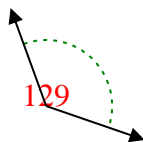
1. **obtuse**

2. **obtuse**

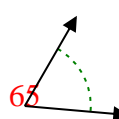
3)



4)



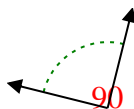
5)



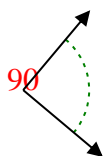
3. **acute**

4. **obtuse**

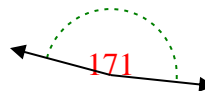
6)



7)



8)

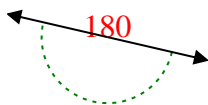


5. **acute**

6. **right**

7. **right**

9)



10)



11)

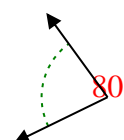


8. **obtuse**

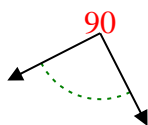
9. **straight**

10. **acute**

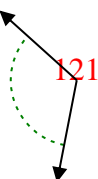
12)



13)



14)

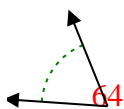


11. **straight**

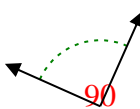
12. **acute**

13. **right**

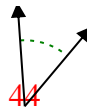
15)



16)



17)

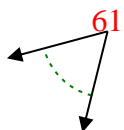


14. **obtuse**

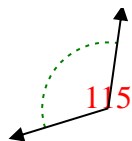
15. **acute**

16. **right**

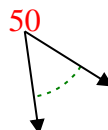
18)



19)



20)



17. **acute**

18. **acute**

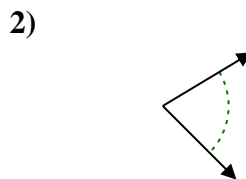
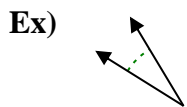
19. **obtuse**

20. **acute**



Determine if the angle shown is acute, obtuse, right or straight.

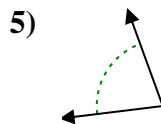
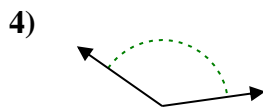
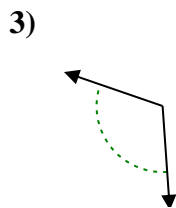
Answers



Ex. **acute**

1. _____

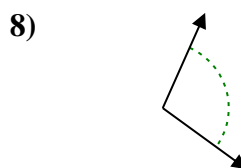
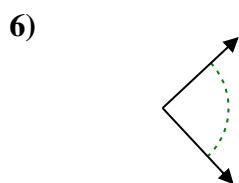
2. _____



3. _____

4. _____

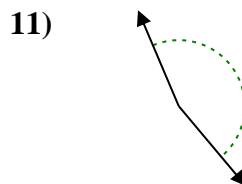
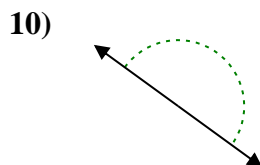
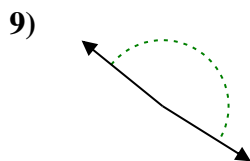
5. _____



6. _____

7. _____

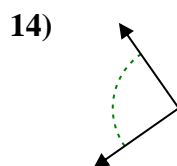
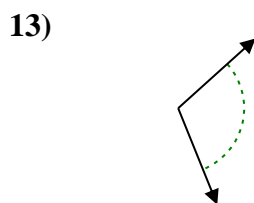
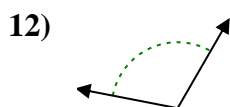
8. _____



9. _____

10. _____

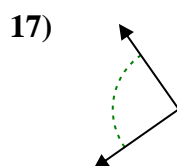
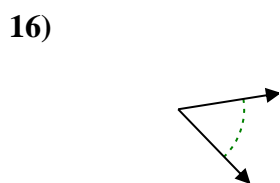
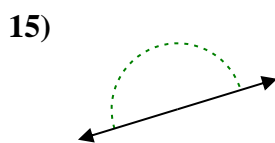
11. _____



12. _____

13. _____

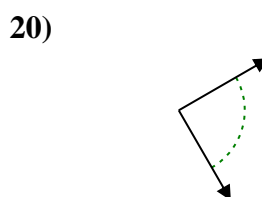
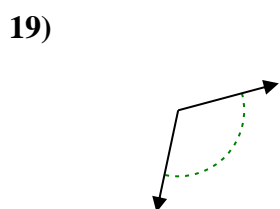
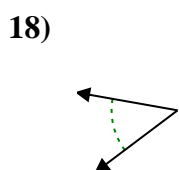
14. _____



15. _____

16. _____

17. _____



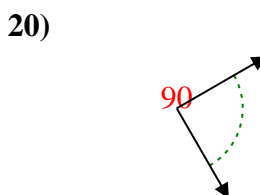
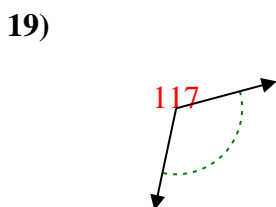
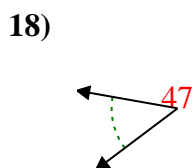
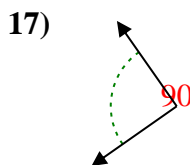
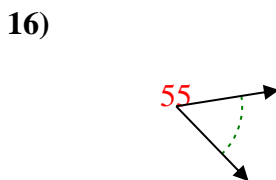
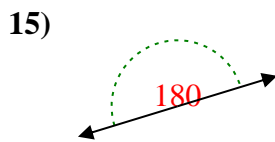
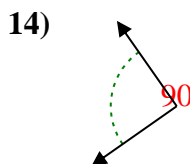
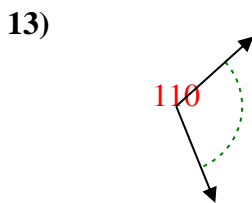
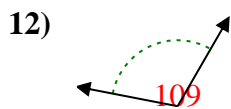
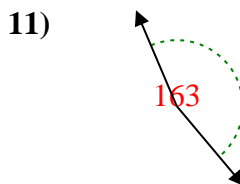
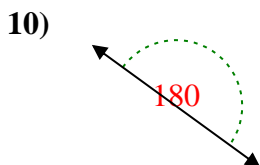
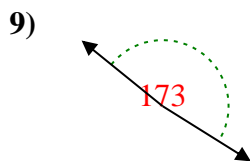
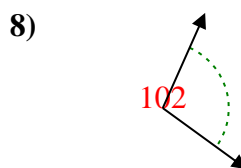
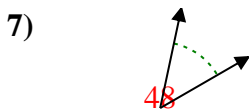
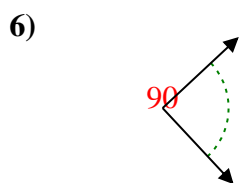
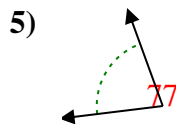
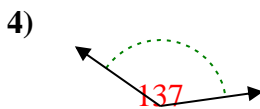
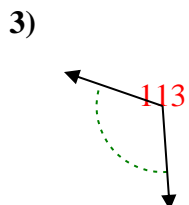
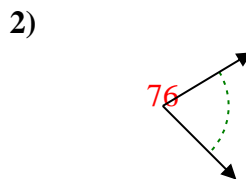
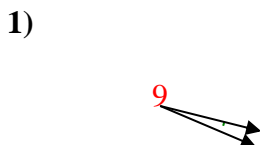
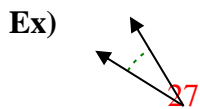
18. _____

19. _____

20. _____



Determine if the angle shown is acute, obtuse, right or straight.



Answers

Ex. **acute**

1. **acute**

2. **acute**

3. **obtuse**

4. **obtuse**

5. **acute**

6. **right**

7. **acute**

8. **obtuse**

9. **obtuse**

10. **straight**

11. **obtuse**

12. **obtuse**

13. **obtuse**

14. **right**

15. **straight**

16. **acute**

17. **right**

18. **acute**

19. **obtuse**

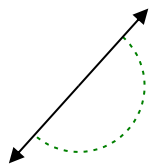
20. **right**



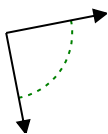
Determine if the angle shown is acute, obtuse, right or straight.

Answers

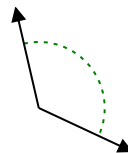
Ex)



1)



2)

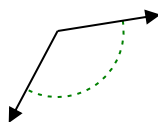


Ex. **straight**

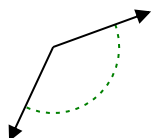
1. _____

2. _____

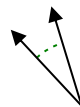
3)



4)



5)



3. _____

4. _____

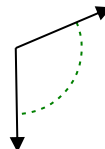
6)



7)



8)

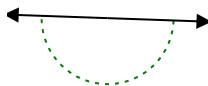


5. _____

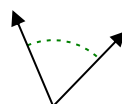
6. _____

7. _____

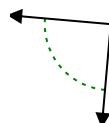
9)



10)



11)



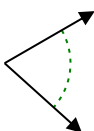
8. _____

9. _____

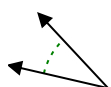
10. _____

11. _____

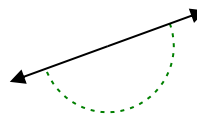
12)



13)



14)

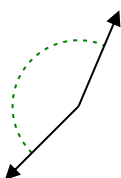


12. _____

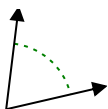
13. _____

14. _____

15)



16)



17)

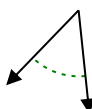


15. _____

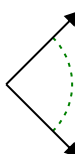
16. _____

17. _____

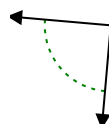
18)



19)



20)



18. _____

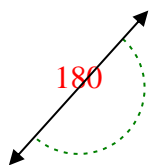
19. _____

20. _____

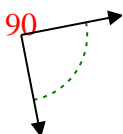


Determine if the angle shown is acute, obtuse, right or straight.

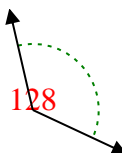
Ex)



1)



2)



Answers

Ex. **straight**

1. **right**

2. **obtuse**

3. **obtuse**

4. **obtuse**

5. **acute**

6. **obtuse**

7. **obtuse**

8. **obtuse**

9. **straight**

10. **acute**

11. **right**

12. **acute**

13. **acute**

14. **straight**

15. **obtuse**

16. **acute**

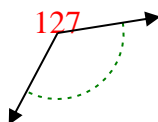
17. **acute**

18. **acute**

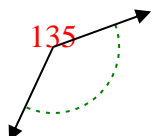
19. **right**

20. **right**

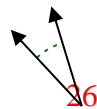
3)



4)



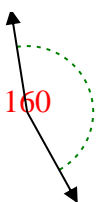
5)



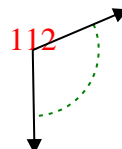
6)



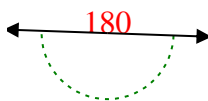
7)



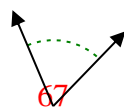
8)



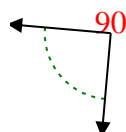
9)



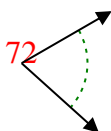
10)



11)



12)



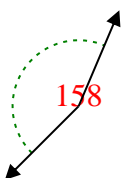
13)



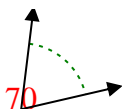
14)



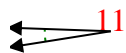
15)



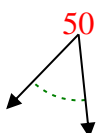
16)



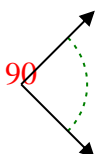
17)



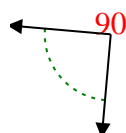
18)



19)



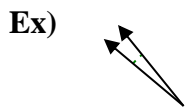
20)



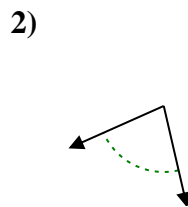
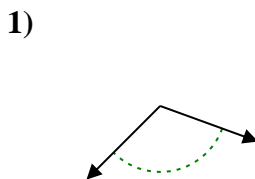


Determine if the angle shown is acute, obtuse, right or straight.

Answers

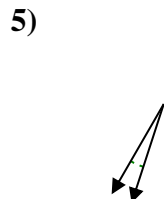
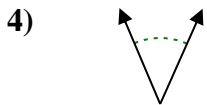
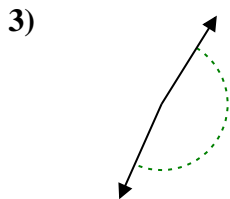


Ex. acute



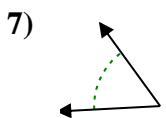
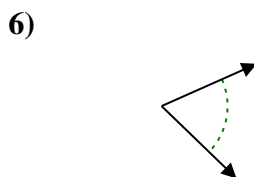
1. _____

2. _____



3. _____

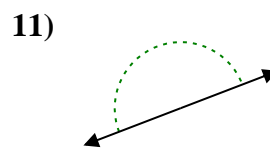
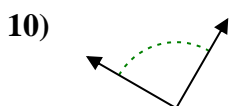
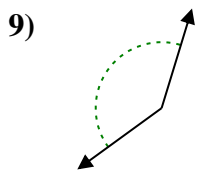
4. _____



5. _____

6. _____

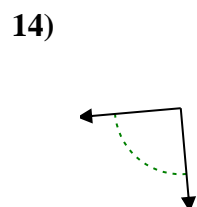
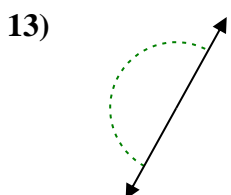
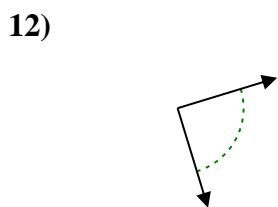
7. _____



8. _____

9. _____

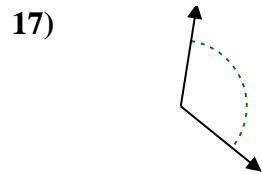
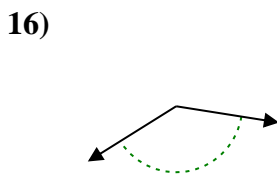
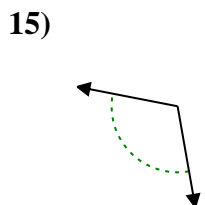
10. _____



11. _____

12. _____

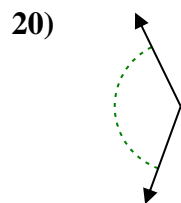
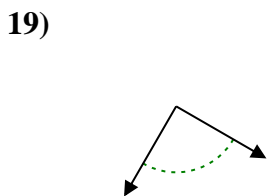
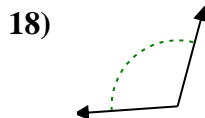
13. _____



14. _____

15. _____

16. _____



17. _____

18. _____

19. _____

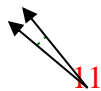
20. _____

20. _____

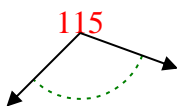


Determine if the angle shown is acute, obtuse, right or straight.

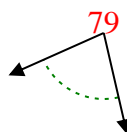
Ex)



1)



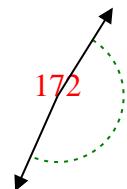
2)



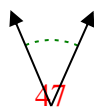
Answers

Ex. **acute**

3)



4)



5)



1. **obtuse**

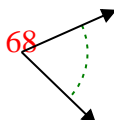
2. **acute**

3. **obtuse**

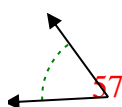
4. **acute**

5. **acute**

6)



7)



8)



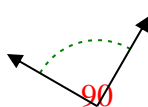
6. **acute**

7. **acute**

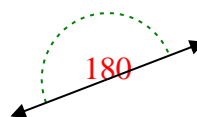
9)



10)



11)



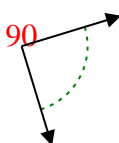
8. **acute**

9. **obtuse**

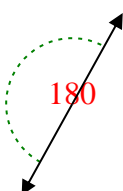
10. **right**

11. **straight**

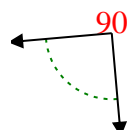
12)



13)



14)

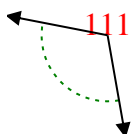


12. **right**

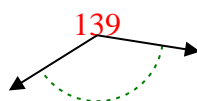
13. **straight**

14. **right**

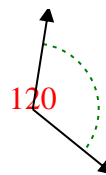
15)



16)



17)

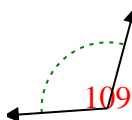


15. **obtuse**

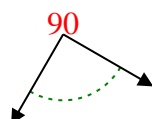
16. **obtuse**

17. **obtuse**

18)



19)



20)



18. **obtuse**

19. **right**

20. **obtuse**



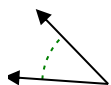
Determine if the angle shown is acute, obtuse, right or straight.

Answers

Ex)



1)



2)

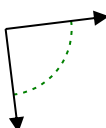


Ex. **acute**

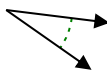
1. _____

2. _____

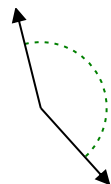
3)



4)



5)



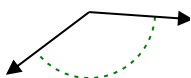
3. _____

4. _____

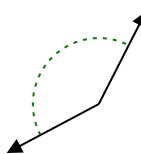
6)



7)



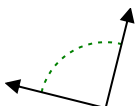
8)



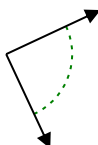
5. _____

6. _____

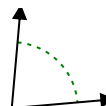
9)



10)



11)



7. _____

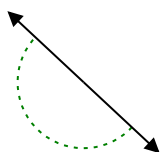
8. _____

9. _____

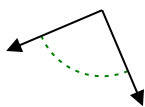
10. _____

11. _____

12)



13)



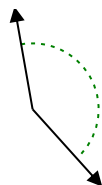
14)



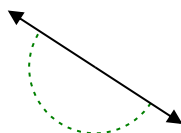
12. _____

13. _____

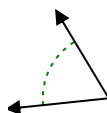
15)



16)



17)



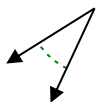
14. _____

15. _____

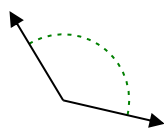
16. _____

17. _____

18)



19)



20)



18. _____

19. _____

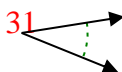
20. _____

20. _____

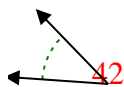


Determine if the angle shown is acute, obtuse, right or straight.

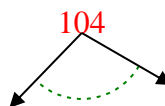
Ex)



1)



2)



Ex. **acute**

1. **acute**

2. **obtuse**

3. **right**

4. **acute**

5. **obtuse**

6. **acute**

7. **obtuse**

8. **obtuse**

9. **right**

10. **right**

11. **acute**

12. **straight**

13. **right**

14. **obtuse**

15. **obtuse**

16. **straight**

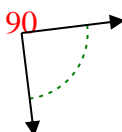
17. **acute**

18. **acute**

19. **obtuse**

20. **obtuse**

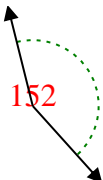
3)



4)



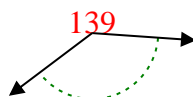
5)



6)



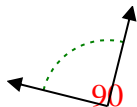
7)



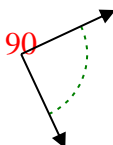
8)



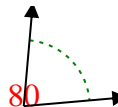
9)



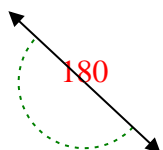
10)



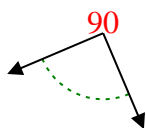
11)



12)



13)



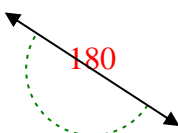
14)



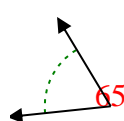
15)



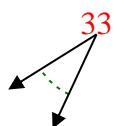
16)



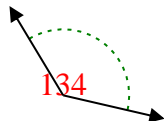
17)



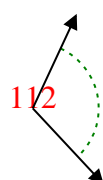
18)



19)



20)

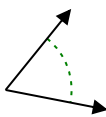




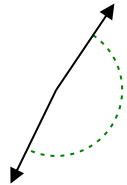
Determine if the angle shown is acute, obtuse, right or straight.

Answers

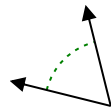
Ex)



1)



2)

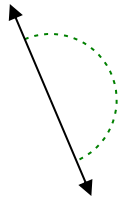


Ex. **acute**

1. _____

2. _____

3)



4)



5)



3. _____

4. _____

5. _____

6)



7)



8)

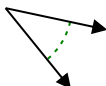


6. _____

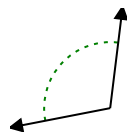
7. _____

8. _____

9)



10)



11)



9. _____

10. _____

11. _____

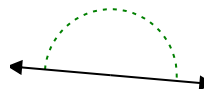
12)



13)



14)

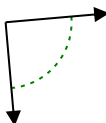


12. _____

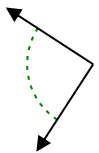
13. _____

14. _____

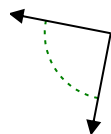
15)



16)



17)



15. _____

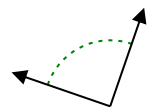
16. _____

17. _____

18)



19)



20)



18. _____

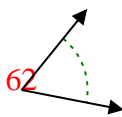
19. _____

20. _____

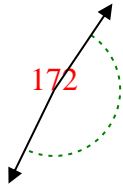


Determine if the angle shown is acute, obtuse, right or straight.

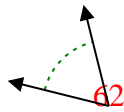
Ex)



1)



2)

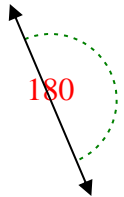


Ex. acute

1. obtuse

2. acute

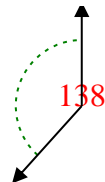
3)



4)



5)



3. straight

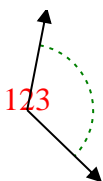
4. acute

5. obtuse

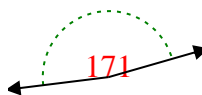
6)



7)



8)

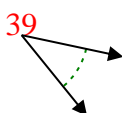


6. obtuse

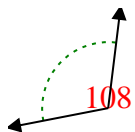
7. obtuse

8. obtuse

9)



10)



11)



9. acute

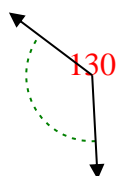
10. obtuse

11. acute

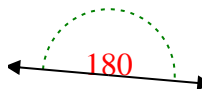
12)



13)



14)

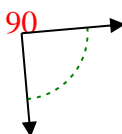


12. acute

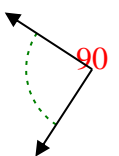
13. obtuse

14. straight

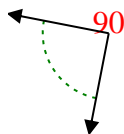
15)



16)



17)

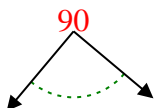


15. right

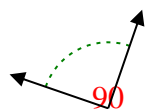
16. right

17. right

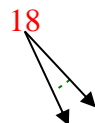
18)



19)



20)



18. right

19. right

20. acute