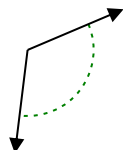




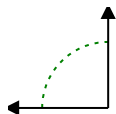
Determine if the angle shown is acute, obtuse, right or straight.

Answers

Ex)



1)



2)



Ex. **obtuse**

1. \_\_\_\_\_

2. \_\_\_\_\_

3. \_\_\_\_\_

4. \_\_\_\_\_

5. \_\_\_\_\_

6. \_\_\_\_\_

7. \_\_\_\_\_

8. \_\_\_\_\_

9. \_\_\_\_\_

10. \_\_\_\_\_

11. \_\_\_\_\_

12. \_\_\_\_\_

13. \_\_\_\_\_

14. \_\_\_\_\_

15. \_\_\_\_\_

16. \_\_\_\_\_

17. \_\_\_\_\_

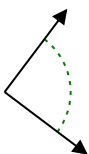
18. \_\_\_\_\_

19. \_\_\_\_\_

20. \_\_\_\_\_

20. \_\_\_\_\_

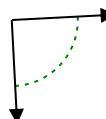
3)



4)



5)



6)



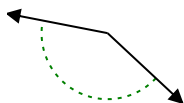
7)



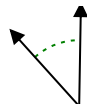
8)



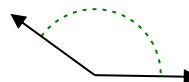
9)



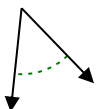
10)



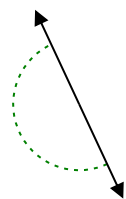
11)



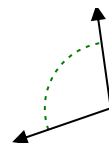
12)



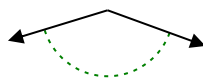
13)



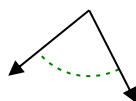
14)



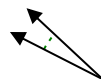
15)



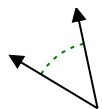
16)



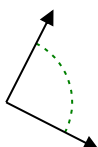
17)



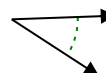
18)



19)



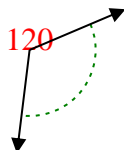
20)



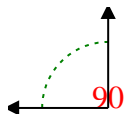


Determine if the angle shown is acute, obtuse, right or straight.

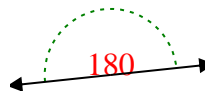
Ex)



1)



2)



Answers

Ex. **obtuse**

1. **right**

2. **straight**

3. **right**

4. **acute**

5. **right**

6. **obtuse**

7. **obtuse**

8. **acute**

9. **obtuse**

10. **acute**

11. **obtuse**

12. **acute**

13. **straight**

14. **obtuse**

15. **obtuse**

16. **acute**

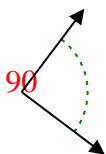
17. **acute**

18. **acute**

19. **right**

20. **acute**

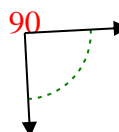
3)



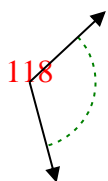
4)



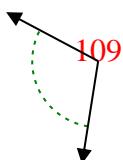
5)



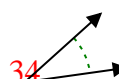
6)



7)



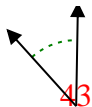
8)



9)



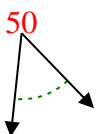
10)



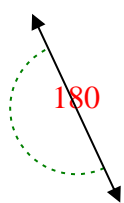
11)



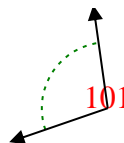
12)



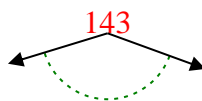
13)



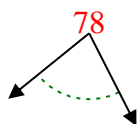
14)



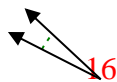
15)



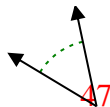
16)



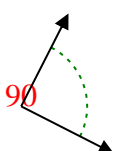
17)



18)



19)



20)

