



Solve each problem using a tape diagram.

Answers

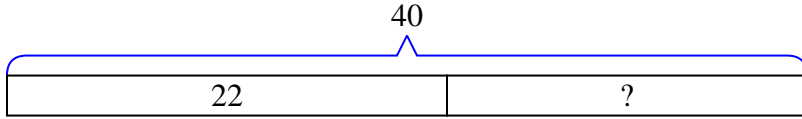
- 1) At the arcade John had won 40 tickets total. He won 22 of them while playing Whack-A-Mole and the rest while playing Stop-The-Light. How many tickets did John win playing Stop-The-Light?
- 2) There were 55 people on the train. At the first stop 25 people got off. How many people are left on the train?
- 3) Billy owned 64 video games for his Playstation and Xbox. 22 of the games were for Xbox. How many games does Billy have for playstation?
- 4) A waiter has 86 customers. If 36 left, how many customers would the waiter still have?
- 5) Cody had 53 apps on his phone. He deleted 39 of them. How many apps does Cody have left?
- 6) For a party Kaleb bought 59 cupcakes. If 36 were eaten, how many cupcakes would Kaleb have left?
- 7) Maria had 33 3DS games. If she gave 19 to her friend, how many would she have left?

1. _____
2. _____
3. _____
4. _____
5. _____
6. _____
7. _____

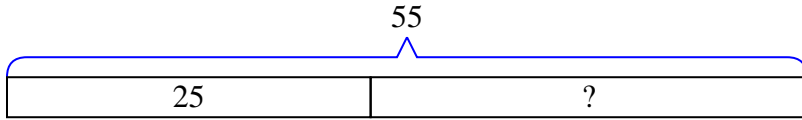


Solve each problem using a tape diagram.

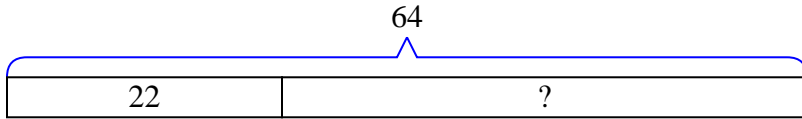
- 1) At the arcade John had won 40 tickets total. He won 22 of them while playing Whack-A-Mole and the rest while playing Stop-The-Light. How many tickets did John win playing Stop-The-Light?



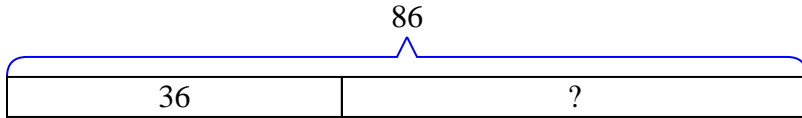
- 2) There were 55 people on the train. At the first stop 25 people got off. How many people are left on the train?



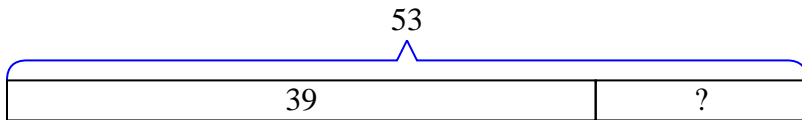
- 3) Billy owned 64 video games for his Playstation and Xbox. 22 of the games were for Xbox. How many games does Billy have for playstation?



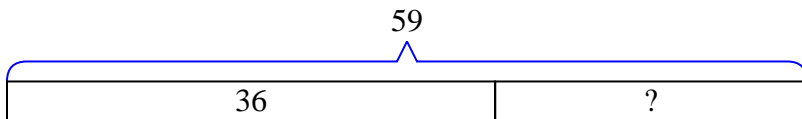
- 4) A waiter has 86 customers. If 36 left, how many customers would the waiter still have?



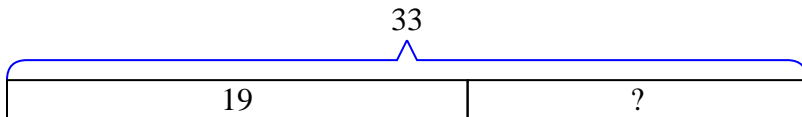
- 5) Cody had 53 apps on his phone. He deleted 39 of them. How many apps does Cody have left?



- 6) For a party Kaleb bought 59 cupcakes. If 36 were eaten, how many cupcakes would Kaleb have left?



- 7) Maria had 33 3DS games. If she gave 19 to her friend, how many would she have left?

Answers1. 182. 303. 424. 505. 146. 237. 14