



Solve each problem using a tape diagram.

Answers

- 1) A store sold 50 C batteries in a day. They sold 3 as many AAA batteries as C batteries and 3 times as many AA as AAA batteries. How many batteries did they sell total?

- 2) An ice cream shop sold 37 waffle cones. They sold 8 times as many sugar cones as waffle cones and 3 times as many wafer cones as sugar cones. How many cones did they sell total?

- 3) A school principal was looking over grades. In math 22 students scored a C. 3 times as many students scored a B. And 6 times as many students scored an A as scored a B. How many students scored an A, B or C?

- 4) On week 1 a football player jogged for 29 minutes. On week 2 he jogged for 2 times as long. On week 3 he jogged for 5 times as long as he jogged on week 2. How many minute did he jog across all 3 weeks?

- 5) An ice cream shop sold 41 waffle cones. They sold 2 times as many sugar cones as waffle cones and 2 times as many wafer cones as sugar cones. How many cones did they sell total?

1. _____

2. _____

3. _____

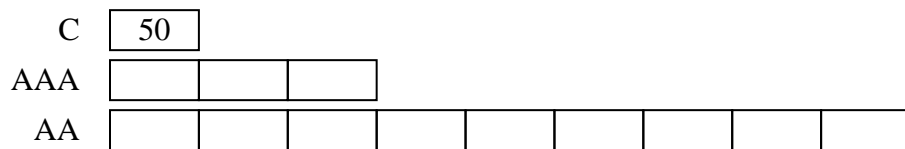
4. _____

5. _____

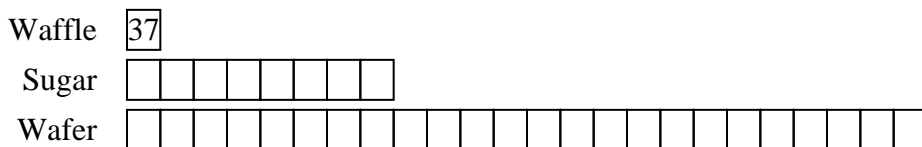


Solve each problem using a tape diagram.

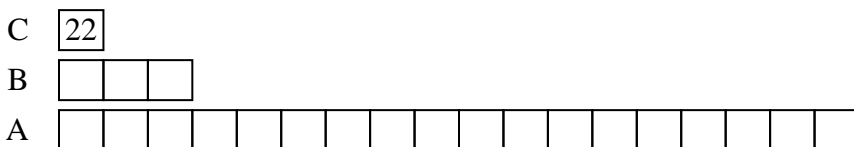
- 1) A store sold 50 C batteries in a day. They sold 3 as many AAA batteries as C batteries and 3 times as many AA as AAA batteries. How many batteries did they sell total?




- 2) An ice cream shop sold 37 waffle cones. They sold 8 times as many sugar cones as waffle cones and 3 times as many wafer cones as sugar cones. How many cones did they sell total?



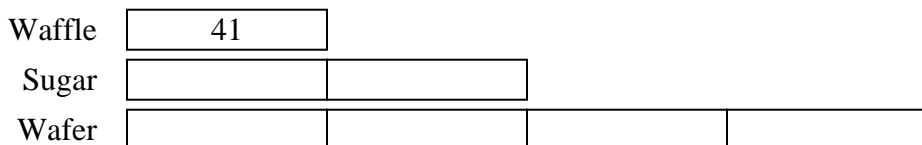
- 3) A school principal was looking over grades. In math 22 students scored a C. 3 times as many students scored a B. And 6 times as many students scored an A as scored a B. How many students scored an A, B or C?



- 4) On week 1 a football player jogged for 29 minutes. On week 2 he jogged for 2 times as long. On week 3 he jogged for 5 times as long as he jogged on week 2. How many minute did he jog across all 3 weeks?



- 5) An ice cream shop sold 41 waffle cones. They sold 2 times as many sugar cones as waffle cones and 2 times as many wafer cones as sugar cones. How many cones did they sell total?



Answers

1. 650
2. 1221
3. 484
4. 377
5. 287



Solve each problem using a tape diagram.

Answers

1) On week 1 a football player jogged for 46 minutes. On week 2 he jogged for 7 times as long. On week 3 he jogged for 9 times as long as he jogged on week 2. How many minute did he jog across all 3 weeks?

1. _____

2. _____

3. _____

4. _____

2) In one day a restaurant used 11 knives. They also used 2 as many forks as they used knives. And 2 times as many spoons as forks. How many utensils do they use in a day?

5. _____

3) Chef Cody buys 35 carrots. He buys 2 times as many potatoes as carrots and 3 times as many tomatoes as potatoes. How many vegetables did he buy all together?

4) An ice cream shop sold 18 waffle cones. They sold 4 times as many sugar cones as waffle cones and 2 times as many wafer cones as sugar cones. How many cones did they sell total?

5) A school principal was looking over grades. In math 12 students scored a C. 3 times as many students scored a B. And 3 times as many students scored an A as scored a B. How many students scored an A, B or C?



Solve each problem using a tape diagram.

Answers

- 1) On week 1 a football player jogged for 18 minutes. On week 2 he jogged for 3 times as long. On week 3 he jogged for 2 times as long as he jogged on week 2. How many minutes did he jog across all 3 weeks?

- 2) An ice cream shop sold 30 waffle cones. They sold 3 times as many sugar cones as waffle cones and 3 times as many wafer cones as sugar cones. How many cones did they sell total?

- 3) In one day a restaurant used 22 knives. They also used 3 as many forks as they used knives. And 2 times as many spoons as forks. How many utensils do they use in a day?

- 4) An ice cream shop sold 27 waffle cones. They sold 4 times as many sugar cones as waffle cones and 8 times as many wafer cones as sugar cones. How many cones did they sell total?

- 5) Chef Cody buys 29 carrots. He buys 4 times as many potatoes as carrots and 7 times as many tomatoes as potatoes. How many vegetables did he buy all together?

1. _____
2. _____
3. _____
4. _____
5. _____



Solve each problem using a tape diagram.

- 1) On week 1 a football player jogged for 18 minutes. On week 2 he jogged for 3 times as long. On week 3 he jogged for 2 times as long as he jogged on week 2. How many minute did he jog across all 3 weeks?

Week 1

Week 2

Week 3

- 2) An ice cream shop sold 30 waffle cones. They sold 3 times as many sugar cones as waffle cones and 3 times as many wafer cones as sugar cones. How many cones did they sell total?

Waffle

Sugar

Wafer

- 3) In one day a restaurant used 22 knives. They also used 3 as many forks as they used knives. And 2 times as many spoons as forks. How many utensils do they use in a day?

knives

forks

spoons

- 4) An ice cream shop sold 27 waffle cones. They sold 4 times as many sugar cones as waffle cones and 8 times as many wafer cones as sugar cones. How many cones did they sell total?

Waffle

Sugar

Wafer

- 5) Chef Cody buys 29 carrots. He buys 4 times as many potatoes as carrots and 7 times as many tomatoes as potatoes. How many vegetables did he buy all together?

Carrots

Potatoes

Tomatoes

Answers

1. 180

2. 390

3. 220

4. 999

5. 957



Solve each problem using a tape diagram.

Answers

- 1) An ice cream shop sold 29 waffle cones. They sold 2 times as many sugar cones as waffle cones and 3 times as many wafer cones as sugar cones. How many cones did they sell total?

- 2) In one day a restaurant used 50 knives. They also used 3 as many forks as they used knives. And 2 times as many spoons as forks. How many utensils do they use in a day?

- 3) An ice cream shop sold 28 waffle cones. They sold 3 times as many sugar cones as waffle cones and 9 times as many wafer cones as sugar cones. How many cones did they sell total?

- 4) On week 1 a football player jogged for 13 minutes. On week 2 he jogged for 4 times as long. On week 3 he jogged for 3 times as long as he jogged on week 2. How many minute did he jog across all 3 weeks?

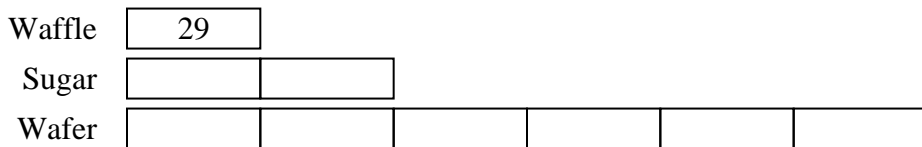
- 5) A school principal was looking over grades. In math 40 students scored a C. 4 times as many students scored a B. And 7 times as many students scored an A as scored a B. How many students scored an A, B or C?

1. _____
2. _____
3. _____
4. _____
5. _____

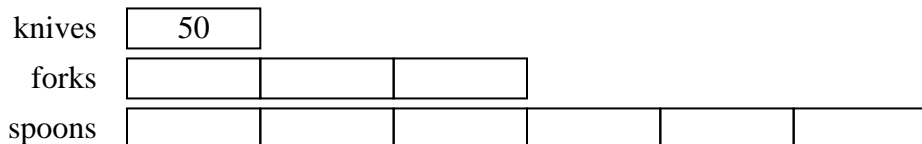


Solve each problem using a tape diagram.

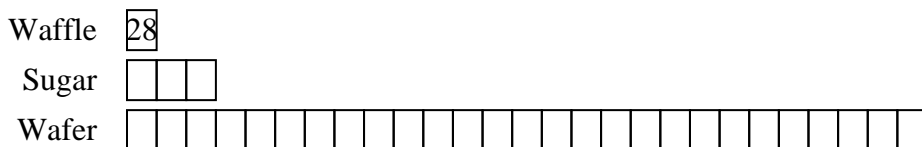
- 1) An ice cream shop sold 29 waffle cones. They sold 2 times as many sugar cones as waffle cones and 3 times as many wafer cones as sugar cones. How many cones did they sell total?



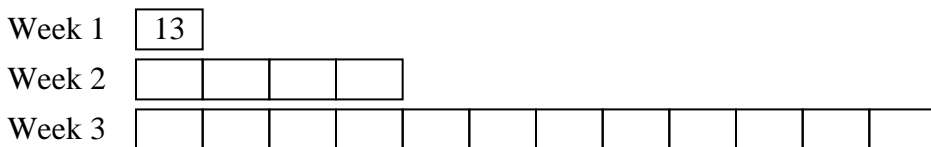
- 2) In one day a restaurant used 50 knives. They also used 3 as many forks as they used knives. And 2 times as many spoons as forks. How many utensils do they use in a day?



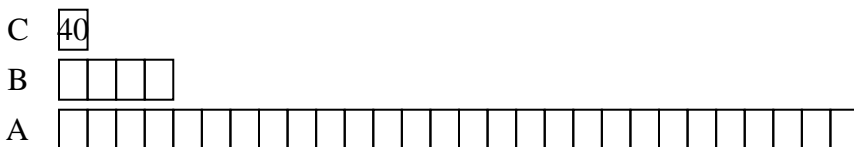
- 3) An ice cream shop sold 28 waffle cones. They sold 3 times as many sugar cones as waffle cones and 9 times as many wafer cones as sugar cones. How many cones did they sell total?



- 4) On week 1 a football player jogged for 13 minutes. On week 2 he jogged for 4 times as long. On week 3 he jogged for 3 times as long as he jogged on week 2. How many minute did he jog across all 3 weeks?



- 5) A school principal was looking over grades. In math 40 students scored a C. 4 times as many students scored a B. And 7 times as many students scored an A as scored a B. How many students scored an A, B or C?



Answers

1. 261

2. 500

3. 868

4. 221

5. 1320



Solve each problem using a tape diagram.

Answers

1) On week 1 a football player jogged for 37 minutes. On week 2 he jogged for 7 times as long. On week 3 he jogged for 4 times as long as he jogged on week 2. How many minutes did he jog across all 3 weeks?

1. _____

2. _____

3. _____

4. _____

5. _____

2) A school principal was looking over grades. In math 30 students scored a C. 2 times as many students scored a B. And 2 times as many students scored an A as scored a B. How many students scored an A, B or C?

3) An ice cream shop sold 19 waffle cones. They sold 5 times as many sugar cones as waffle cones and 6 times as many wafer cones as sugar cones. How many cones did they sell total?

4) Chef Paul buys 20 carrots. He buys 5 times as many potatoes as carrots and 7 times as many tomatoes as potatoes. How many vegetables did he buy all together?

5) A store sold 14 C batteries in a day. They sold 2 as many AAA batteries as C batteries and 2 times as many AA as AAA batteries. How many batteries did they sell total?



Solve each problem using a tape diagram.

Answers

1) A school principal was looking over grades. In math 29 students scored a C. 2 times as many students scored a B. And 3 times as many students scored an A as scored a B. How many students scored an A, B or C?

1. _____

2. _____

3. _____

4. _____

5. _____

2) On week 1 a football player jogged for 22 minutes. On week 2 he jogged for 3 times as long. On week 3 he jogged for 2 times as long as he jogged on week 2. How many minute did he jog across all 3 weeks?

3) In one day a restaurant used 43 knives. They also used 2 as many forks as they used knives. And 3 times as many spoons as forks. How many utensils do they use in a day?


4) On week 1 a football player jogged for 33 minutes. On week 2 he jogged for 6 times as long. On week 3 he jogged for 8 times as long as he jogged on week 2. How many minute did he jog across all 3 weeks?

5) A school principal was looking over grades. In math 41 students scored a C. 4 times as many students scored a B. And 9 times as many students scored an A as scored a B. How many students scored an A, B or C?




Solve each problem using a tape diagram.

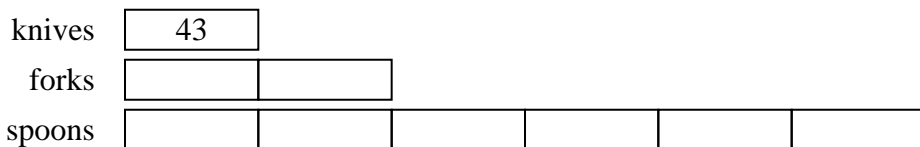
- 1) A school principal was looking over grades. In math 29 students scored a C. 2 times as many students scored a B. And 3 times as many students scored an A as scored a B. How many students scored an A, B or C?




- 2) On week 1 a football player jogged for 22 minutes. On week 2 he jogged for 3 times as long. On week 3 he jogged for 2 times as long as he jogged on week 2. How many minute did he jog across all 3 weeks?



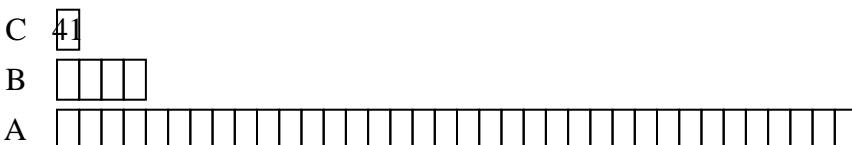
- 3) In one day a restaurant used 43 knives. They also used 2 as many forks as they used knives. And 3 times as many spoons as forks. How many utensils do they use in a day?



- 4) On week 1 a football player jogged for 33 minutes. On week 2 he jogged for 6 times as long. On week 3 he jogged for 8 times as long as he jogged on week 2. How many minute did he jog across all 3 weeks?



- 5) A school principal was looking over grades. In math 41 students scored a C. 4 times as many students scored a B. And 9 times as many students scored an A as scored a B. How many students scored an A, B or C?



Answers

- 1. **261**
- 2. **220**
- 3. **387**
- 4. **1815**
- 5. **1681**



Solve each problem using a tape diagram.

Answers

1) A school principal was looking over grades. In math 34 students scored a C. 4 times as many students scored a B. And 2 times as many students scored an A as scored a B. How many students scored an A, B or C?

1. _____

2. _____

3. _____

4. _____

5. _____

2) On week 1 a football player jogged for 24 minutes. On week 2 he jogged for 4 times as long. On week 3 he jogged for 8 times as long as he jogged on week 2. How many minute did he jog across all 3 weeks?

3) A store sold 44 C batteries in a day. They sold 8 as many AAA batteries as C batteries and 8 times as many AA as AAA batteries. How many batteries did they sell total?

4) In one day a restaurant used 39 knives. They also used 4 as many forks as they used knives. And 3 times as many spoons as forks. How many utensils do they use in a day?

5) In one day a restaurant used 16 knives. They also used 2 as many forks as they used knives. And 9 times as many spoons as forks. How many utensils do they use in a day?



Solve each problem using a tape diagram.

Answers

1) A school principal was looking over grades. In math 40 students scored a C. 9 times as many students scored a B. And 9 times as many students scored an A as scored a B. How many students scored an A, B or C?

1. _____

2. _____

3. _____

4. _____

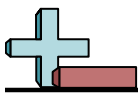
2) Chef Edward buys 42 carrots. He buys 2 times as many potatoes as carrots and 4 times as many tomatoes as potatoes. How many vegetables did he buy all together?

5. _____

3) A store sold 26 C batteries in a day. They sold 2 as many AAA batteries as C batteries and 3 times as many AA as AAA batteries. How many batteries did they sell total?

4) An ice cream shop sold 19 waffle cones. They sold 2 times as many sugar cones as waffle cones and 2 times as many wafer cones as sugar cones. How many cones did they sell total?

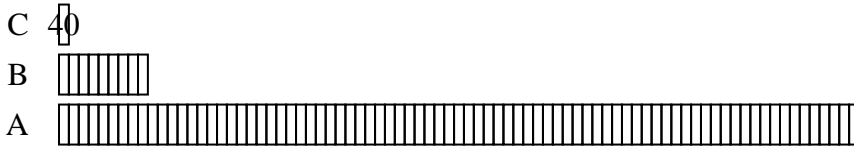
5) An ice cream shop sold 27 waffle cones. They sold 6 times as many sugar cones as waffle cones and 4 times as many wafer cones as sugar cones. How many cones did they sell total?



Solve each problem using a tape diagram.

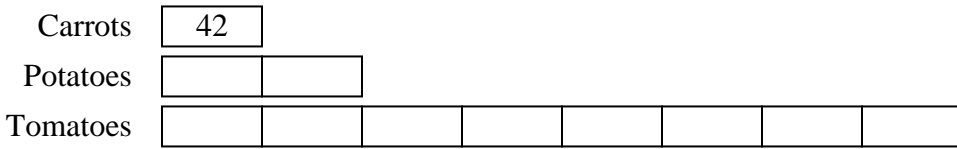
Answers

- 1) A school principal was looking over grades. In math 40 students scored a C. 9 times as many students scored a B. And 9 times as many students scored an A as scored a B. How many students scored an A, B or C?



1. 3640

- 2) Chef Edward buys 42 carrots. He buys 2 times as many potatoes as carrots and 4 times as many tomatoes as potatoes. How many vegetables did he buy all together?




2. 462

3. 234

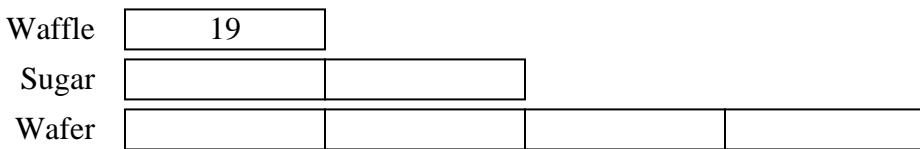
4. 133

5. 837

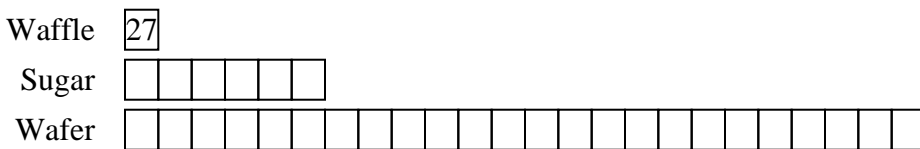
- 3) A store sold 26 C batteries in a day. They sold 2 as many AAA batteries as C batteries and 3 times as many AA as AAA batteries. How many batteries did they sell total?



- 4) An ice cream shop sold 19 waffle cones. They sold 2 times as many sugar cones as waffle cones and 2 times as many wafer cones as sugar cones. How many cones did they sell total?



- 5) An ice cream shop sold 27 waffle cones. They sold 6 times as many sugar cones as waffle cones and 4 times as many wafer cones as sugar cones. How many cones did they sell total?





Solve each problem using a tape diagram.

Answers

1) A store sold 47 C batteries in a day. They sold 6 as many AAA batteries as C batteries and 5 times as many AA as AAA batteries. How many batteries did they sell total?

1. _____

2) Chef Luke buys 28 carrots. He buys 3 times as many potatoes as carrots and 3 times as many tomatoes as potatoes. How many vegetables did he buy all together?

2. _____

3. _____

3) In one day a restaurant used 24 knives. They also used 6 as many forks as they used knives. And 2 times as many spoons as forks. How many utensils do they use in a day?

4. _____

5. _____

4) In one day a restaurant used 18 knives. They also used 4 as many forks as they used knives. And 3 times as many spoons as forks. How many utensils do they use in a day?

5) Chef George buys 25 carrots. He buys 7 times as many potatoes as carrots and 6 times as many tomatoes as potatoes. How many vegetables did he buy all together?



Solve each problem using a tape diagram.

Answers

1) On week 1 a football player jogged for 38 minutes. On week 2 he jogged for 6 times as long. On week 3 he jogged for 4 times as long as he jogged on week 2. How many minutes did he jog across all 3 weeks?

1. _____

2. _____

3. _____

4. _____

2) A store sold 11 C batteries in a day. They sold 5 as many AAA batteries as C batteries and 9 times as many AA as AAA batteries. How many batteries did they sell total?

5. _____

3) Chef Victor buys 24 carrots. He buys 3 times as many potatoes as carrots and 2 times as many tomatoes as potatoes. How many vegetables did he buy all together?

4) A school principal was looking over grades. In math 26 students scored a C. 3 times as many students scored a B. And 3 times as many students scored an A as scored a B. How many students scored an A, B or C?

5) In one day a restaurant used 47 knives. They also used 4 as many forks as they used knives. And 3 times as many spoons as forks. How many utensils do they use in a day?

