



Solve each problem.

Answers

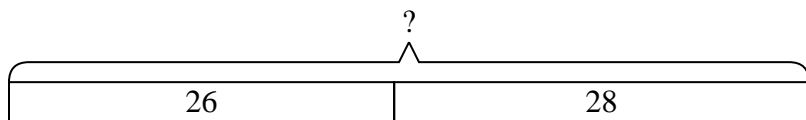
- 1) In the first half of a trivia game John scored 26 points. In the second half he scored 28 points. How many points did he score total?
  
- 2) Kristine had \$25 and Tiffany had \$30. If they combined their money, how much would they have?
  
- 3) A fast food restaurant sold 22 small hotdogs and 42 large hotdogs. How many hotdogs did they sell total?
  
- 4) A pet store had 36 birds that talked and 50 that didn't. How many birds did the pet store have total?
  
- 5) Cody owned 29 baseball cards. For his birthday he got 39 more. How many cards does Cody have total?
  
- 6) Kaleb had 36 dollars saved up. After doing some chores his mother gave him another 23 dollars. How much money does he have total?
  
- 7) Maria had 19 books. If she bought 39 more at a yard sale how many would she have total?

1. \_\_\_\_\_
2. \_\_\_\_\_
3. \_\_\_\_\_
4. \_\_\_\_\_
5. \_\_\_\_\_
6. \_\_\_\_\_
7. \_\_\_\_\_

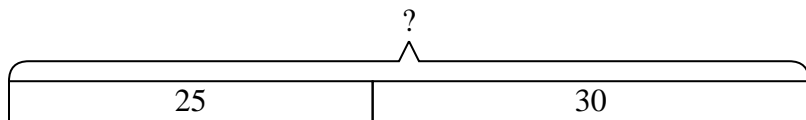


Solve each problem.

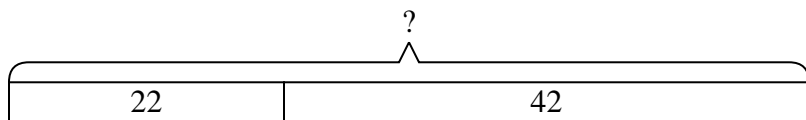
- 1) In the first half of a trivia game John scored 26 points. In the second half he scored 28 points. How many points did he score total?



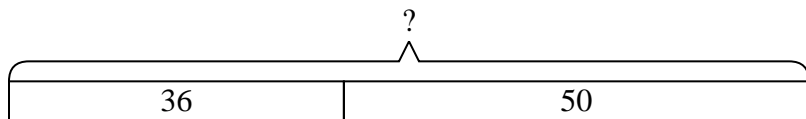
- 2) Kristine had \$25 and Tiffany had \$30. If they combined their money, how much would they have?



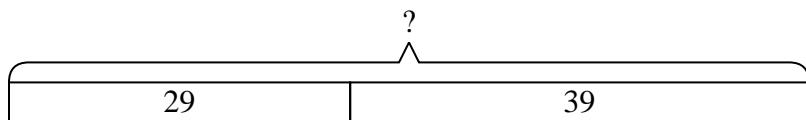
- 3) A fast food restaurant sold 22 small hotdogs and 42 large hotdogs. How many hotdogs did they sell total?



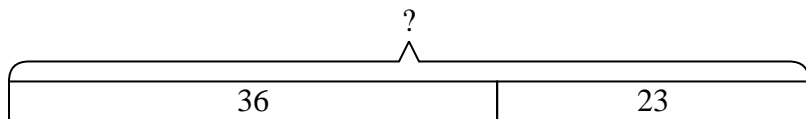
- 4) A pet store had 36 birds that talked and 50 that didn't. How many birds did the pet store have total?



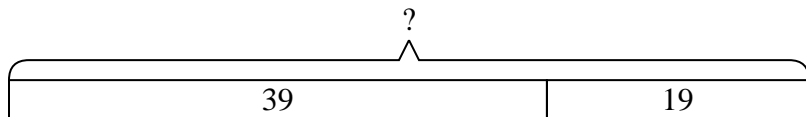
- 5) Cody owned 29 baseball cards. For his birthday he got 39 more. How many cards does Cody have total?



- 6) Kaleb had 36 dollars saved up. After doing some chores his mother gave him another 23 dollars. How much money does he have total?



- 7) Maria had 19 books. If she bought 39 more at a yard sale how many would she have total?



Answers

1. 54

2. 55

3. 64

4. 86

5. 68

6. 59

7. 58