



Solve each problem.

Answers

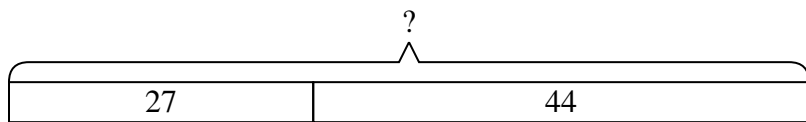
- 1) A farmer planted 27 seeds on Wednesday and another 44 seeds on Thursday. How many seeds did he plant total?
  
- 2) Carol spent 38 minutes drawing at school and 22 minutes drawing at home. How many minutes total did she spend drawing?
  
- 3) A fast food restaurant sold 35 small hotdogs and 45 large hotdogs. How many hotdogs did they sell total?
  
- 4) Will had 18 books. During the book fair he bought 50 more. How many books did Will have total?
  
- 5) A store has 12 shirts. Later they got in 41 more shirts. How many shirts does the store have now?
  
- 6) Vanessa went to the movies 44 times last year and 36 times this year. How many times did Vanessa go to the movies total?
  
- 7) For Halloween Ned got 33 ounces of candy and Olivia got 46 ounces of candy. What is the combined weight they received?

- 1. \_\_\_\_\_
- 2. \_\_\_\_\_
- 3. \_\_\_\_\_
- 4. \_\_\_\_\_
- 5. \_\_\_\_\_
- 6. \_\_\_\_\_
- 7. \_\_\_\_\_

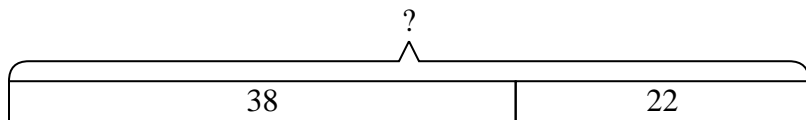


Solve each problem.

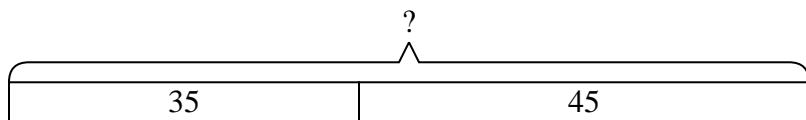
- 1) A farmer planted 27 seeds on Wednesday and another 44 seeds on Thursday. How many seeds did he plant total?



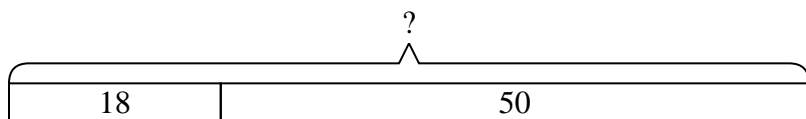
- 2) Carol spent 38 minutes drawing at school and 22 minutes drawing at home. How many minutes total did she spend drawing?



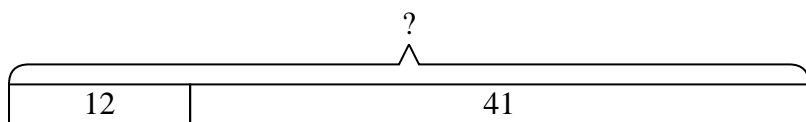
- 3) A fast food restaurant sold 35 small hotdogs and 45 large hotdogs. How many hotdogs did they sell total?



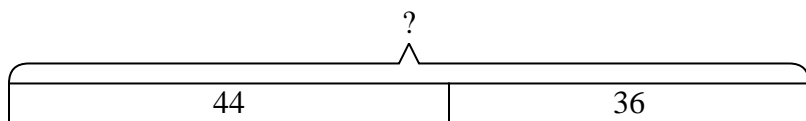
- 4) Will had 18 books. During the book fair he bought 50 more. How many books did Will have total?



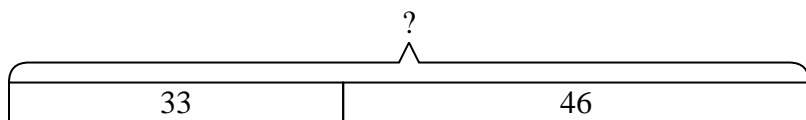
- 5) A store has 12 shirts. Later they got in 41 more shirts. How many shirts does the store have now?



- 6) Vanessa went to the movies 44 times last year and 36 times this year. How many times did Vanessa go to the movies total?



- 7) For Halloween Ned got 33 ounces of candy and Olivia got 46 ounces of candy. What is the combined weight they received?



Answers

1. 71

2. 60

3. 80

4. 68

5. 53

6. 80

7. 79