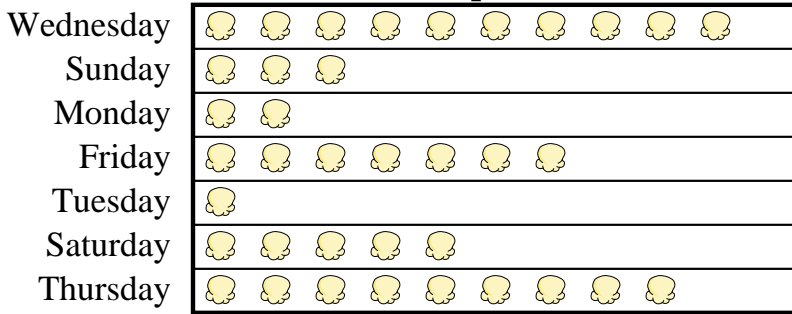




Answers

A movie theater was tracking the number of small popcorns they sold each day. They organized the information in the pictograph below.

Small Popcorns Sold



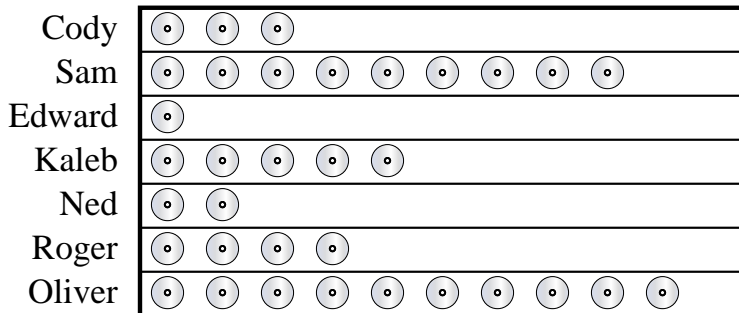
 = 1 Bag Sold

- 1) Which day did they sell the least amount of popcorn?
- 2) Which day did they sell the most popcorn?
- 3) How many bags did they sell on Monday?
- 4) Which day did they sell exactly 7 bags?
- 5) Which day did they sell more popcorn, Wednesday or Sunday?

1. _____
2. _____
3. _____
4. _____
5. _____
6. _____
7. _____
8. _____
9. _____
10. _____

Edward and his friends were comparing the number of movies they owned. They organized the information in the pictograph below.

DVDs owned



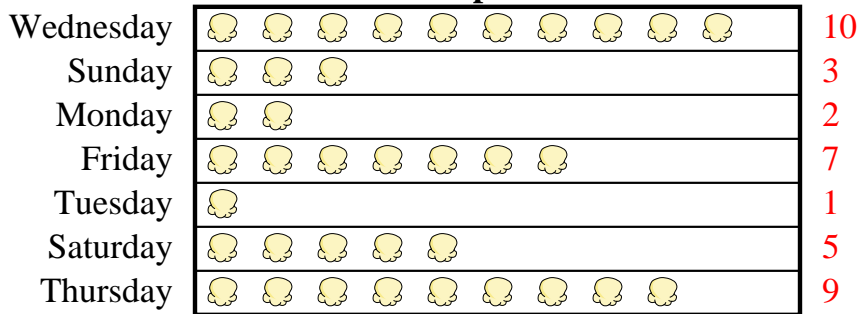
 = 4 DVDs

- 6) Who owned exactly 20 DVDs?
- 7) How many DVDs did Edward own?
- 8) Who had more DVDs, Cody or Sam?
- 9) Who owned the largest number of DVDs?
- 10) Who owned the fewest DVDs?



A movie theater was tracking the number of small popcorns they sold each day. They organized the information in the pictograph below.

Small Popcorns Sold

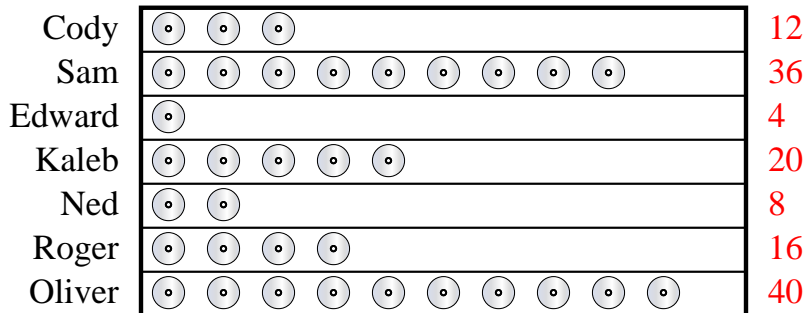


= 1 Bag Sold

- Which day did they sell the least amount of popcorn?
- Which day did they sell the most popcorn?
- How many bags did they sell on Monday?
- Which day did they sell exactly 7 bags?
- Which day did they sell more popcorn, Wednesday or Sunday?

Edward and his friends were comparing the number of movies they owned. They organized the information in the pictograph below.

DVDs owned



= 4 DVDs

- Who owned exactly 20 DVDs?
- How many DVDs did Edward own?
- Who had more DVDs, Cody or Sam?
- Who owned the largest number of DVDs?
- Who owned the fewest DVDs?

Answers

- Tuesday
- Wednesday
- 2
- Friday
- Wednesday
- Kaleb
- 4
- Sam
- Oliver
- Edward