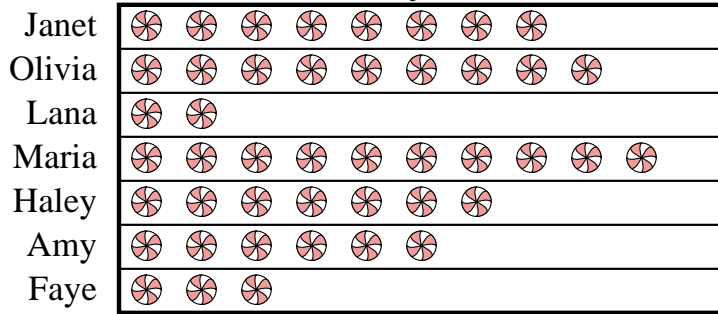




Answers

Faye and her friends were comparing the amount of candy they received on Halloween. They recorded their information in the pictograph below.

Candy Haul




 = 3 kilograms of candy

- How many kilograms of candy did Lana get?
- Who got the most candy?
- Who got exactly 30 kilograms of candy?
- Who got more candy, Janet or Olivia?
- Who got the least amount of candy?

- _____
- _____
- _____
- _____
- _____
- _____
- _____
- _____
- _____
- _____

Dave was recording how many slam dunks his favorite teams scored. He organized the information in the pictograph below.

Slam Dunks



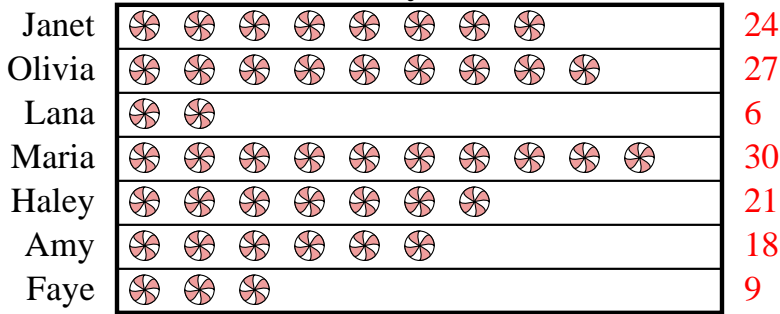
 = 4 slam dunks

- Which team had the largest number of slam dunks?
- Which team had more slam dunks, Warriors or Hawks?
- Which team had the fewest number of slam dunks?
- Which team scored exactly 32 slam dunks?
- How many slam dunks did the Bulls make?



Faye and her friends were comparing the amount of candy they received on Halloween. They recorded their information in the pictograph below.

Candy Haul




= 3 kilograms of candy

- How many kilograms of candy did Lana get?
- Who got the most candy?
- Who got exactly 30 kilograms of candy?
- Who got more candy, Janet or Olivia?
- Who got the least amount of candy?

Dave was recording how many slam dunks his favorite teams scored. He organized the information in the pictograph below.

Slam Dunks



= 4 slam dunks

- Which team had the largest number of slam dunks?
- Which team had more slam dunks, Warriors or Hawks?
- Which team had the fewest number of slam dunks?
- Which team scored exactly 32 slam dunks?
- How many slam dunks did the Bulls make?

Answers

- 6
- Maria
- Maria
- Olivia
- Lana
- Warriors
- Warriors
- Rockets
- Celtics
- 12