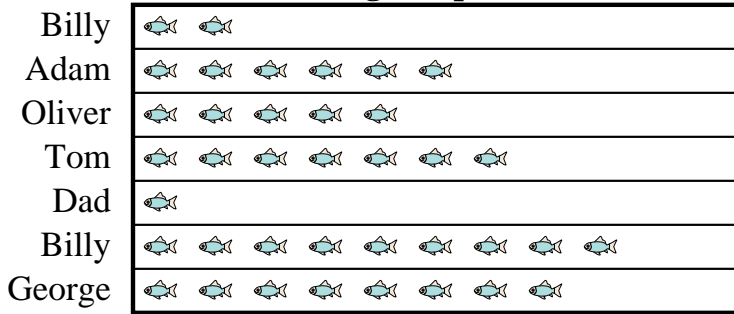





Answers

Adam's father took Adam and 5 friends on a fishing trip. They recorded the number of fish they caught using the pictograph below.

Fishing Trip Results



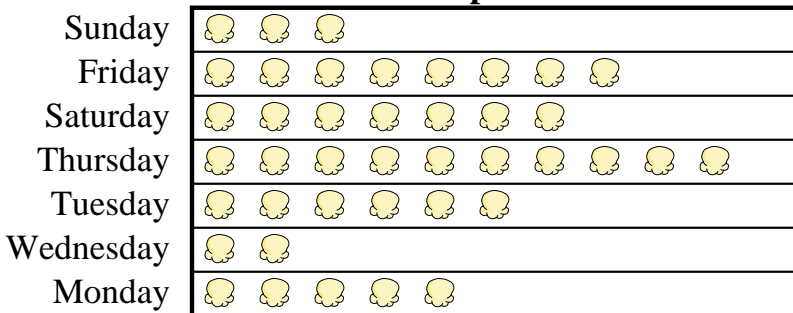
 = 9 Fish Caught

- Who caught more fish, Billy or Adam?
- How many fish did Oliver catch?
- Who caught the most fish?
- Who caught the fewest fish?
- Who caught exactly 63 fish?

- _____
- _____
- _____
- _____
- _____
- _____
- _____
- _____
- _____
- _____

A movie theater was tracking the number of small popcorns they sold each day. They organized the information in the pictograph below.

Small Popcorns Sold



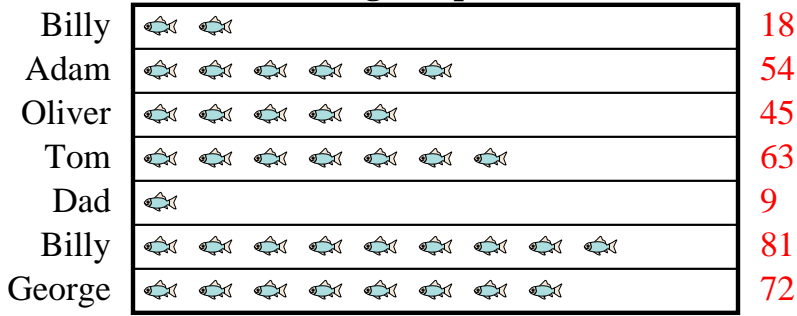
 = 8 Bags Sold

- Which day did they sell exactly 80 bags?
- Which day did they sell the most popcorn?
- Which day did they sell more popcorn, Sunday or Friday?
- How many bags did they sell on Saturday?
- Which day did they sell the least amount of popcorn?



Adam's father took Adam and 5 friends on a fishing trip. They recorded the number of fish they caught using the pictograph below.

Fishing Trip Results

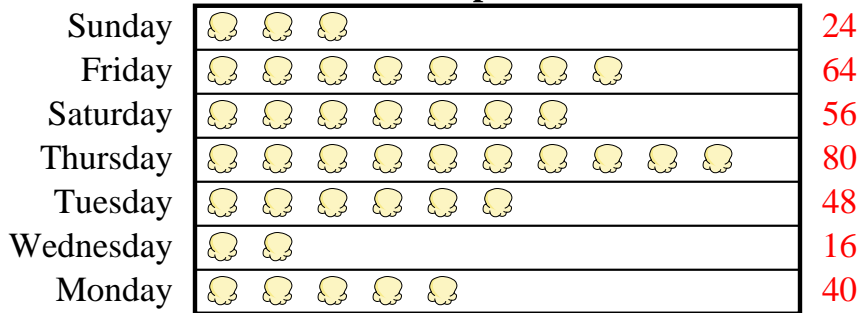


= 9 Fish Caught

- Who caught more fish, Billy or Adam?
- How many fish did Oliver catch?
- Who caught the most fish?
- Who caught the fewest fish?
- Who caught exactly 63 fish?

A movie theater was tracking the number of small popcorns they sold each day. They organized the information in the pictograph below.

Small Popcorns Sold



= 8 Bags Sold

- Which day did they sell exactly 80 bags?
- Which day did they sell the most popcorn?
- Which day did they sell more popcorn, Sunday or Friday?
- How many bags did they sell on Saturday?
- Which day did they sell the least amount of popcorn?

Answers

- Billy**
- 45**
- Billy**
- Dad**
- Tom**
- Thursday**
- Thursday**
- Friday**
- 56**
- Wednesday**