

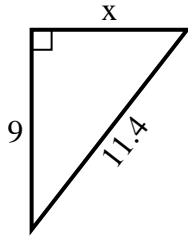


Find the value of X.

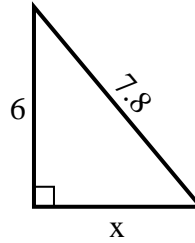
1) perimeter = 20.2 u



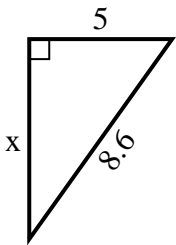
2) perimeter = 27.4 u



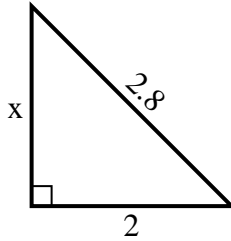
3) perimeter = 18.8 u



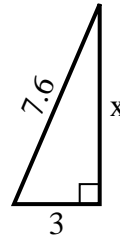
4) perimeter = 20.6 u



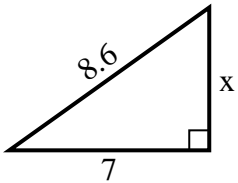
5) perimeter = 6.8 u



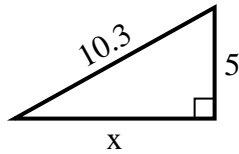
6) perimeter = 17.6 u



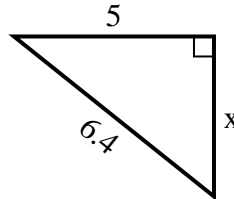
7) perimeter = 20.6 u



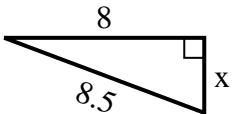
8) perimeter = 24.3 u



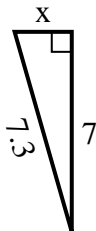
9) perimeter = 15.4 u



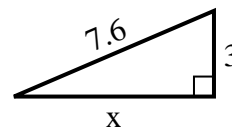
10) perimeter = 19.5 u



11) perimeter = 16.3 u



12) perimeter = 17.6 u



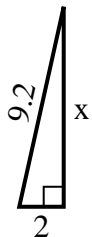
**Answers**

1. \_\_\_\_\_
2. \_\_\_\_\_
3. \_\_\_\_\_
4. \_\_\_\_\_
5. \_\_\_\_\_
6. \_\_\_\_\_
7. \_\_\_\_\_
8. \_\_\_\_\_
9. \_\_\_\_\_
10. \_\_\_\_\_
11. \_\_\_\_\_
12. \_\_\_\_\_

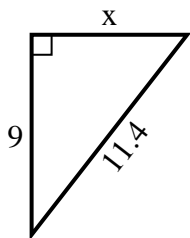


Find the value of X.

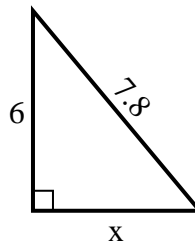
1) perimeter = 20.2 u



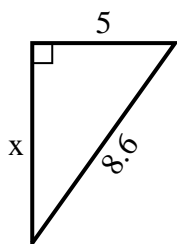
2) perimeter = 27.4 u



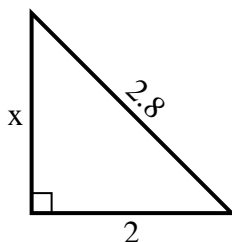
3) perimeter = 18.8 u



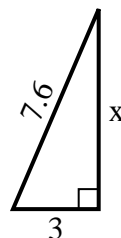
4) perimeter = 20.6 u



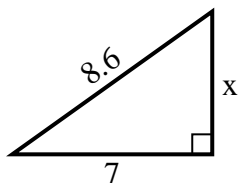
5) perimeter = 6.8 u



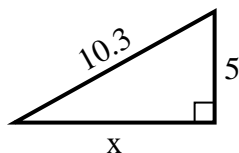
6) perimeter = 17.6 u



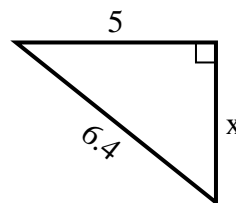
7) perimeter = 20.6 u



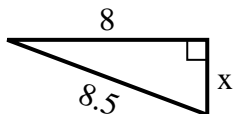
8) perimeter = 24.3 u



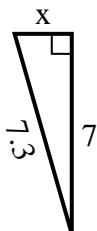
9) perimeter = 15.4 u



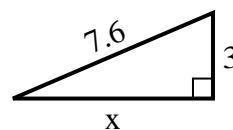
10) perimeter = 19.5 u



11) perimeter = 16.3 u



12) perimeter = 17.6 u



Answers

1. 9

2. 7

3. 5

4. 7

5. 2

6. 7

7. 5

8. 9

9. 4

10. 3

11. 2

12. 7