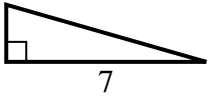


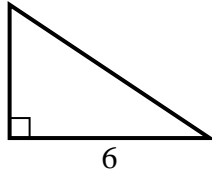


Find the value of X.

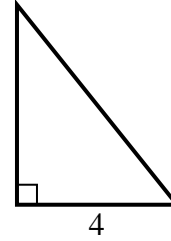
1) area =  $7 u^2$



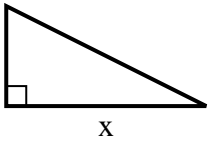
2) area =  $12 u^2$



3) area =  $10 u^2$



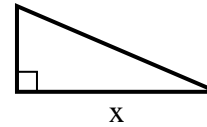
4) area =  $16 u^2$



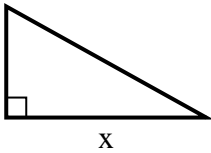
5) area =  $18 u^2$



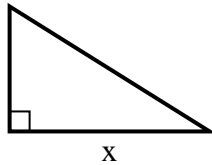
6) area =  $10.5 u^2$



7) area =  $22.5 u^2$



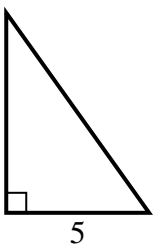
8) area =  $20 u^2$



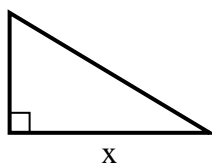
9) area =  $5 u^2$



10) area =  $17.5 u^2$



11) area =  $7.5 u^2$



12) area =  $12 u^2$



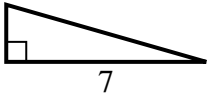
**Answers**

1. \_\_\_\_\_
2. \_\_\_\_\_
3. \_\_\_\_\_
4. \_\_\_\_\_
5. \_\_\_\_\_
6. \_\_\_\_\_
7. \_\_\_\_\_
8. \_\_\_\_\_
9. \_\_\_\_\_
10. \_\_\_\_\_
11. \_\_\_\_\_
12. \_\_\_\_\_

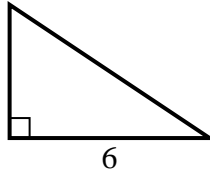


Find the value of X.

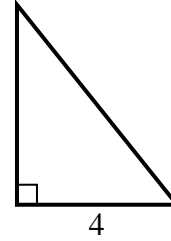
1) area =  $7 u^2$



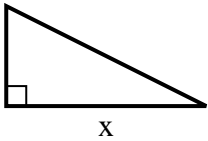
2) area =  $12 u^2$



3) area =  $10 u^2$



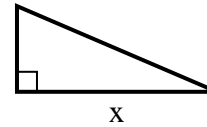
4) area =  $16 u^2$



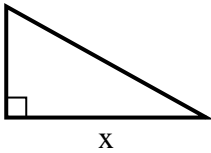
5) area =  $18 u^2$



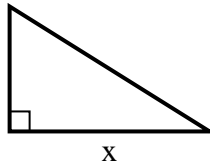
6) area =  $10.5 u^2$



7) area =  $22.5 u^2$



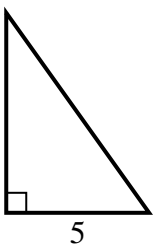
8) area =  $20 u^2$



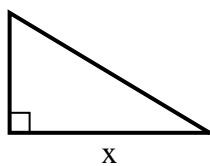
9) area =  $5 u^2$



10) area =  $17.5 u^2$



11) area =  $7.5 u^2$



12) area =  $12 u^2$



Answers

1. 2

2. 4

3. 5

4. 8

5. 4

6. 7

7. 9

8. 8

9. 2

10. 7

11. 5

12. 3