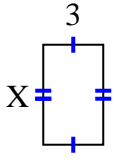


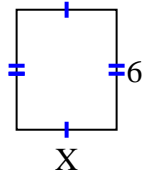


Find the value of X for each figure. Each figure is in centimeters (cm). Not to scale.

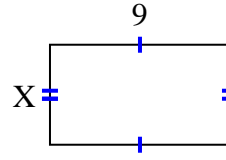
1) area = 15 cm^2



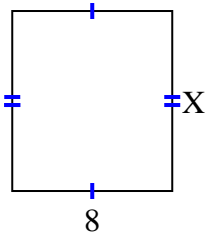
2) area = 30 cm^2



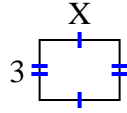
3) area = 45 cm^2



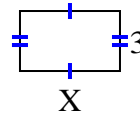
4) area = 72 cm^2



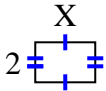
5) area = 12 cm^2



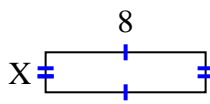
6) area = 15 cm^2



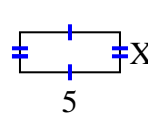
7) area = 6 cm^2



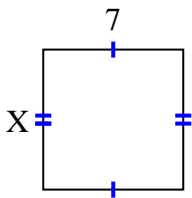
8) area = 16 cm^2



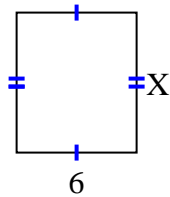
9) area = 10 cm^2



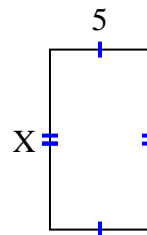
10) area = 49 cm^2



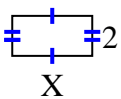
11) area = 42 cm^2



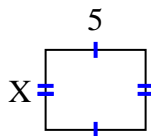
12) area = 45 cm^2



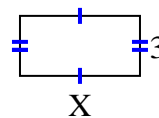
13) area = 8 cm^2



14) area = 20 cm^2



15) area = 18 cm^2



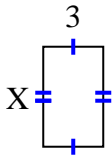
Answers

1. _____
2. _____
3. _____
4. _____
5. _____
6. _____
7. _____
8. _____
9. _____
10. _____
11. _____
12. _____
13. _____
14. _____
15. _____

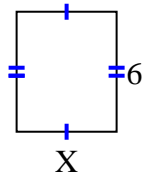


Find the value of X for each figure. Each figure is in centimeters (cm). Not to scale.

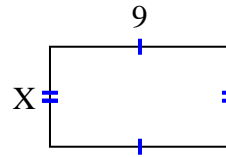
1) area = 15 cm^2



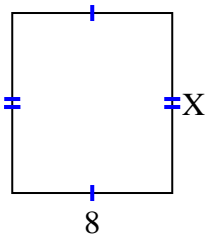
2) area = 30 cm^2



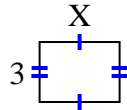
3) area = 45 cm^2



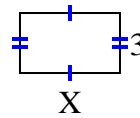
4) area = 72 cm^2



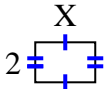
5) area = 12 cm^2



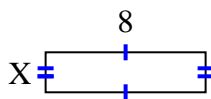
6) area = 15 cm^2



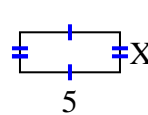
7) area = 6 cm^2



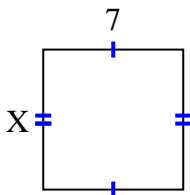
8) area = 16 cm^2



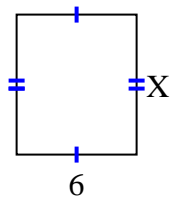
9) area = 10 cm^2



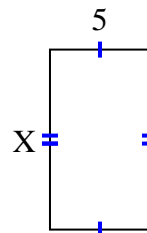
10) area = 49 cm^2



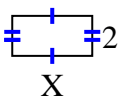
11) area = 42 cm^2



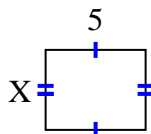
12) area = 45 cm^2



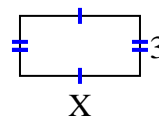
13) area = 8 cm^2



14) area = 20 cm^2



15) area = 18 cm^2



Answers

1. 5

2. 5

3. 5

4. 9

5. 4

6. 5

7. 3

8. 2

9. 2

10. 7

11. 7

12. 9

13. 4

14. 4

15. 6