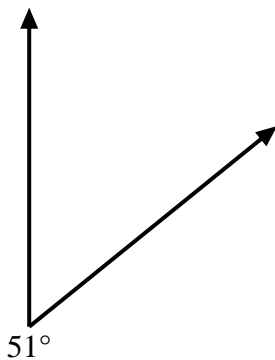


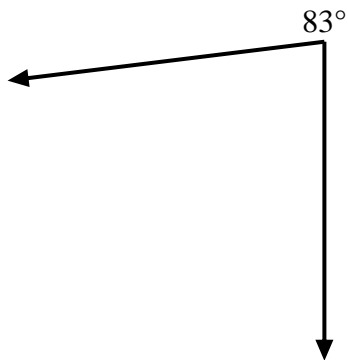


Use a protractor to create a triangle from the figure shown. Answer with the missing angles. Answers will vary.

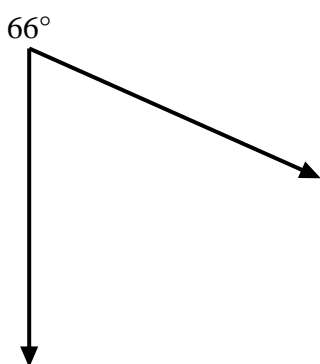
1)



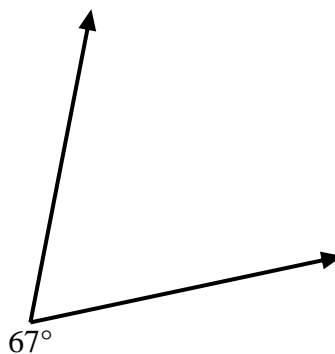
2)



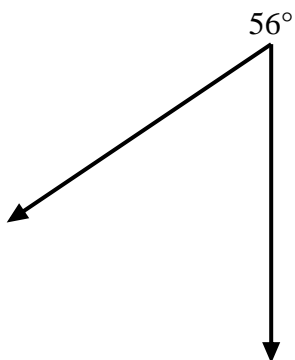
3)



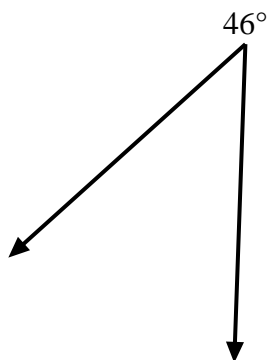
4)



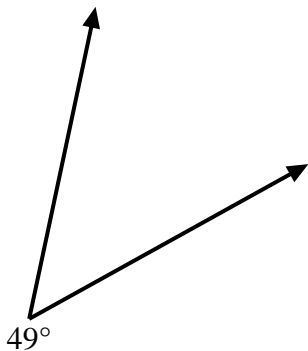
5)



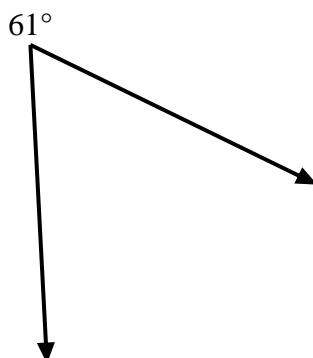
6)



7)



8)



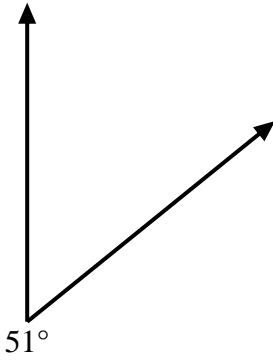
Answers

- 1. \_\_\_\_\_
- 2. \_\_\_\_\_
- 3. \_\_\_\_\_
- 4. \_\_\_\_\_
- 5. \_\_\_\_\_
- 6. \_\_\_\_\_
- 7. \_\_\_\_\_
- 8. \_\_\_\_\_

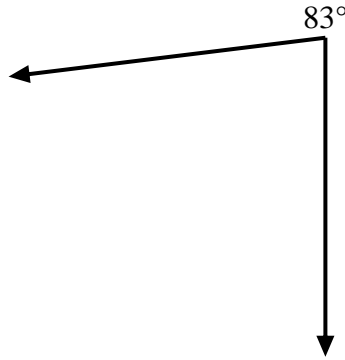


Use a protractor to create a triangle from the figure shown. Answer with the missing angles. Answers will vary.

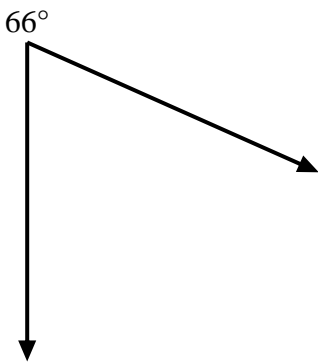
1)



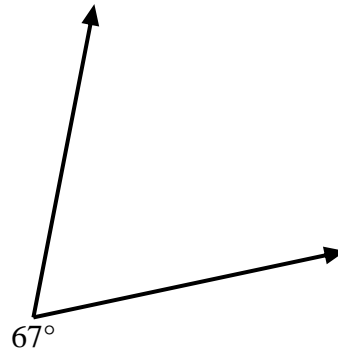
2)



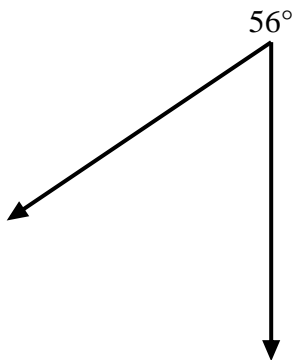
3)



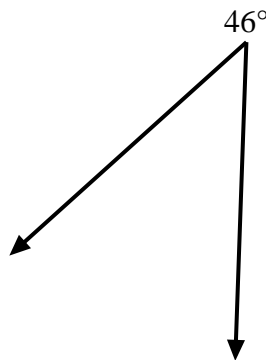
4)



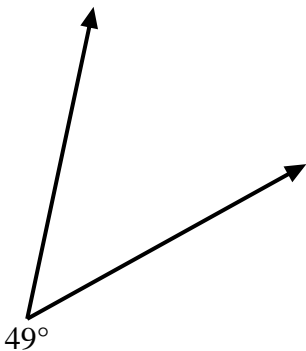
5)



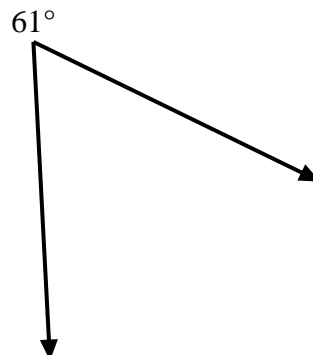
6)



7)



8)



Answers

1.       =129      

2.       =97      

3.       =114      

4.       =113      

5.       =124      

6.       =134      

7.       =131      

8.       =119