



Solve each problem.

Answers

1) $1 + 1 = \underline{\quad}$

2) $2 + 1 = \underline{\quad}$

3) $1 + 4 = \underline{\quad}$

4) $3 + 0 = \underline{\quad}$

5) $3 + 2 = \underline{\quad}$

6) $4 + 0 = \underline{\quad}$

7) $1 + 2 = \underline{\quad}$

8) $5 + 0 = \underline{\quad}$

9) $5 - 2 = \underline{\quad}$

10) $4 - 4 = \underline{\quad}$

11) $5 - 5 = \underline{\quad}$

12) $2 - 2 = \underline{\quad}$

13) $3 - 3 = \underline{\quad}$

14) $4 - 2 = \underline{\quad}$

15) $5 - 3 = \underline{\quad}$

16) $2 - 1 = \underline{\quad}$

1. _____

2. _____

3. _____

4. _____

5. _____

6. _____

7. _____

8. _____

9. _____

10. _____

11. _____

12. _____

13. _____

14. _____

15. _____

16. _____



Solve each problem.

1) $1 + 1 = \underline{2}$

2) $2 + 1 = \underline{3}$

3) $1 + 4 = \underline{5}$

4) $3 + 0 = \underline{3}$

5) $3 + 2 = \underline{5}$

6) $4 + 0 = \underline{4}$

7) $1 + 2 = \underline{3}$

8) $5 + 0 = \underline{5}$

9) $5 - 2 = \underline{3}$

10) $4 - 4 = \underline{0}$

11) $5 - 5 = \underline{0}$

12) $2 - 2 = \underline{0}$

13) $3 - 3 = \underline{0}$

14) $4 - 2 = \underline{2}$

15) $5 - 3 = \underline{2}$



16) $2 - 1 = \underline{1}$



Answers1. 22. 33. 54. 35. 56. 47. 38. 59. 310. 011. 012. 013. 014. 215. 216. 1






Solve each problem.



Answers


1) 1 + 1 = _____
 + 



2) 2 + 1 = _____
 + 

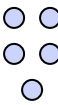
3) 1 + 4 = _____
 + 



4) 3 + 0 = _____




5) 3 + 2 = _____
 + 



6) 4 + 0 = _____




7) 1 + 2 = _____
 + 



8) 5 + 0 = _____




9) 5 - 2 = _____
 - 



10) 4 - 4 = _____
 - 



11) 5 - 5 = _____
 - 

12) 2 - 2 = _____
 - 

13) 3 - 3 = _____
 - 

14) 4 - 2 = _____
 - 

15) 5 - 3 = _____
 - 

16) 2 - 1 = _____
 - 

1. _____

2. _____

3. _____

4. _____

5. _____

6. _____

7. _____

8. _____

9. _____

10. _____

11. _____

12. _____

13. _____

14. _____

15. _____

16. _____